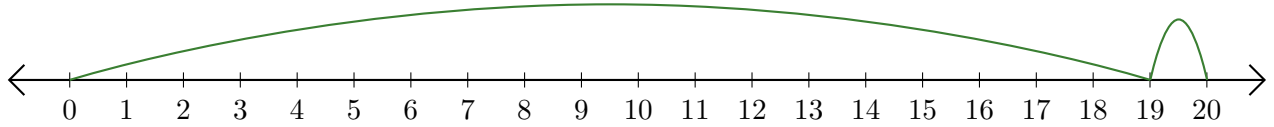


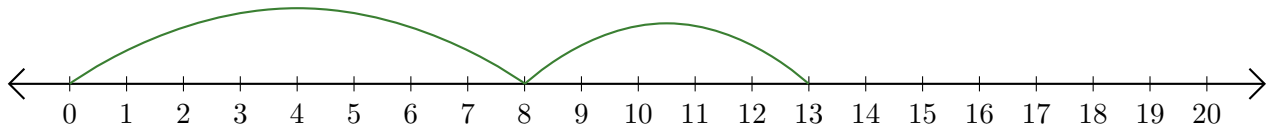
Lecture de Nombres sur une Droite Graduée (F)

Déterminez les termes et la somme (résultat) représentés sur chaque droite graduée.

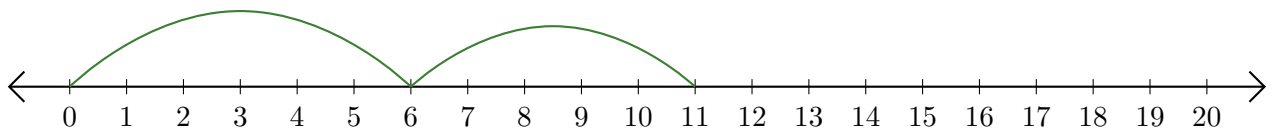
1. $\underline{\quad} + \underline{\quad} = \underline{\quad}$



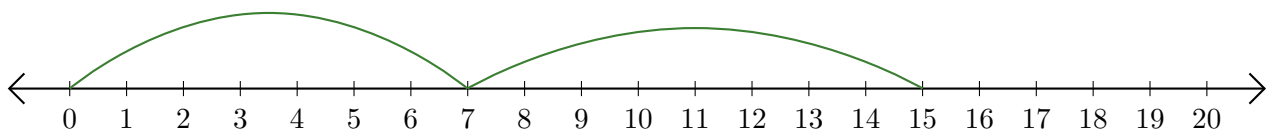
2. $\underline{\quad} + \underline{\quad} = \underline{\quad}$



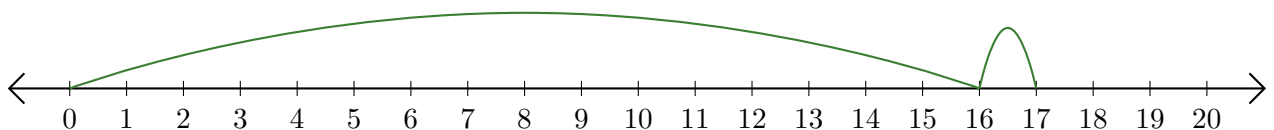
3. $\underline{\quad} + \underline{\quad} = \underline{\quad}$



4. $\underline{\quad} + \underline{\quad} = \underline{\quad}$



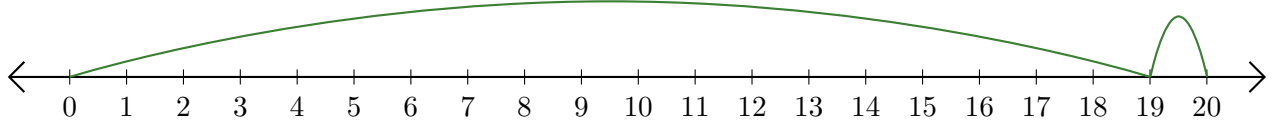
5. $\underline{\quad} + \underline{\quad} = \underline{\quad}$



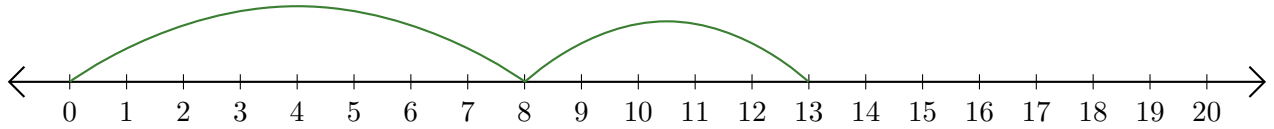
Lecture de Nombres sur une Droite Graduée (F) Réponses

Déterminez les termes et la somme (résultat) représentés sur chaque droite graduée.

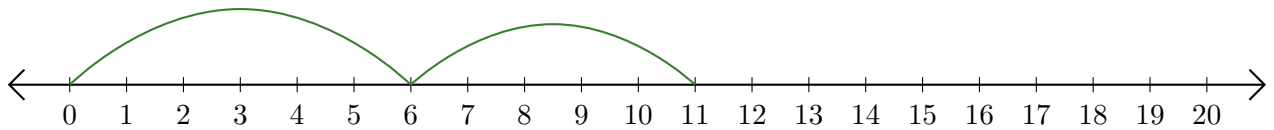
1. $\underline{19} + \underline{1} = \underline{20}$



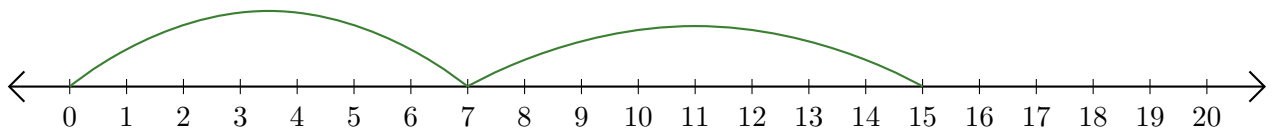
2. $\underline{8} + \underline{5} = \underline{13}$



3. $\underline{6} + \underline{5} = \underline{11}$



4. $\underline{7} + \underline{8} = \underline{15}$



5. $\underline{16} + \underline{1} = \underline{17}$

