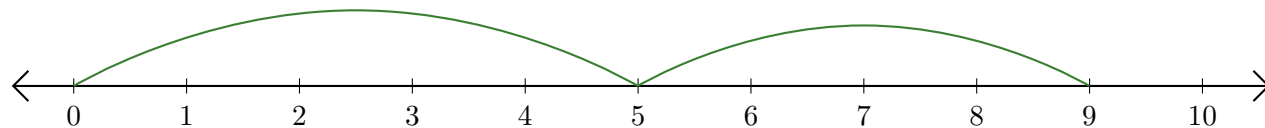


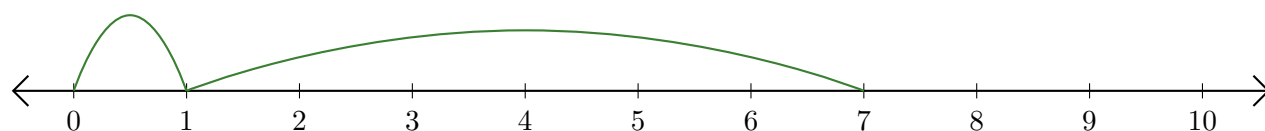
Lecture de Nombres sur une Droite Graduée (H)

Déterminez les termes et la somme (résultat) représentés sur chaque droite graduée.

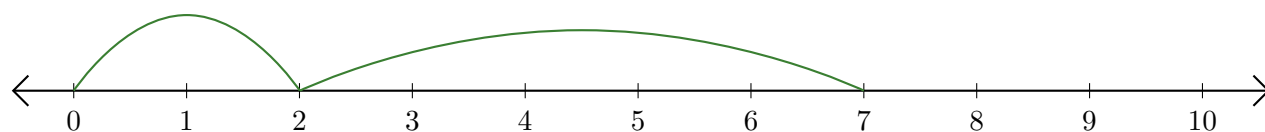
1. $\underline{\quad} + \underline{\quad} = \underline{\quad}$



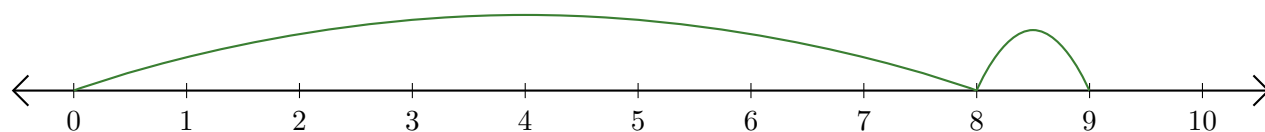
2. $\underline{\quad} + \underline{\quad} = \underline{\quad}$



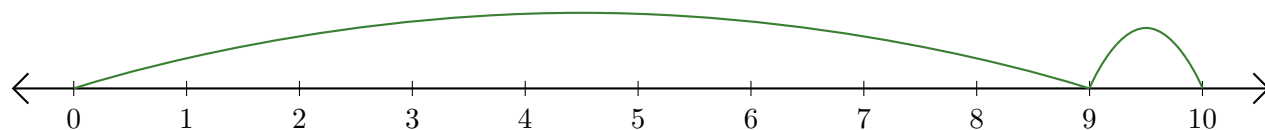
3. $\underline{\quad} + \underline{\quad} = \underline{\quad}$



4. $\underline{\quad} + \underline{\quad} = \underline{\quad}$



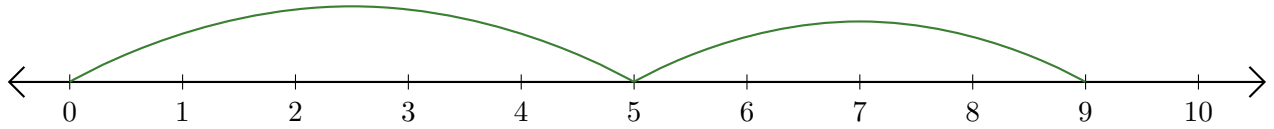
5. $\underline{\quad} + \underline{\quad} = \underline{\quad}$



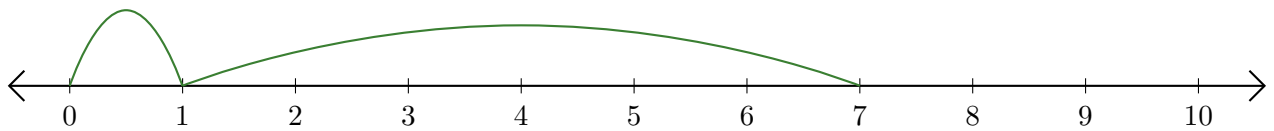
Lecture de Nombres sur une Droite Graduée (H) Réponses

Déterminez les termes et la somme (résultat) représentés sur chaque droite graduée.

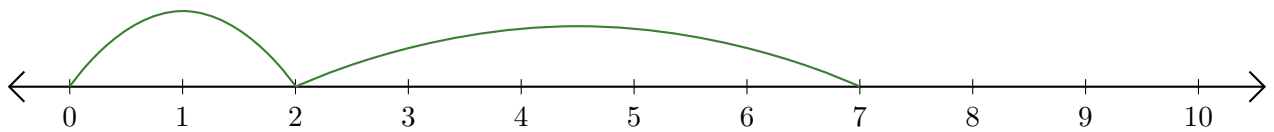
1. $\underline{5} + \underline{4} = \underline{9}$



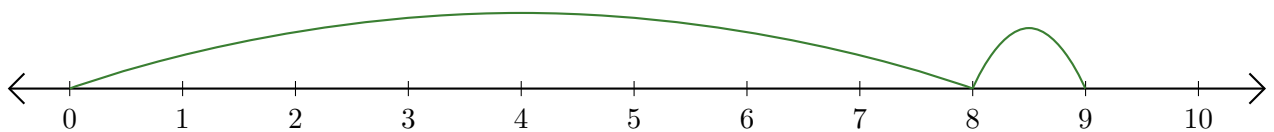
2. $\underline{1} + \underline{6} = \underline{7}$



3. $\underline{2} + \underline{5} = \underline{7}$



4. $\underline{8} + \underline{1} = \underline{9}$



5. $\underline{9} + \underline{1} = \underline{10}$

