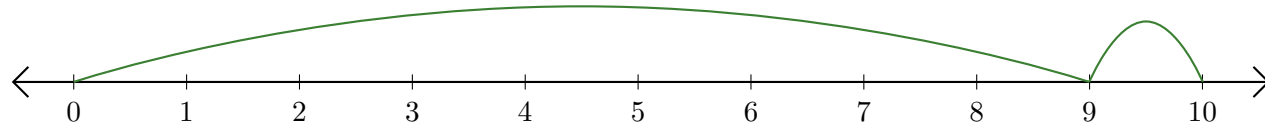


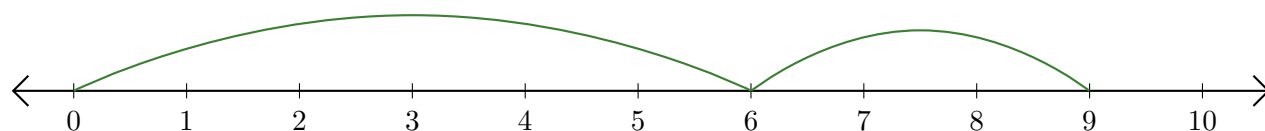
Lecture de Nombres sur une Droite Graduée (G)

Déterminez les termes et la somme (résultat) représentés sur chaque droite graduée.

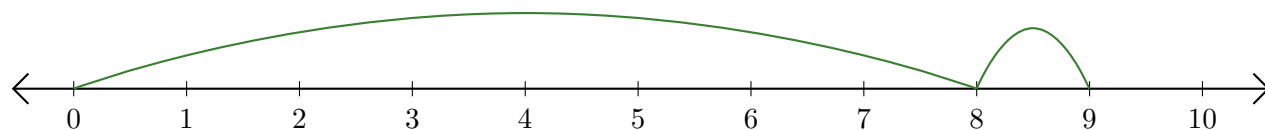
1. $\underline{\quad} + \underline{\quad} = \underline{\quad}$



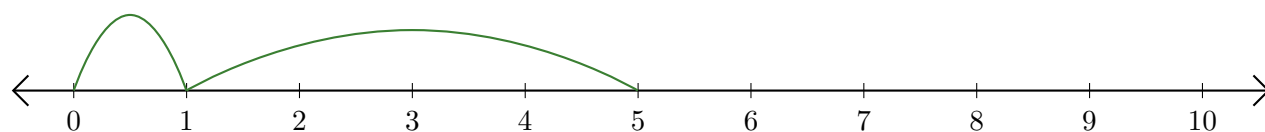
2. $\underline{\quad} + \underline{\quad} = \underline{\quad}$



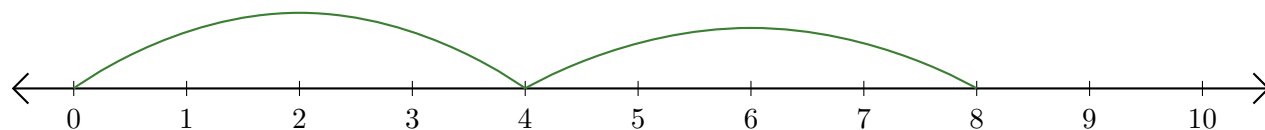
3. $\underline{\quad} + \underline{\quad} = \underline{\quad}$



4. $\underline{\quad} + \underline{\quad} = \underline{\quad}$



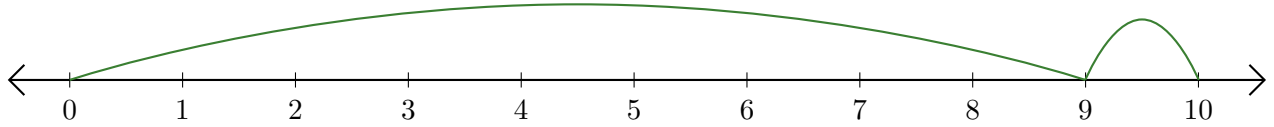
5. $\underline{\quad} + \underline{\quad} = \underline{\quad}$



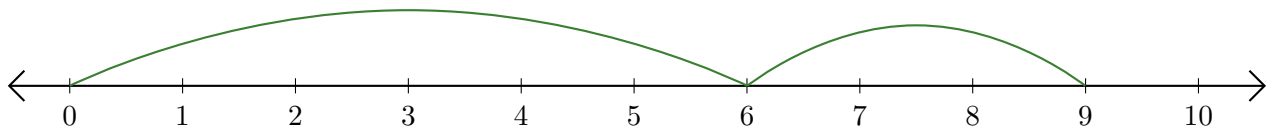
Lecture de Nombres sur une Droite Graduée (G) Réponses

Déterminez les termes et la somme (résultat) représentés sur chaque droite graduée.

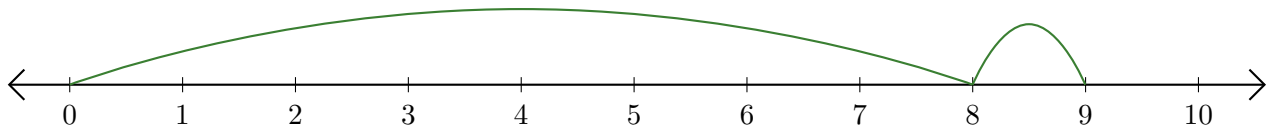
1. $\underline{9} + \underline{1} = \underline{10}$



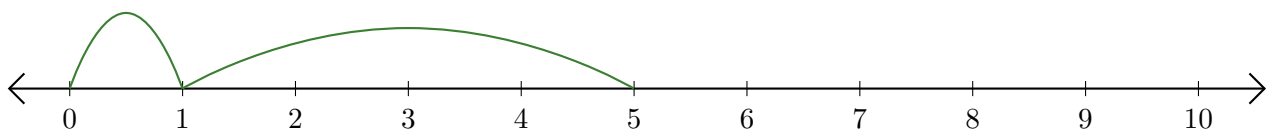
2. $\underline{6} + \underline{3} = \underline{9}$



3. $\underline{8} + \underline{1} = \underline{9}$



4. $\underline{1} + \underline{4} = \underline{5}$



5. $\underline{4} + \underline{4} = \underline{8}$

