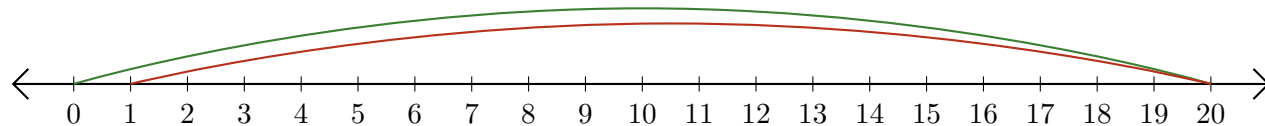


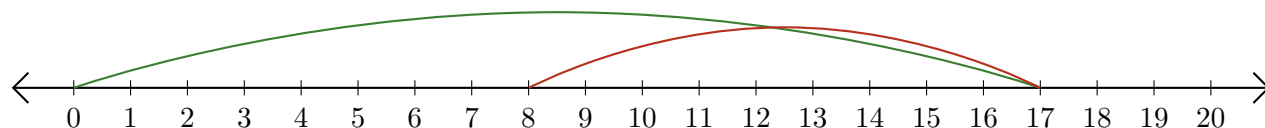
# Lecture de Nombres sur une Droite Graduée (F)

Déterminez les termes et la différence (résultat) représentés sur chaque droite graduée.

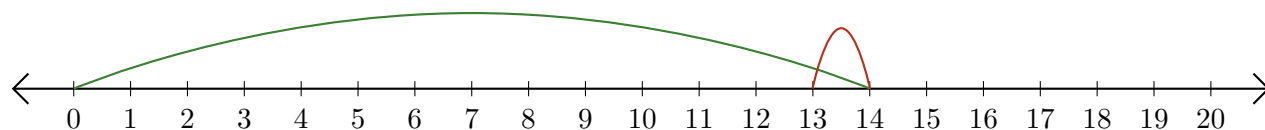
1.  $\underline{\quad} - \underline{\quad} = \underline{\quad}$



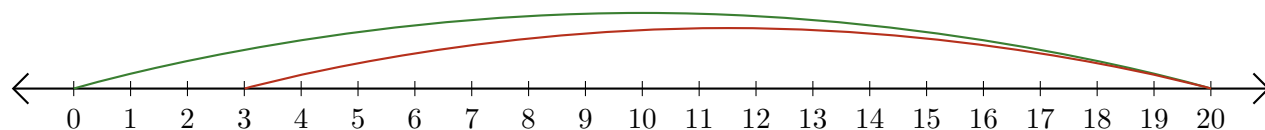
2.  $\underline{\quad} - \underline{\quad} = \underline{\quad}$



3.  $\underline{\quad} - \underline{\quad} = \underline{\quad}$



4.  $\underline{\quad} - \underline{\quad} = \underline{\quad}$



5.  $\underline{\quad} - \underline{\quad} = \underline{\quad}$

