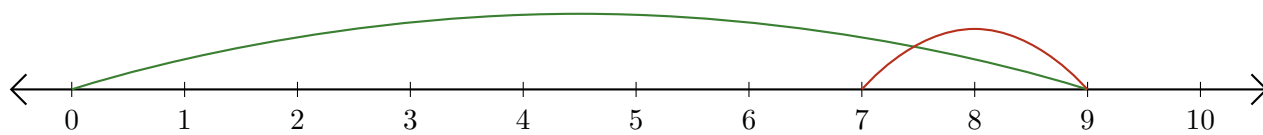


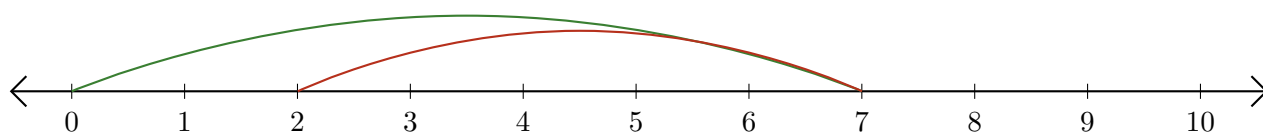
# Lecture de Nombres sur une Droite Graduée (F)

Déterminez la question que chaque droite graduée démontre.

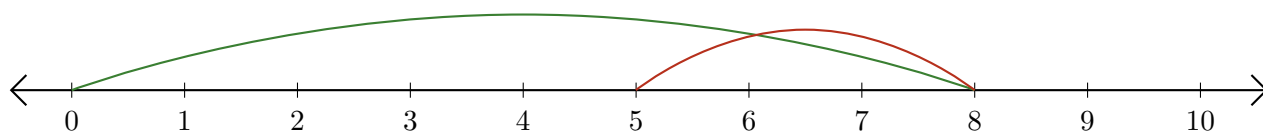
1.  $\underline{\quad} - \underline{\quad} = \underline{\quad}$



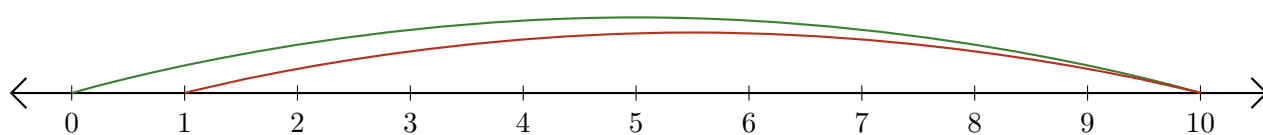
2.  $\underline{\quad} - \underline{\quad} = \underline{\quad}$



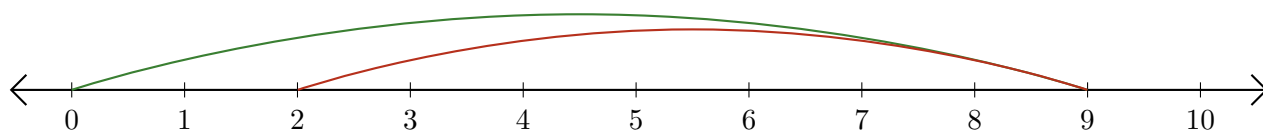
3.  $\underline{\quad} - \underline{\quad} = \underline{\quad}$



4.  $\underline{\quad} - \underline{\quad} = \underline{\quad}$



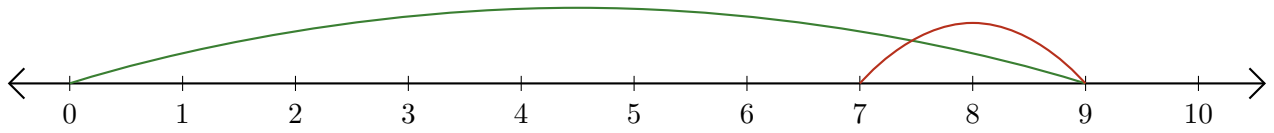
5.  $\underline{\quad} - \underline{\quad} = \underline{\quad}$



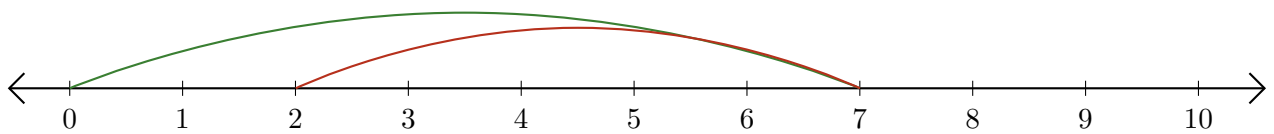
# Lecture de Nombres sur une Droite Graduée (F) Réponses

Déterminez la question que chaque droite graduée démontre.

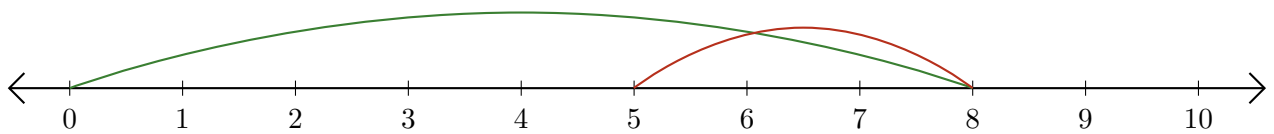
1.  $\underline{9} - \underline{2} = \underline{7}$



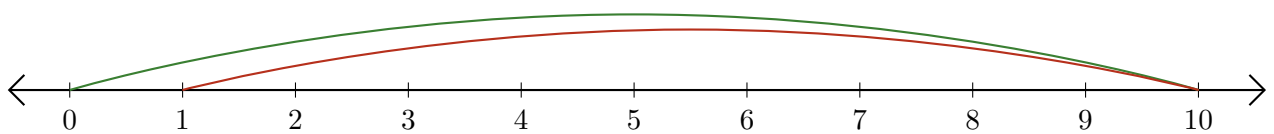
2.  $\underline{7} - \underline{5} = \underline{2}$



3.  $\underline{8} - \underline{3} = \underline{5}$



4.  $\underline{10} - \underline{9} = \underline{1}$



5.  $\underline{9} - \underline{7} = \underline{2}$

