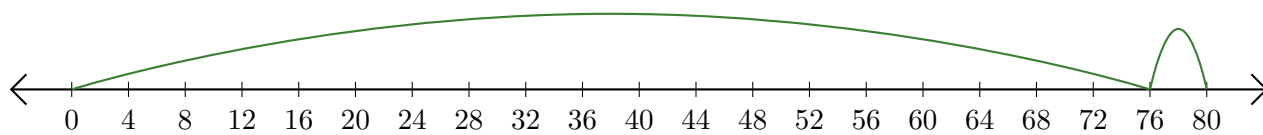


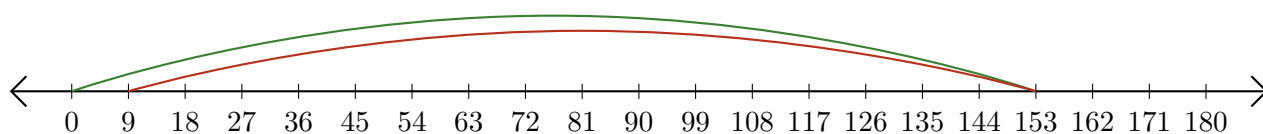
# Lecture de Nombres sur une Droite Graduée (I)

Déterminez la question que chaque droite graduée démontre.

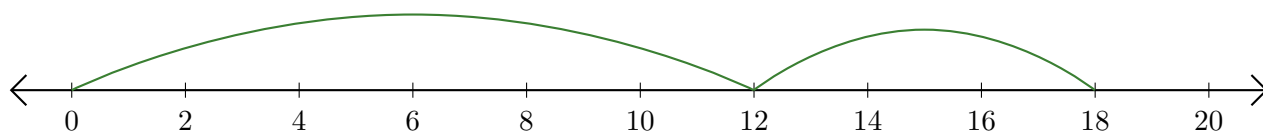
1.  $\underline{\quad} + \underline{\quad} = \underline{\quad}$



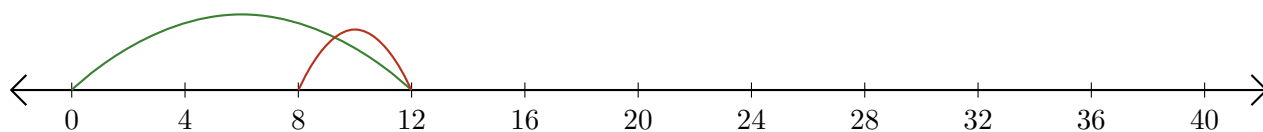
2.  $\underline{\quad} - \underline{\quad} = \underline{\quad}$



3.  $\underline{\quad} + \underline{\quad} = \underline{\quad}$



4.  $\underline{\quad} - \underline{\quad} = \underline{\quad}$



5.  $\underline{\quad} - \underline{\quad} = \underline{\quad}$

