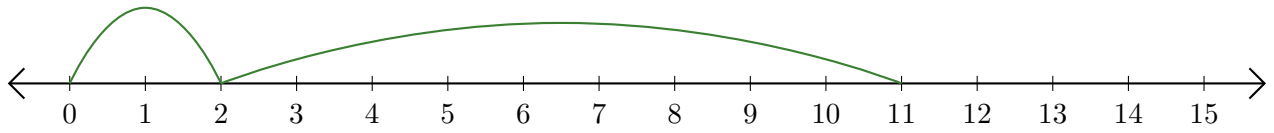


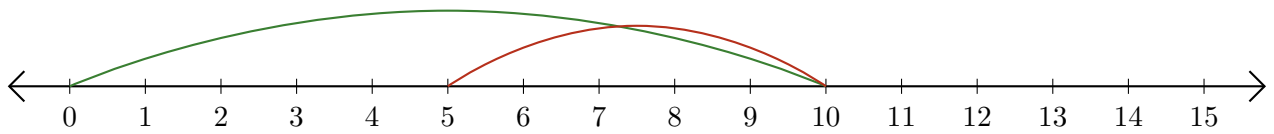
# Lecture de Nombres sur une Droite Graduée (A)

Déterminez la question que chaque droite graduée démontre.

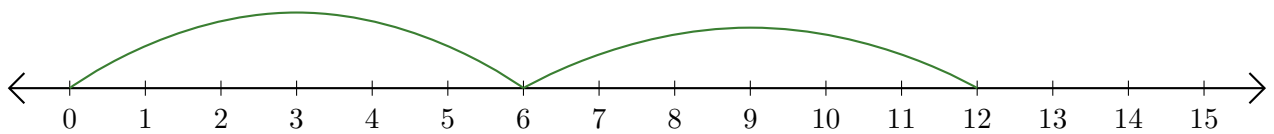
1.  $\underline{\quad} + \underline{\quad} = \underline{\quad}$



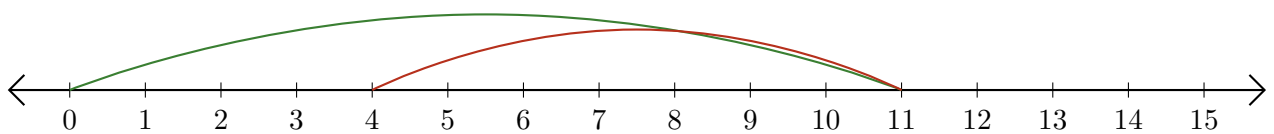
2.  $\underline{\quad} - \underline{\quad} = \underline{\quad}$



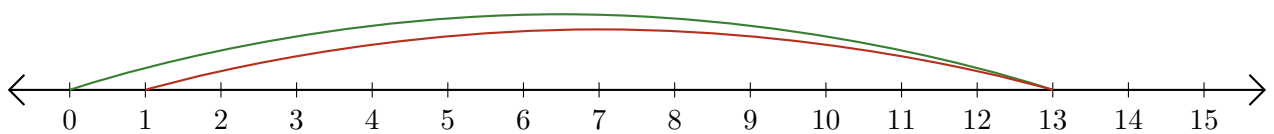
3.  $\underline{\quad} + \underline{\quad} = \underline{\quad}$



4.  $\underline{\quad} - \underline{\quad} = \underline{\quad}$



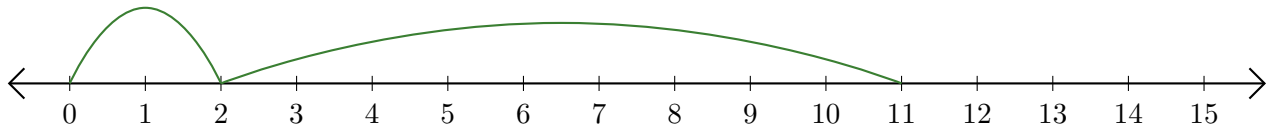
5.  $\underline{\quad} - \underline{\quad} = \underline{\quad}$



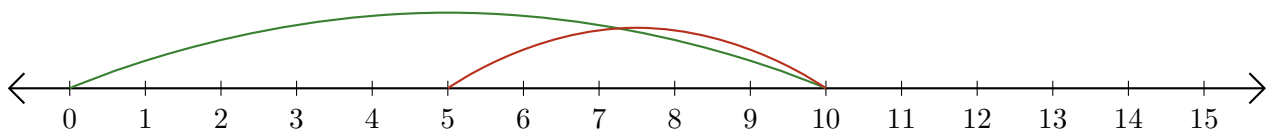
# Lecture de Nombres sur une Droite Graduée (A) Réponses

Déterminez la question que chaque droite graduée démontre.

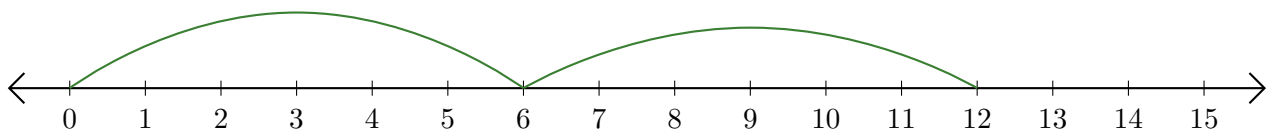
1.  $\underline{2} + \underline{9} = \underline{11}$



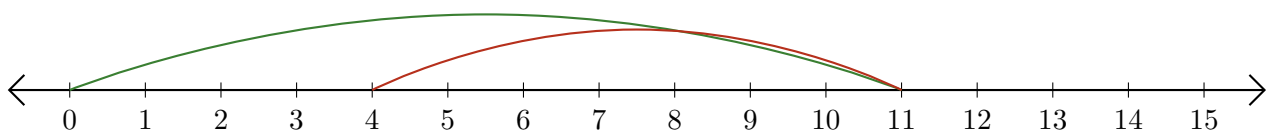
2.  $\underline{10} - \underline{5} = \underline{5}$



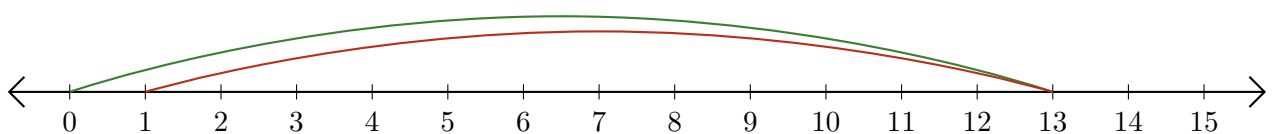
3.  $\underline{6} + \underline{6} = \underline{12}$



4.  $\underline{11} - \underline{7} = \underline{4}$



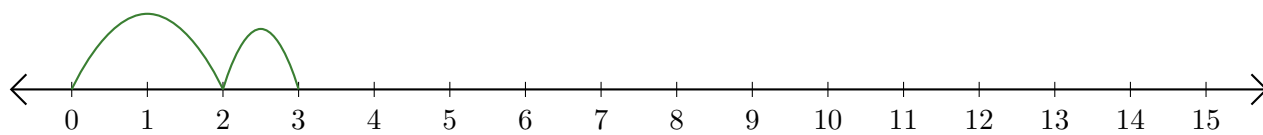
5.  $\underline{13} - \underline{12} = \underline{1}$



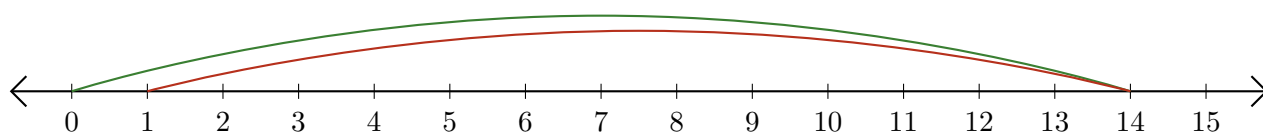
# Lecture de Nombres sur une Droite Graduée (B)

Déterminez la question que chaque droite graduée démontre.

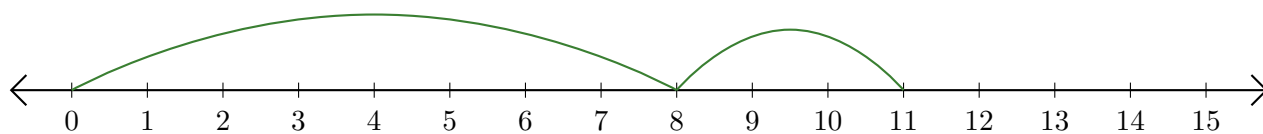
1.  $\underline{\quad} + \underline{\quad} = \underline{\quad}$



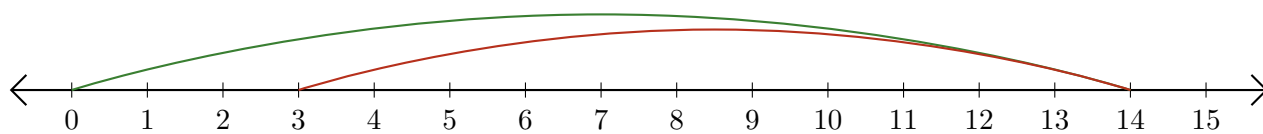
2.  $\underline{\quad} - \underline{\quad} = \underline{\quad}$



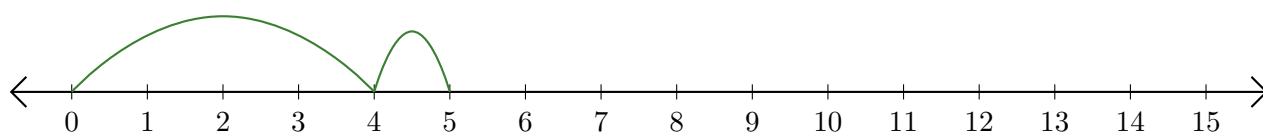
3.  $\underline{\quad} + \underline{\quad} = \underline{\quad}$



4.  $\underline{\quad} - \underline{\quad} = \underline{\quad}$



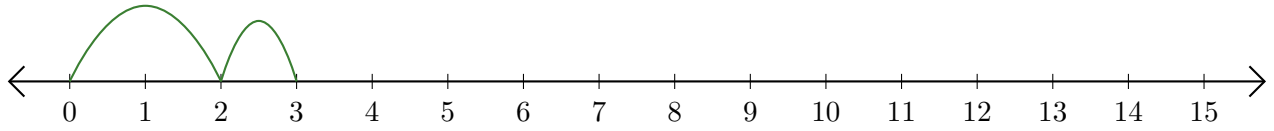
5.  $\underline{\quad} + \underline{\quad} = \underline{\quad}$



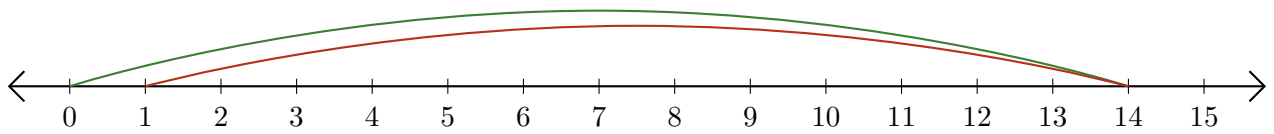
# Lecture de Nombres sur une Droite Graduée (B) Réponses

Déterminez la question que chaque droite graduée démontre.

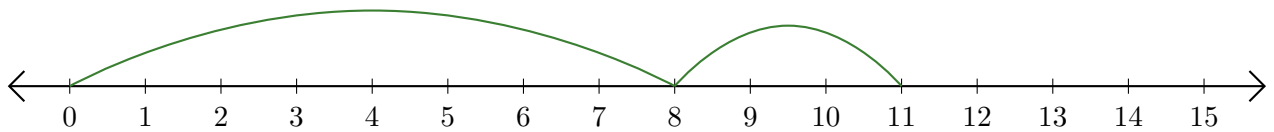
1.  $\underline{2} + \underline{1} = \underline{3}$



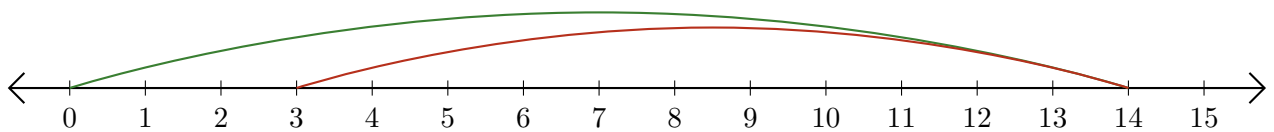
2.  $\underline{14} - \underline{13} = \underline{1}$



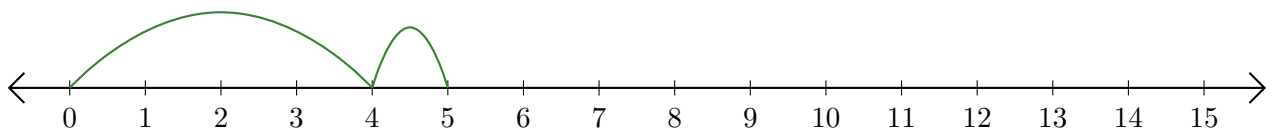
3.  $\underline{8} + \underline{3} = \underline{11}$



4.  $\underline{14} - \underline{11} = \underline{3}$



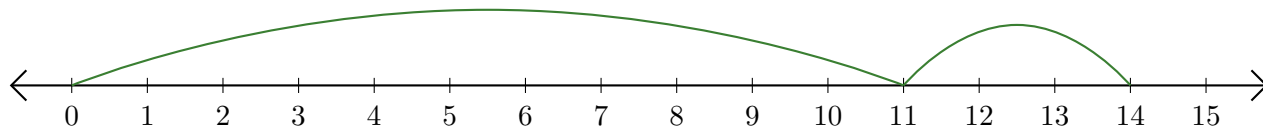
5.  $\underline{4} + \underline{1} = \underline{5}$



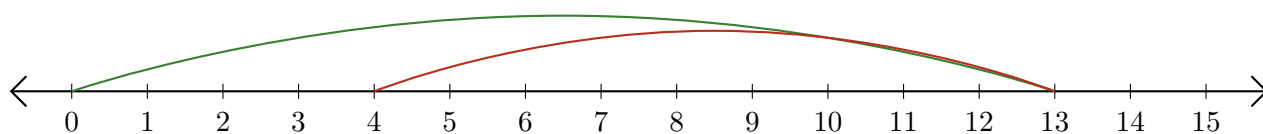
# Lecture de Nombres sur une Droite Graduée (C)

Déterminez la question que chaque droite graduée démontre.

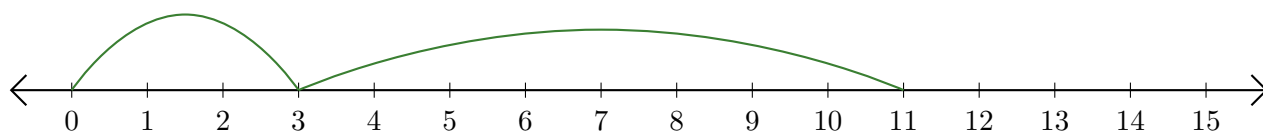
1.  $\underline{\quad} + \underline{\quad} = \underline{\quad}$



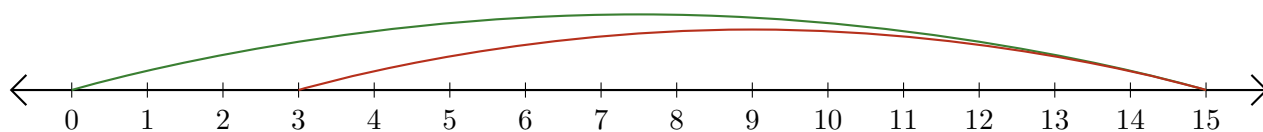
2.  $\underline{\quad} - \underline{\quad} = \underline{\quad}$



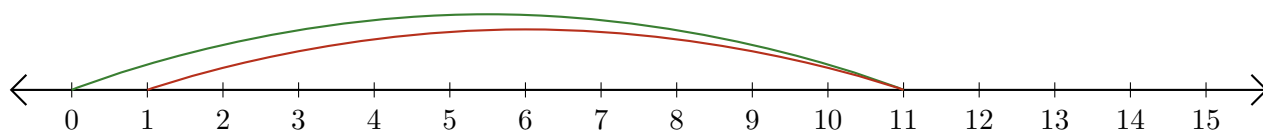
3.  $\underline{\quad} + \underline{\quad} = \underline{\quad}$



4.  $\underline{\quad} - \underline{\quad} = \underline{\quad}$



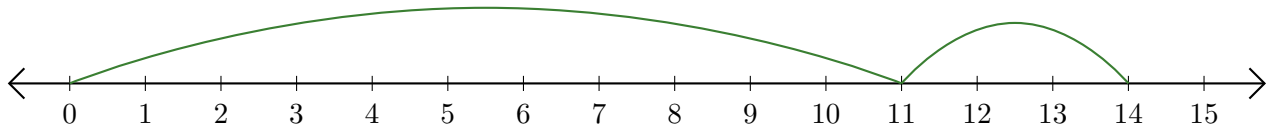
5.  $\underline{\quad} - \underline{\quad} = \underline{\quad}$



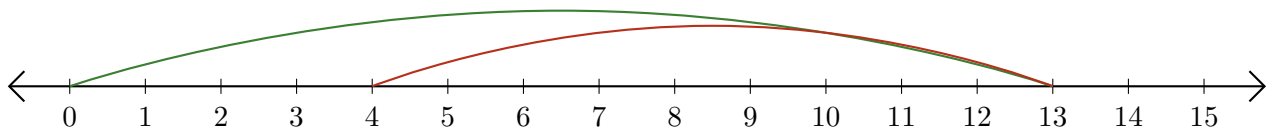
# Lecture de Nombres sur une Droite Graduée (C) Réponses

Déterminez la question que chaque droite graduée démontre.

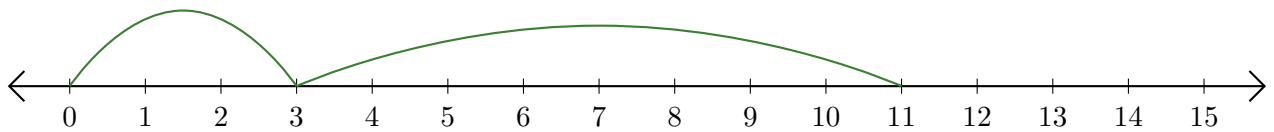
1.  $\underline{11} + \underline{3} = \underline{14}$



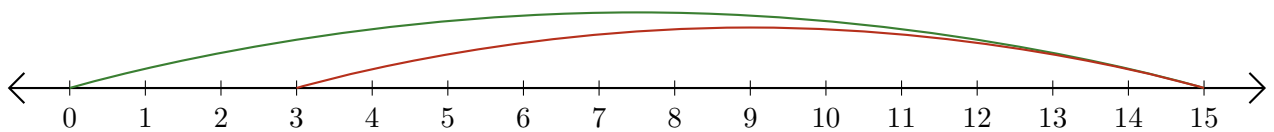
2.  $\underline{13} - \underline{9} = \underline{4}$



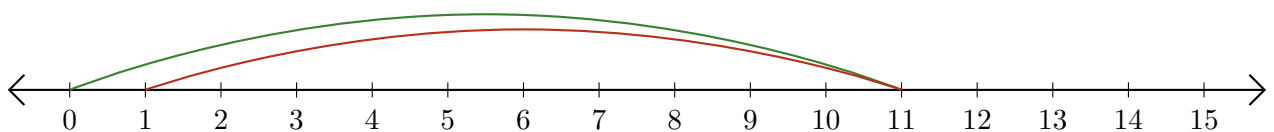
3.  $\underline{3} + \underline{8} = \underline{11}$



4.  $\underline{15} - \underline{12} = \underline{3}$



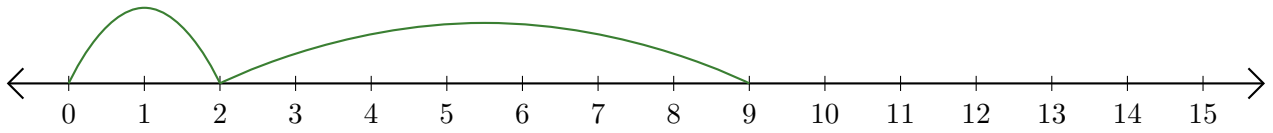
5.  $\underline{11} - \underline{10} = \underline{1}$



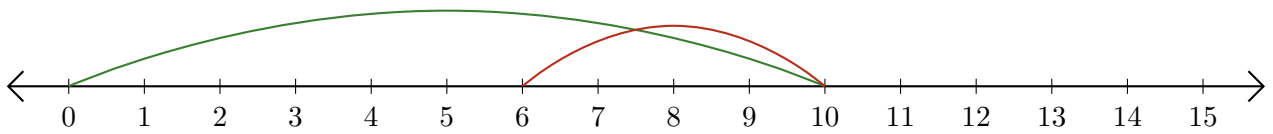
# Lecture de Nombres sur une Droite Graduée (D)

Déterminez la question que chaque droite graduée démontre.

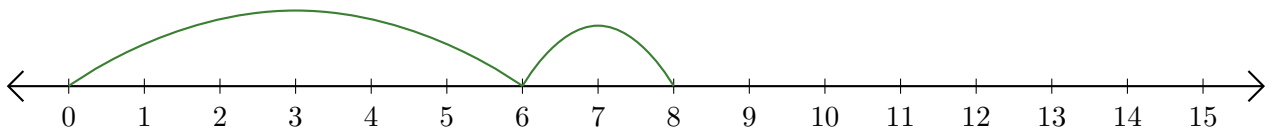
1.  $\underline{\quad} + \underline{\quad} = \underline{\quad}$



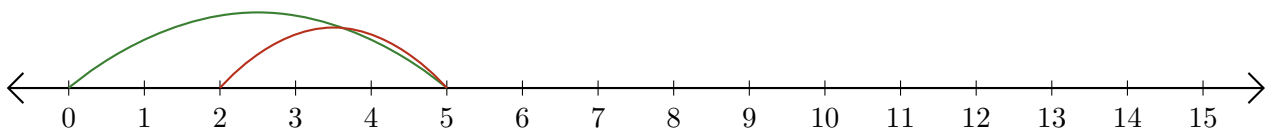
2.  $\underline{\quad} - \underline{\quad} = \underline{\quad}$



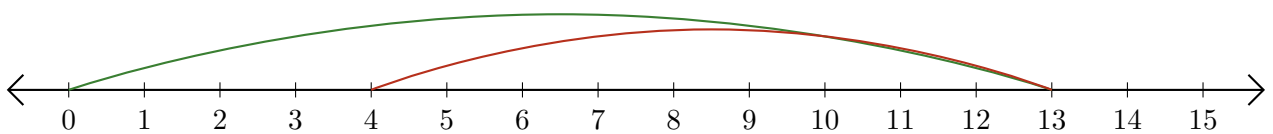
3.  $\underline{\quad} + \underline{\quad} = \underline{\quad}$



4.  $\underline{\quad} - \underline{\quad} = \underline{\quad}$



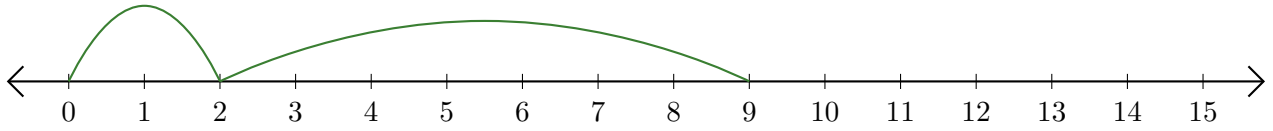
5.  $\underline{\quad} - \underline{\quad} = \underline{\quad}$



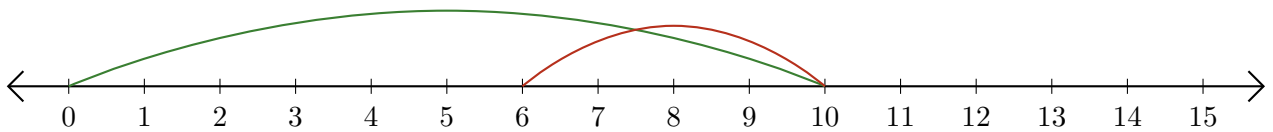
# Lecture de Nombres sur une Droite Graduée (D) Réponses

Déterminez la question que chaque droite graduée démontre.

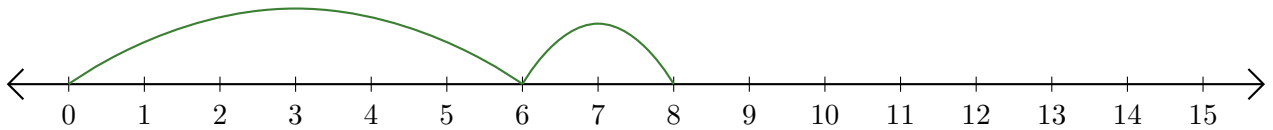
1.  $\underline{2} + \underline{7} = \underline{9}$



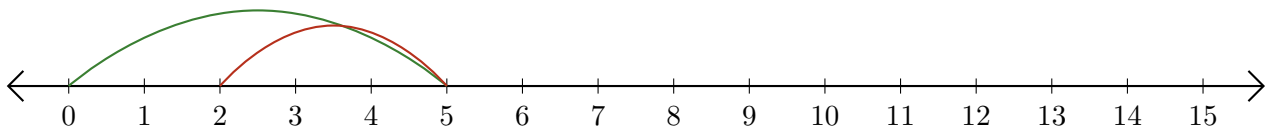
2.  $\underline{10} - \underline{4} = \underline{6}$



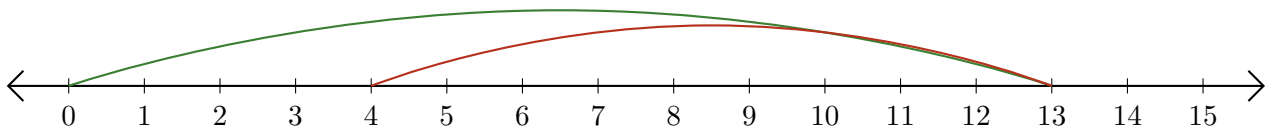
3.  $\underline{6} + \underline{2} = \underline{8}$



4.  $\underline{5} - \underline{3} = \underline{2}$



5.  $\underline{13} - \underline{9} = \underline{4}$

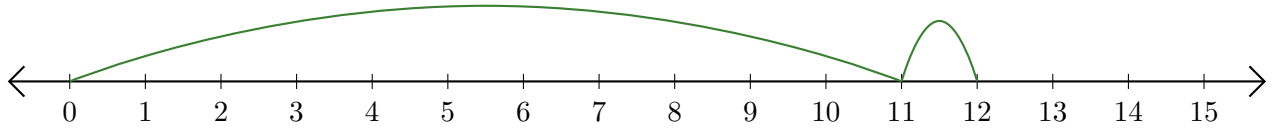




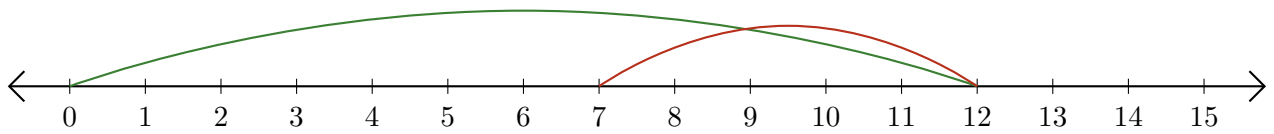
# Lecture de Nombres sur une Droite Graduée (E)

Déterminez la question que chaque droite graduée démontre.

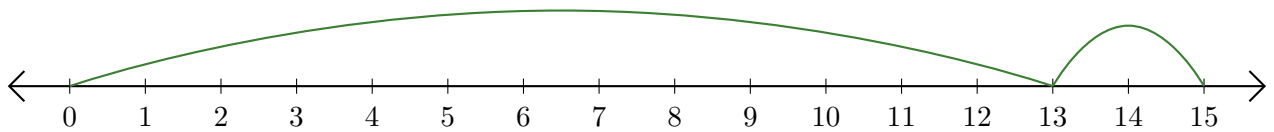
1.  $\underline{\quad} + \underline{\quad} = \underline{\quad}$



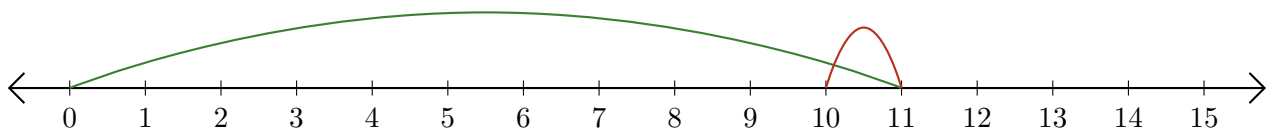
2.  $\underline{\quad} - \underline{\quad} = \underline{\quad}$



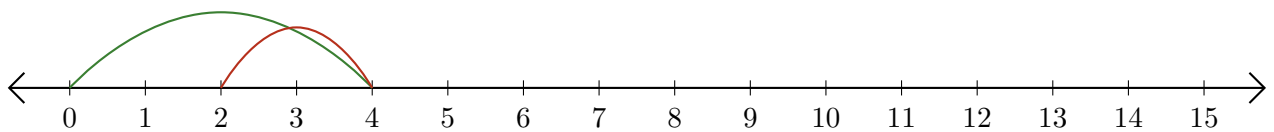
3.  $\underline{\quad} + \underline{\quad} = \underline{\quad}$



4.  $\underline{\quad} - \underline{\quad} = \underline{\quad}$



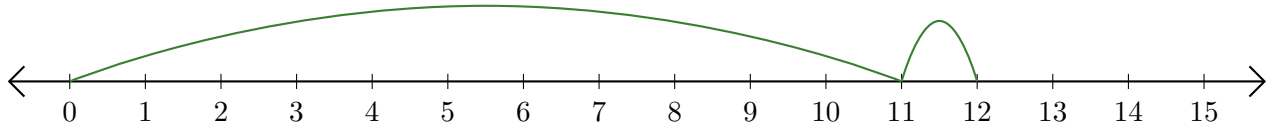
5.  $\underline{\quad} - \underline{\quad} = \underline{\quad}$



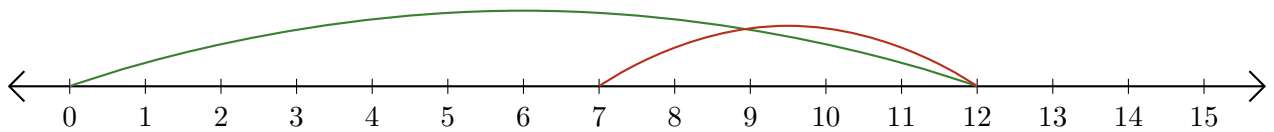
# Lecture de Nombres sur une Droite Graduée (E) Réponses

Déterminez la question que chaque droite graduée démontre.

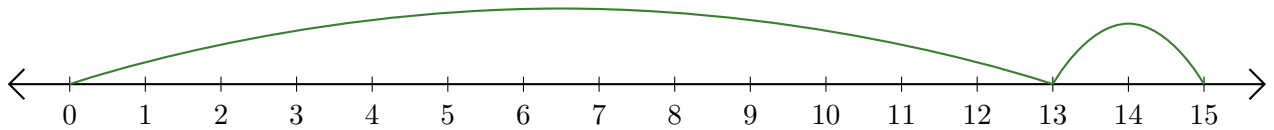
1.  $\underline{11} + \underline{1} = \underline{12}$



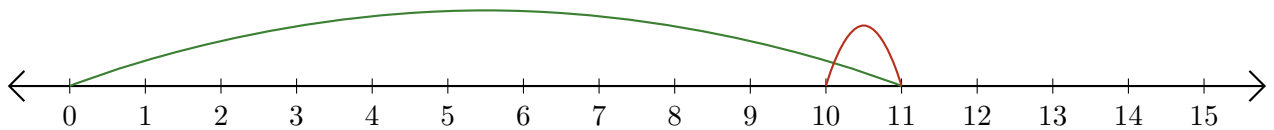
2.  $\underline{12} - \underline{5} = \underline{7}$



3.  $\underline{13} + \underline{2} = \underline{15}$



4.  $\underline{11} - \underline{1} = \underline{10}$



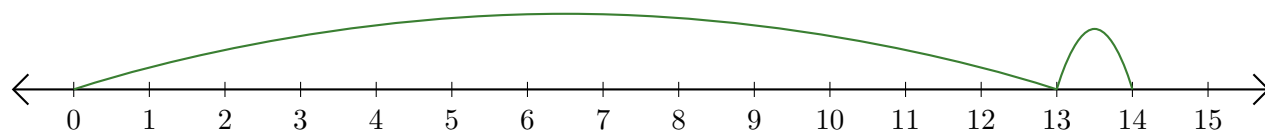
5.  $\underline{4} - \underline{2} = \underline{2}$



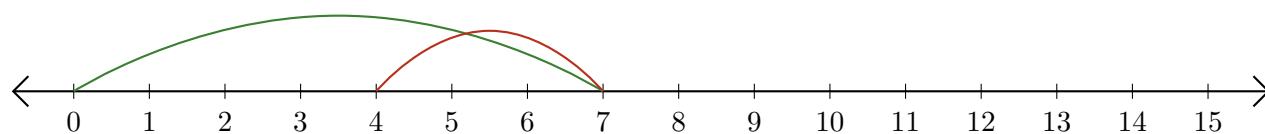
# Lecture de Nombres sur une Droite Graduée (F)

Déterminez la question que chaque droite graduée démontre.

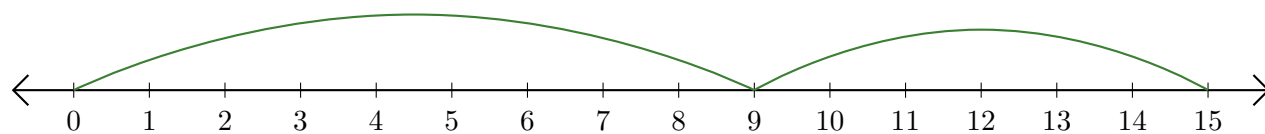
1.  $\underline{\quad} + \underline{\quad} = \underline{\quad}$



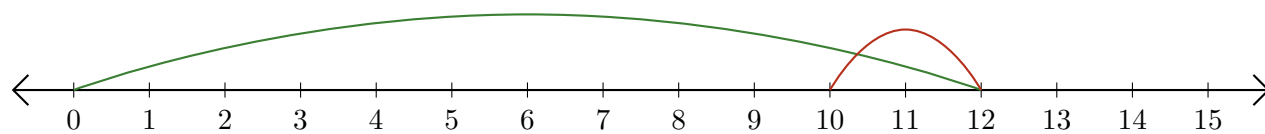
2.  $\underline{\quad} - \underline{\quad} = \underline{\quad}$



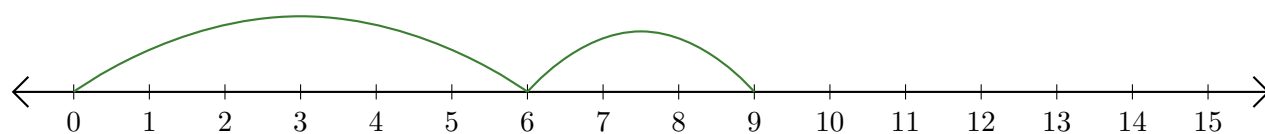
3.  $\underline{\quad} + \underline{\quad} = \underline{\quad}$



4.  $\underline{\quad} - \underline{\quad} = \underline{\quad}$



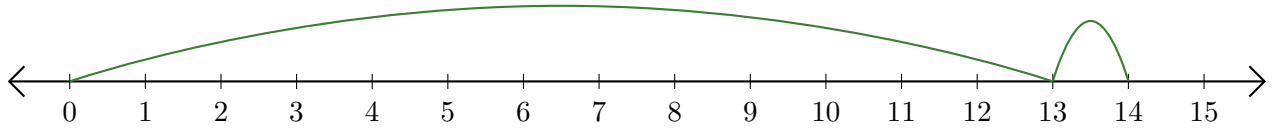
5.  $\underline{\quad} + \underline{\quad} = \underline{\quad}$



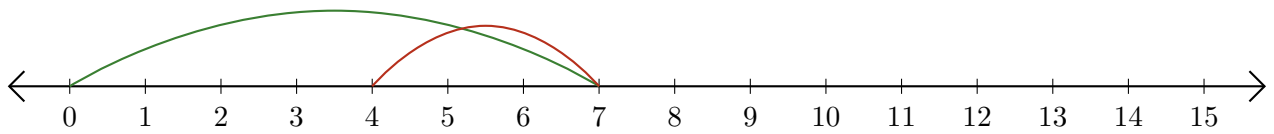
# Lecture de Nombres sur une Droite Graduée (F) Réponses

Déterminez la question que chaque droite graduée démontre.

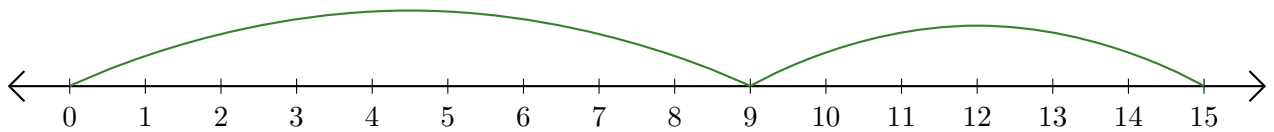
1.  $\underline{13} + \underline{1} = \underline{14}$



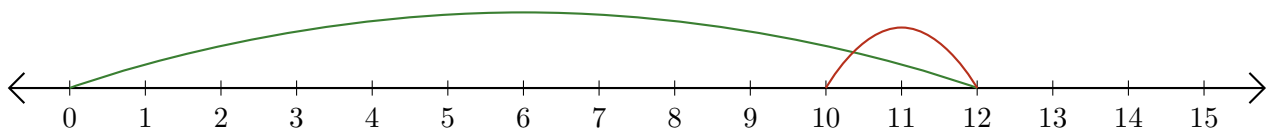
2.  $\underline{7} - \underline{3} = \underline{4}$



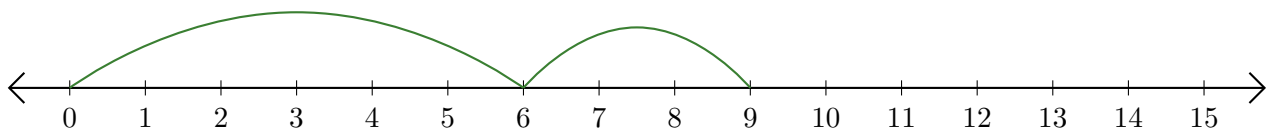
3.  $\underline{9} + \underline{6} = \underline{15}$



4.  $\underline{12} - \underline{2} = \underline{10}$



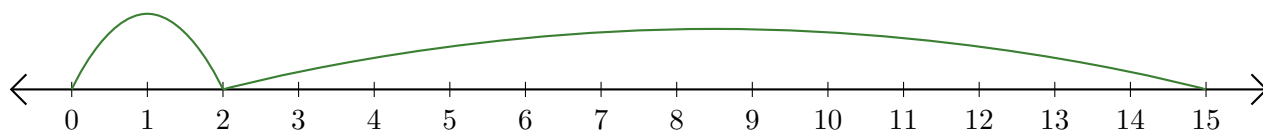
5.  $\underline{6} + \underline{3} = \underline{9}$



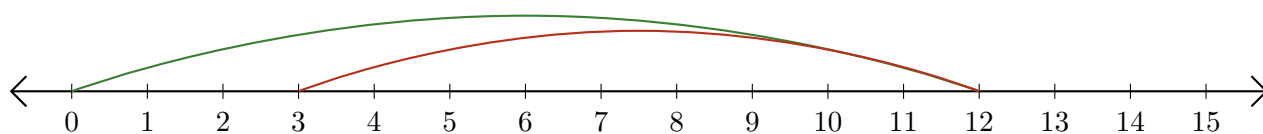
# Lecture de Nombres sur une Droite Graduée (G)

Déterminez la question que chaque droite graduée démontre.

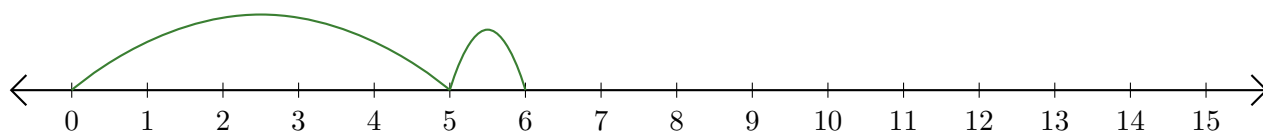
1.  $\underline{\quad} + \underline{\quad} = \underline{\quad}$



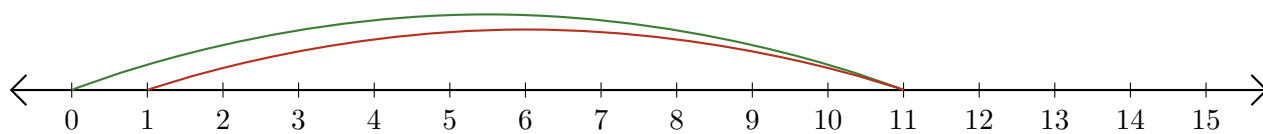
2.  $\underline{\quad} - \underline{\quad} = \underline{\quad}$



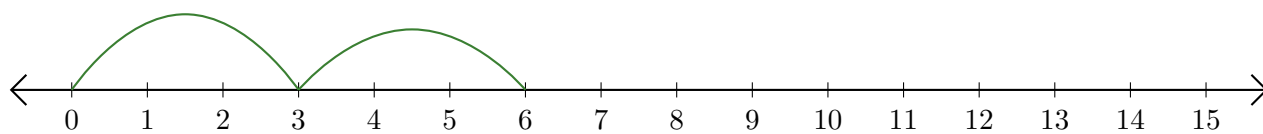
3.  $\underline{\quad} + \underline{\quad} = \underline{\quad}$



4.  $\underline{\quad} - \underline{\quad} = \underline{\quad}$



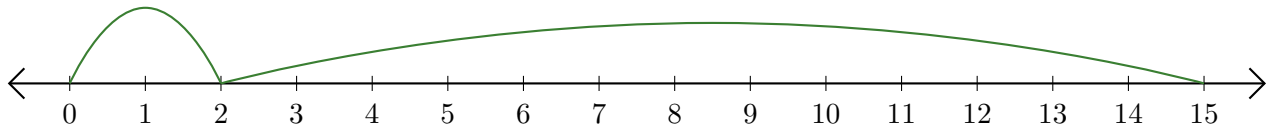
5.  $\underline{\quad} + \underline{\quad} = \underline{\quad}$



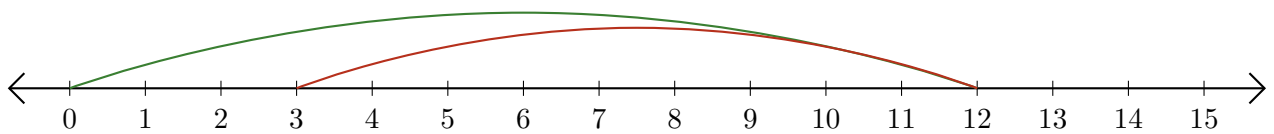
# Lecture de Nombres sur une Droite Graduée (G) Réponses

Déterminez la question que chaque droite graduée démontre.

1.  $\underline{2} + \underline{13} = \underline{15}$



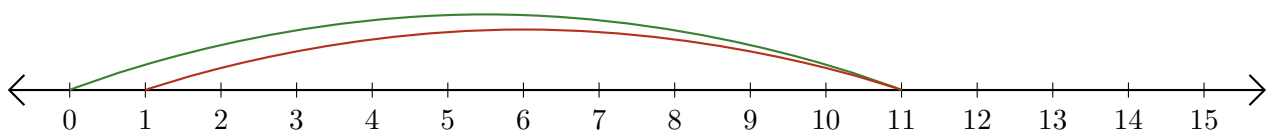
2.  $\underline{12} - \underline{9} = \underline{3}$



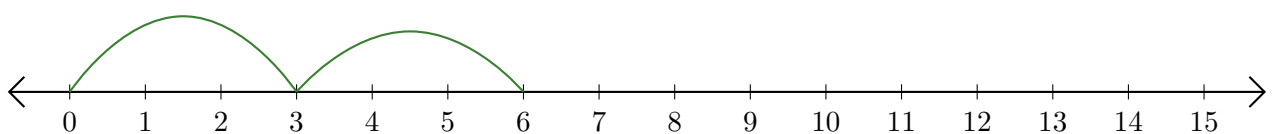
3.  $\underline{5} + \underline{1} = \underline{6}$



4.  $\underline{11} - \underline{10} = \underline{1}$



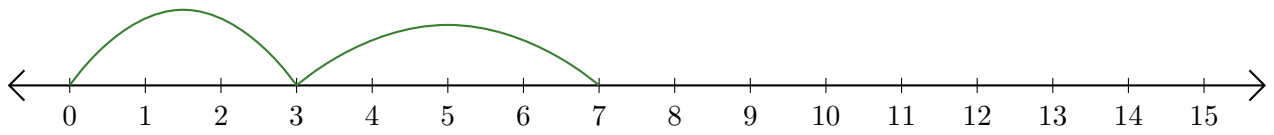
5.  $\underline{3} + \underline{3} = \underline{6}$



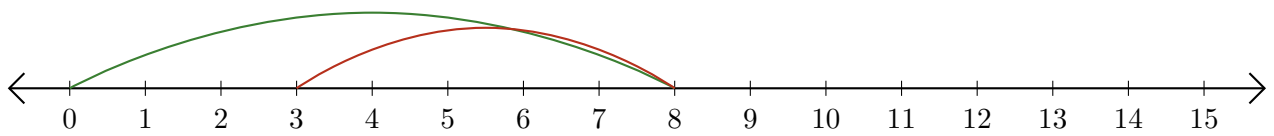
# Lecture de Nombres sur une Droite Graduée (H)

Déterminez la question que chaque droite graduée démontre.

1.  $\underline{\quad} + \underline{\quad} = \underline{\quad}$



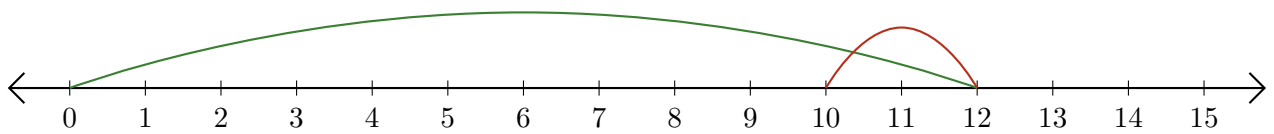
2.  $\underline{\quad} - \underline{\quad} = \underline{\quad}$



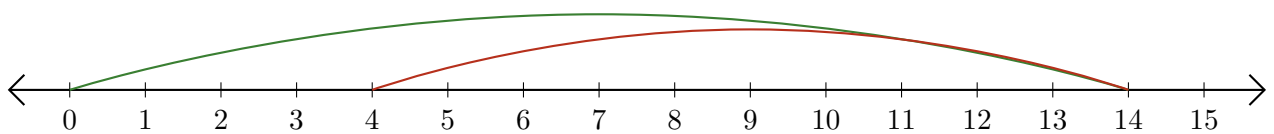
3.  $\underline{\quad} + \underline{\quad} = \underline{\quad}$



4.  $\underline{\quad} - \underline{\quad} = \underline{\quad}$



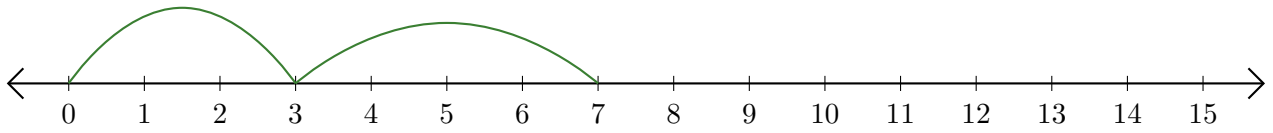
5.  $\underline{\quad} - \underline{\quad} = \underline{\quad}$



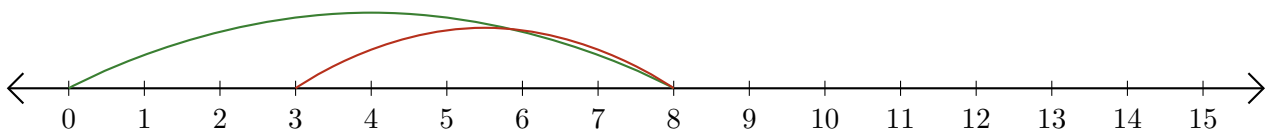
# Lecture de Nombres sur une Droite Graduée (H) Réponses

Déterminez la question que chaque droite graduée démontre.

1.  $\underline{3} + \underline{4} = \underline{7}$



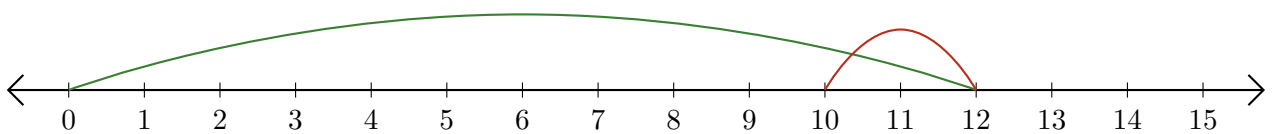
2.  $\underline{8} - \underline{5} = \underline{3}$



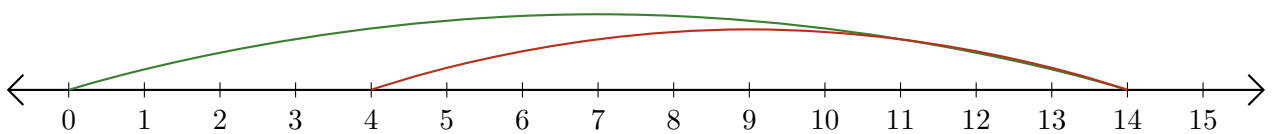
3.  $\underline{4} + \underline{2} = \underline{6}$



4.  $\underline{12} - \underline{2} = \underline{10}$



5.  $\underline{14} - \underline{10} = \underline{4}$

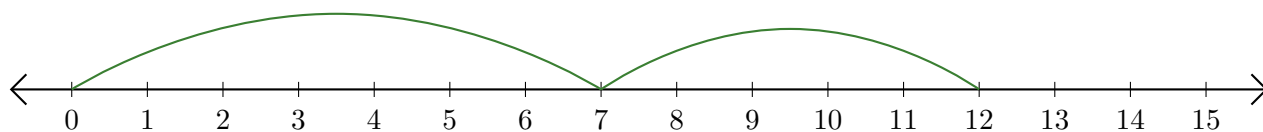




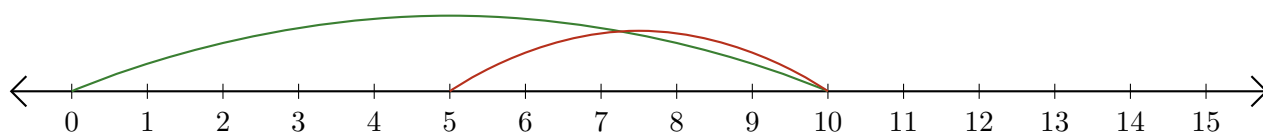
# Lecture de Nombres sur une Droite Graduée (I)

Déterminez la question que chaque droite graduée démontre.

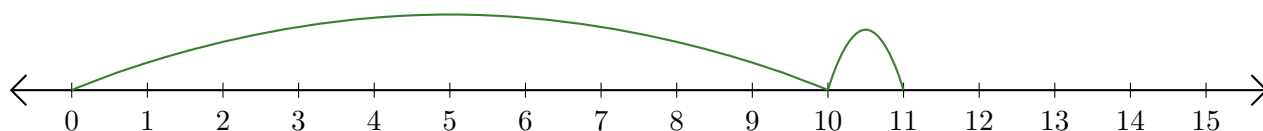
1.  $\underline{\quad} + \underline{\quad} = \underline{\quad}$



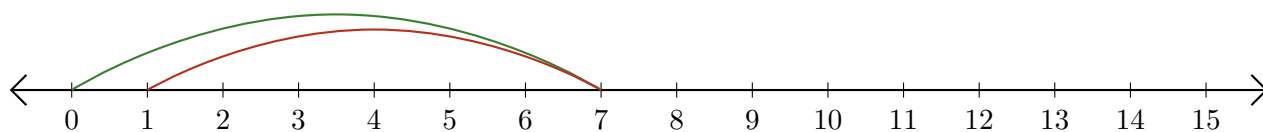
2.  $\underline{\quad} - \underline{\quad} = \underline{\quad}$



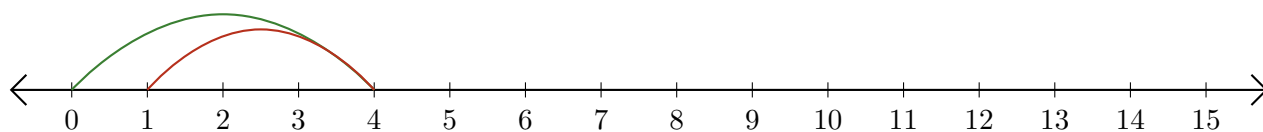
3.  $\underline{\quad} + \underline{\quad} = \underline{\quad}$



4.  $\underline{\quad} - \underline{\quad} = \underline{\quad}$



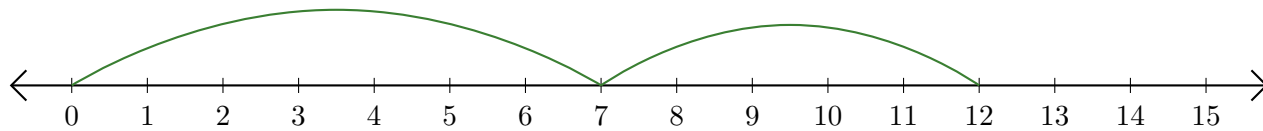
5.  $\underline{\quad} - \underline{\quad} = \underline{\quad}$



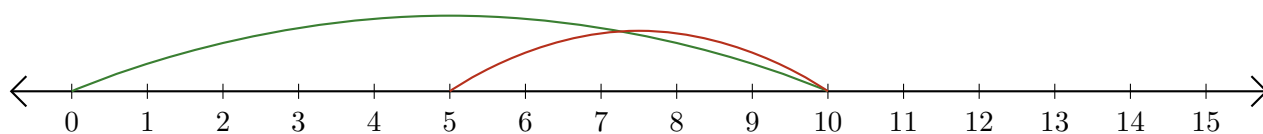
# Lecture de Nombres sur une Droite Graduée (I) Réponses

Déterminez la question que chaque droite graduée démontre.

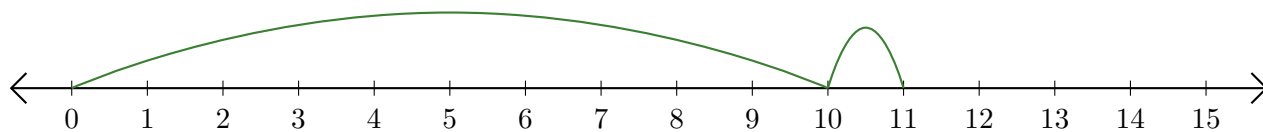
1.  $\underline{7} + \underline{5} = \underline{12}$



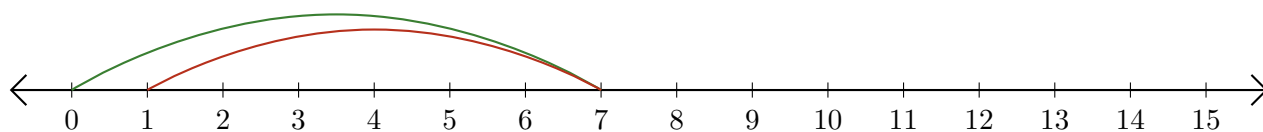
2.  $\underline{10} - \underline{5} = \underline{5}$



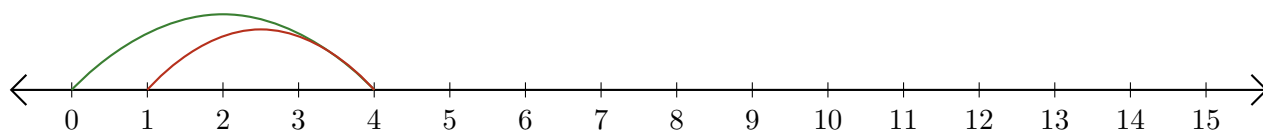
3.  $\underline{10} + \underline{1} = \underline{11}$



4.  $\underline{7} - \underline{6} = \underline{1}$



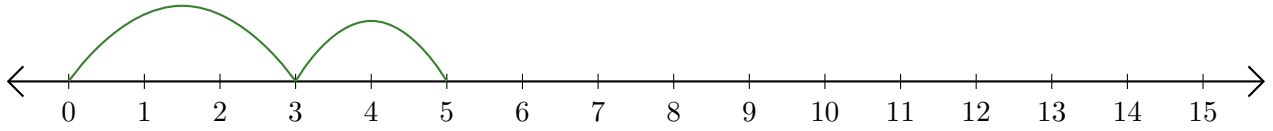
5.  $\underline{4} - \underline{3} = \underline{1}$



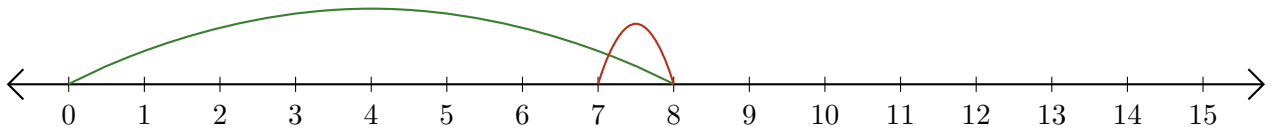
# Lecture de Nombres sur une Droite Graduée (J)

Déterminez la question que chaque droite graduée démontre.

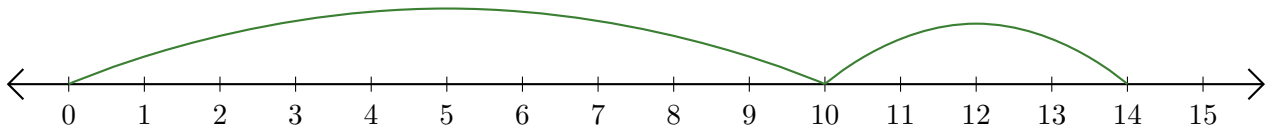
1.  $\underline{\quad} + \underline{\quad} = \underline{\quad}$



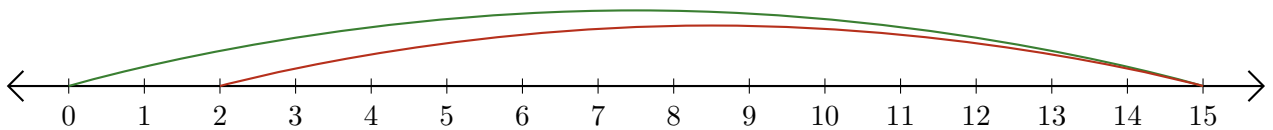
2.  $\underline{\quad} - \underline{\quad} = \underline{\quad}$



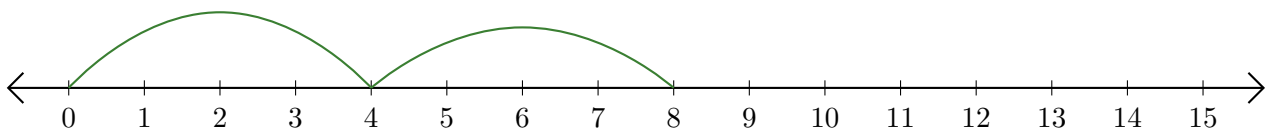
3.  $\underline{\quad} + \underline{\quad} = \underline{\quad}$



4.  $\underline{\quad} - \underline{\quad} = \underline{\quad}$



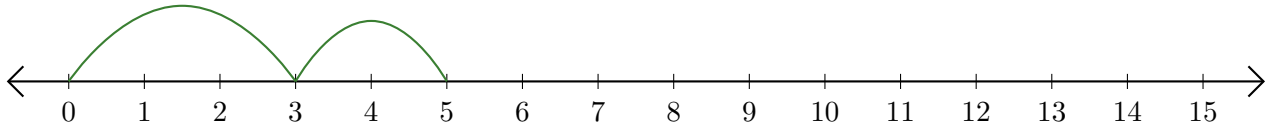
5.  $\underline{\quad} + \underline{\quad} = \underline{\quad}$



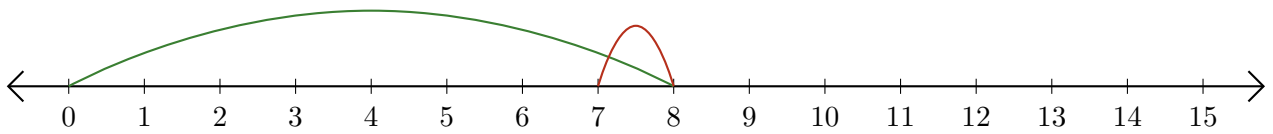
# Lecture de Nombres sur une Droite Graduée (J) Réponses

Déterminez la question que chaque droite graduée démontre.

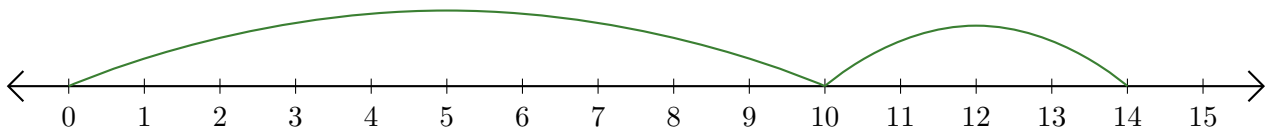
1.  $\underline{3} + \underline{2} = \underline{5}$



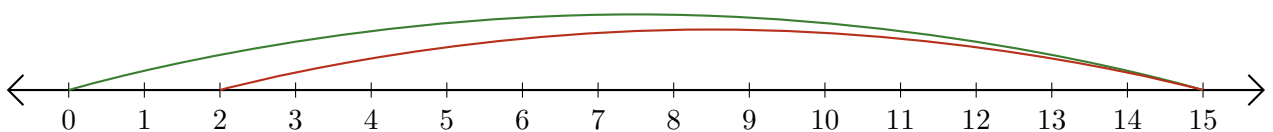
2.  $\underline{8} - \underline{1} = \underline{7}$



3.  $\underline{10} + \underline{4} = \underline{14}$



4.  $\underline{15} - \underline{13} = \underline{2}$



5.  $\underline{4} + \underline{4} = \underline{8}$

