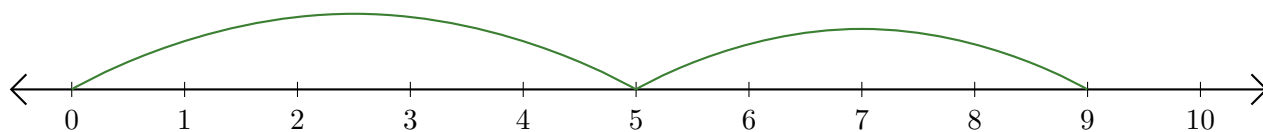


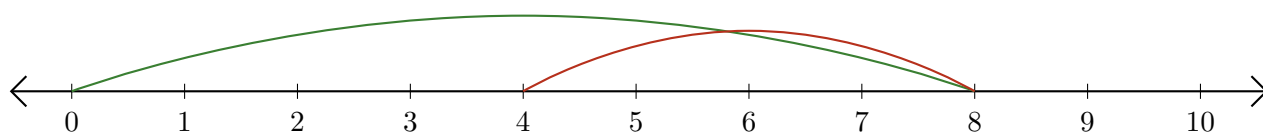
# Lecture de Nombres sur une Droite Graduée (J)

Déterminez la question que chaque droite graduée démontre.

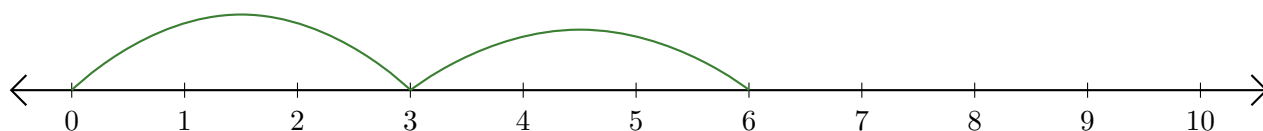
1.  $\underline{\quad} + \underline{\quad} = \underline{\quad}$



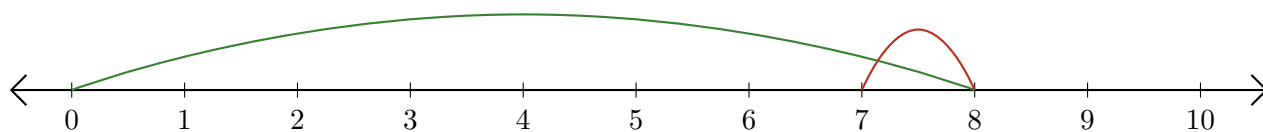
2.  $\underline{\quad} - \underline{\quad} = \underline{\quad}$



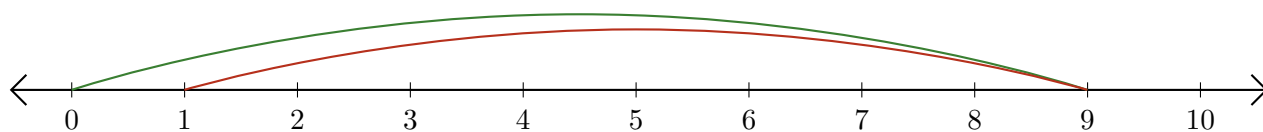
3.  $\underline{\quad} + \underline{\quad} = \underline{\quad}$



4.  $\underline{\quad} - \underline{\quad} = \underline{\quad}$



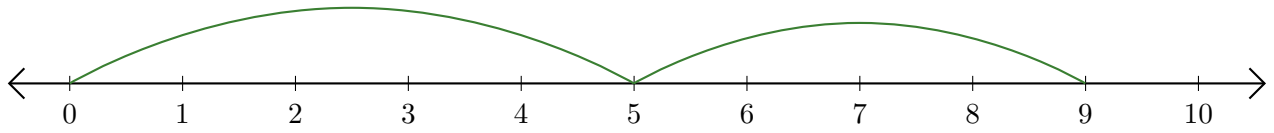
5.  $\underline{\quad} - \underline{\quad} = \underline{\quad}$



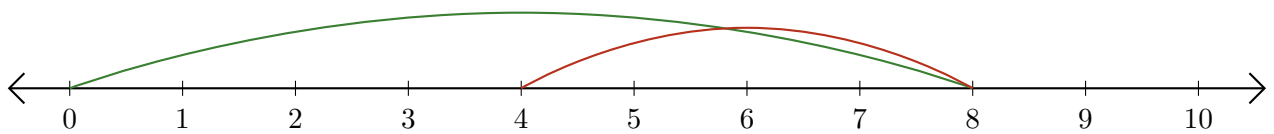
# Lecture de Nombres sur une Droite Graduée (J) Réponses

Déterminez la question que chaque droite graduée démontre.

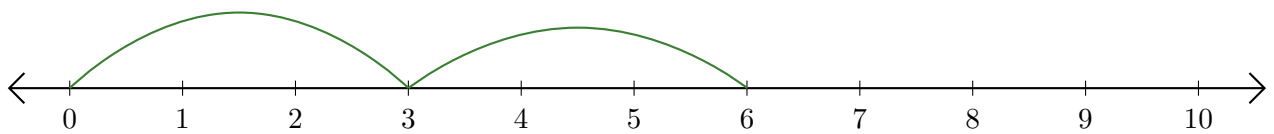
1.  $\underline{5} + \underline{4} = \underline{9}$



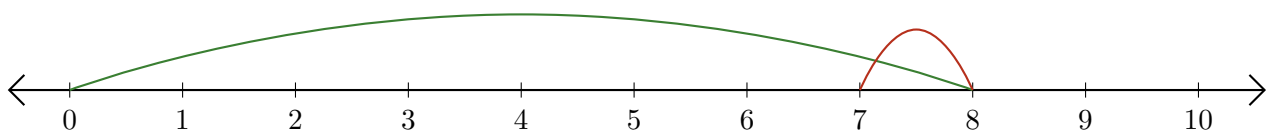
2.  $\underline{8} - \underline{4} = \underline{4}$



3.  $\underline{3} + \underline{3} = \underline{6}$



4.  $\underline{8} - \underline{1} = \underline{7}$



5.  $\underline{9} - \underline{8} = \underline{1}$

