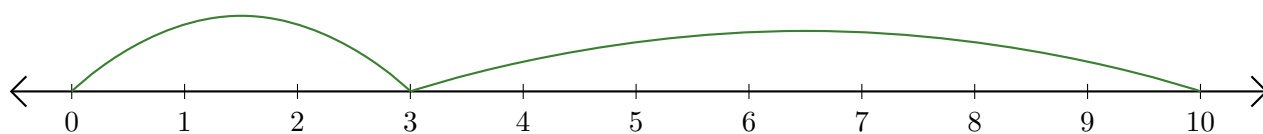


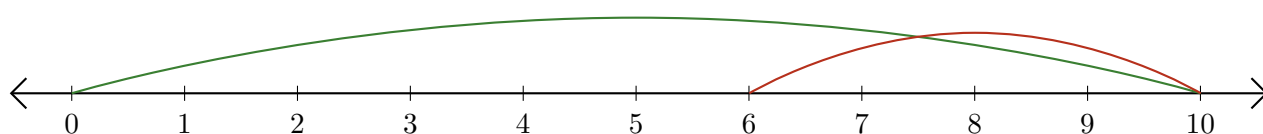
Lecture de Nombres sur une Droite Graduée (H)

Déterminez la question que chaque droite graduée démontre.

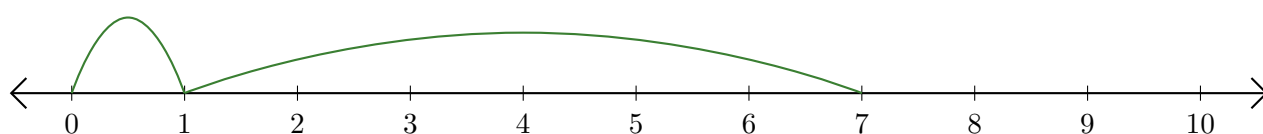
1. $\underline{\quad} + \underline{\quad} = \underline{\quad}$



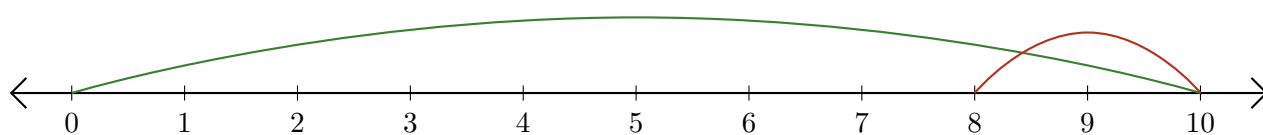
2. $\underline{\quad} - \underline{\quad} = \underline{\quad}$



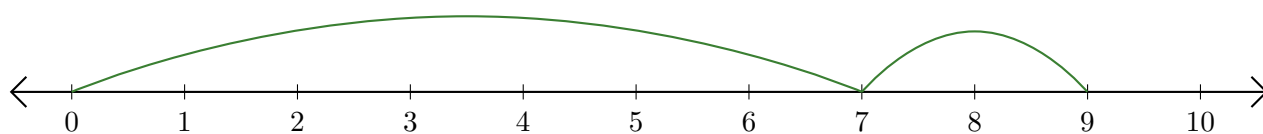
3. $\underline{\quad} + \underline{\quad} = \underline{\quad}$



4. $\underline{\quad} - \underline{\quad} = \underline{\quad}$



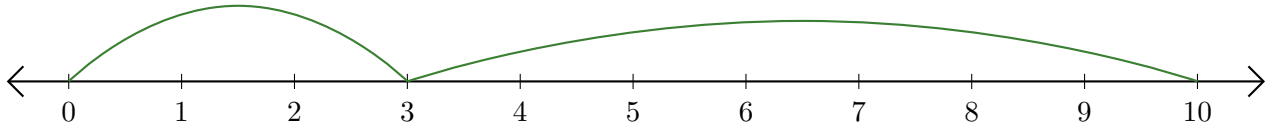
5. $\underline{\quad} + \underline{\quad} = \underline{\quad}$



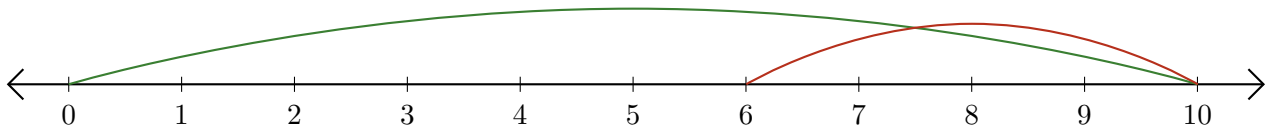
Lecture de Nombres sur une Droite Graduée (H) Réponses

Déterminez la question que chaque droite graduée démontre.

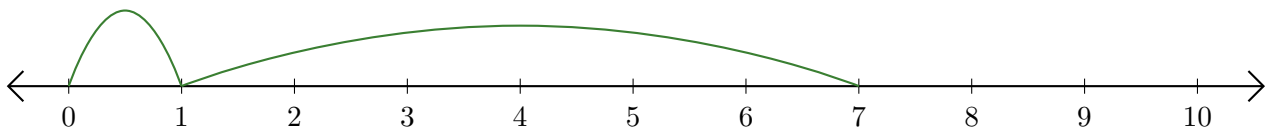
1. $\underline{3} + \underline{7} = \underline{10}$



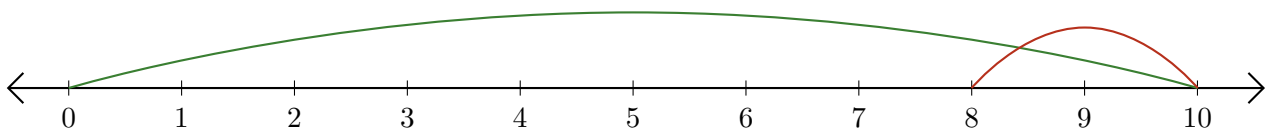
2. $\underline{10} - \underline{4} = \underline{6}$



3. $\underline{1} + \underline{6} = \underline{7}$



4. $\underline{10} - \underline{2} = \underline{8}$



5. $\underline{7} + \underline{2} = \underline{9}$

