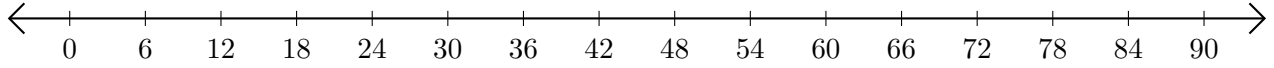


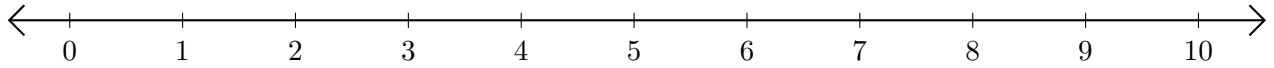
Addition de Nombres sur une Droite Graduée (E)

Utilisez la droite graduée pour calculer chaque somme.

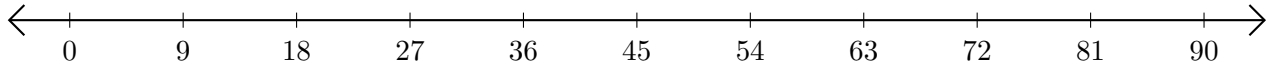
1. $42 + 42 = \underline{\quad}$



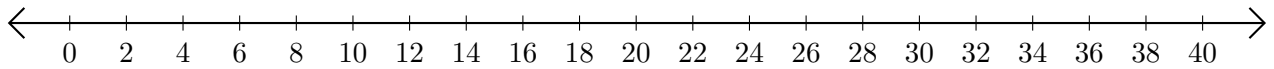
2. $4 + 6 = \underline{\quad}$



3. $81 + 9 = \underline{\quad}$



4. $8 + 2 = \underline{\quad}$



5. $26 + 12 = \underline{\quad}$

