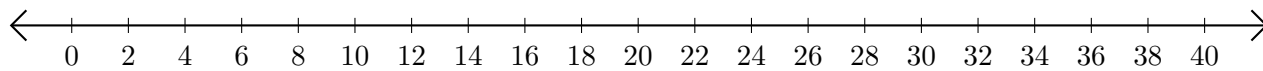


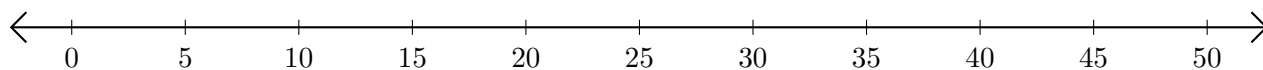
Addition de Nombres sur une Droite Graduée (C)

Utilisez la droite graduée pour calculer chaque somme.

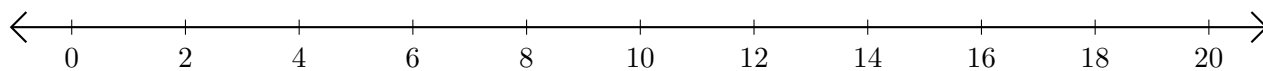
1. $2 + 30 = \underline{\hspace{2cm}}$



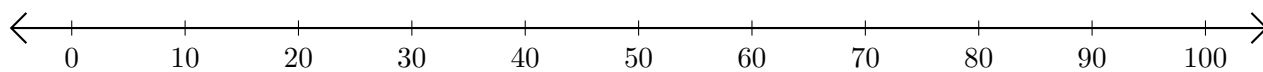
2. $20 + 20 = \underline{\hspace{2cm}}$



3. $12 + 8 = \underline{\hspace{2cm}}$



4. $90 + 10 = \underline{\hspace{2cm}}$



5. $12 + 14 = \underline{\hspace{2cm}}$

