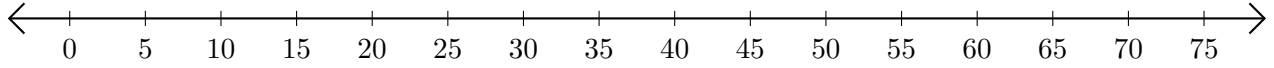


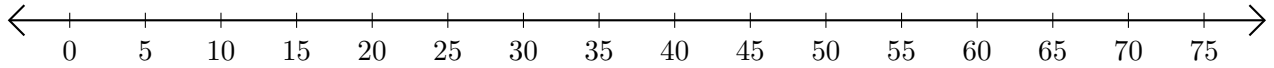
# Addition de Nombres sur une Droite Graduée (I)

Utilisez la droite graduée pour calculer chaque somme.

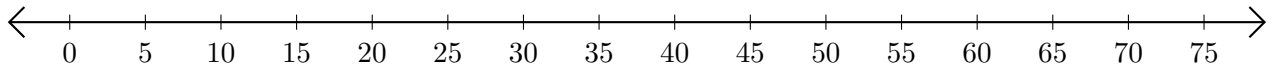
1.  $5 + 45 = \underline{\quad}$



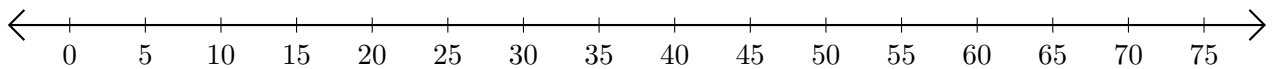
2.  $30 + 20 = \underline{\quad}$



3.  $40 + 5 = \underline{\quad}$



4.  $60 + 10 = \underline{\quad}$



5.  $20 + 30 = \underline{\quad}$

