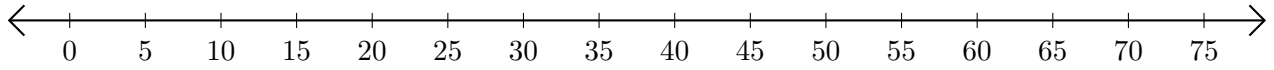


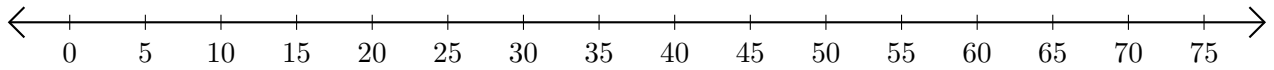
Addition de Nombres sur une Droite Graduée (H)

Utilisez la droite graduée pour calculer chaque somme.

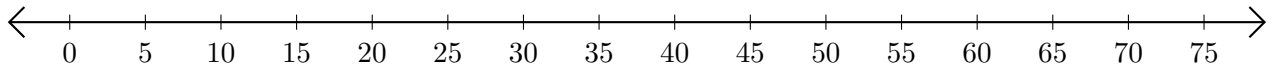
1. $15 + 20 = \underline{\quad}$



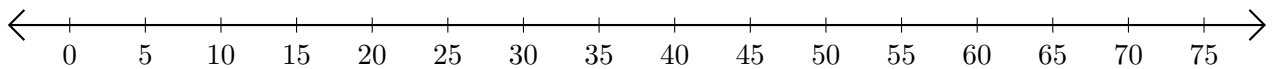
2. $30 + 35 = \underline{\quad}$



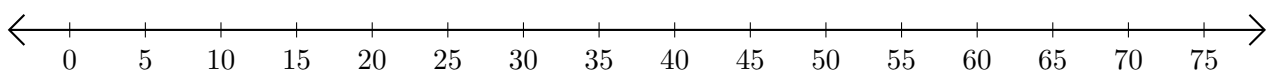
3. $20 + 50 = \underline{\quad}$



4. $60 + 10 = \underline{\quad}$



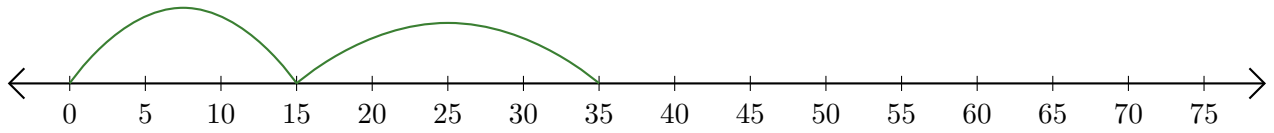
5. $40 + 30 = \underline{\quad}$



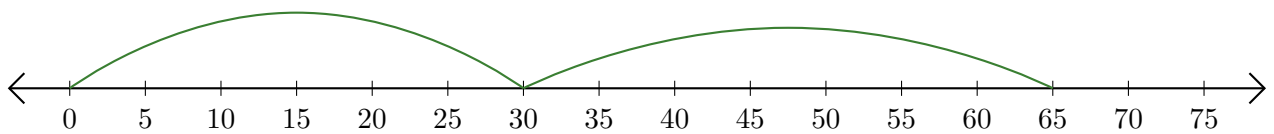
Addition de Nombres sur une Droite Graduée (H) Réponses

Utilisez la droite graduée pour calculer chaque somme.

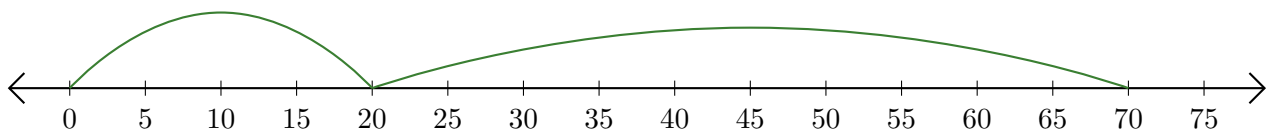
1. $15 + 20 = \underline{35}$



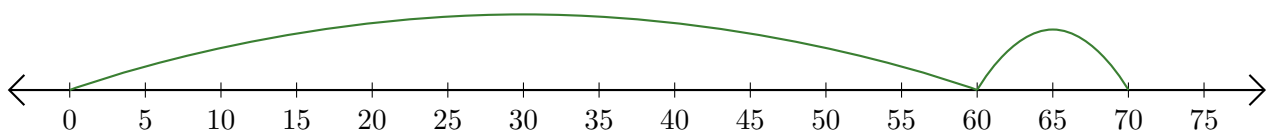
2. $30 + 35 = \underline{65}$



3. $20 + 50 = \underline{70}$



4. $60 + 10 = \underline{70}$



5. $40 + 30 = \underline{70}$

