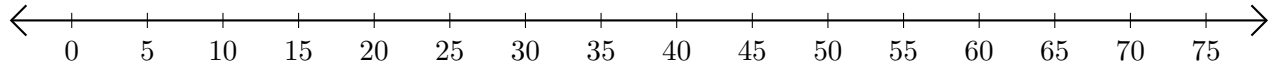


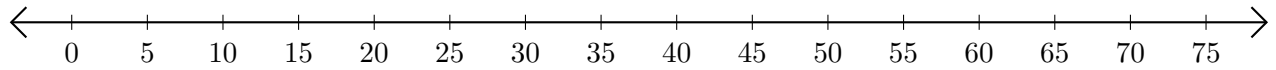
# Addition de Nombres sur une Droite Graduée (F)

Utilisez la droite graduée pour calculer chaque somme.

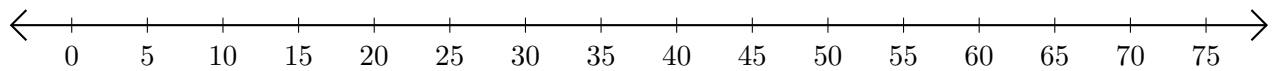
1.  $10 + 5 = \underline{\quad}$



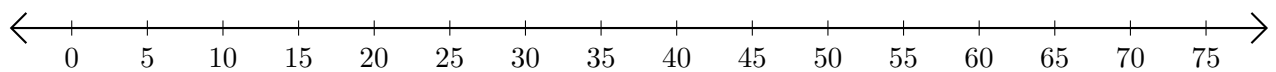
2.  $45 + 30 = \underline{\quad}$



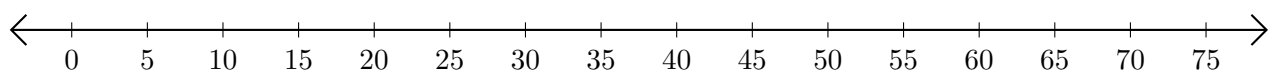
3.  $15 + 45 = \underline{\quad}$



4.  $5 + 40 = \underline{\quad}$



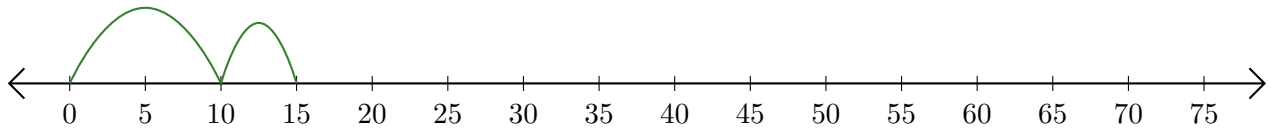
5.  $70 + 5 = \underline{\quad}$



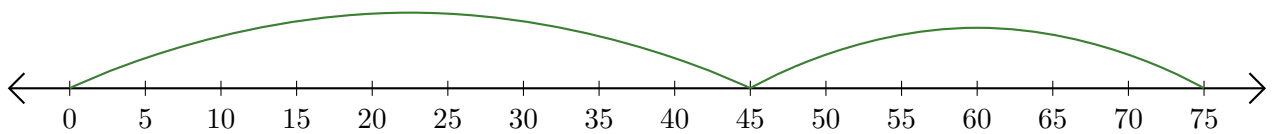
# Addition de Nombres sur une Droite Graduée (F) Réponses

Utilisez la droite graduée pour calculer chaque somme.

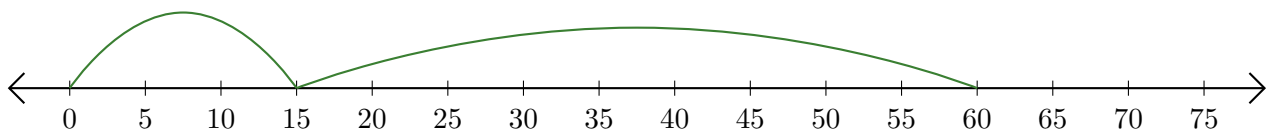
1.  $10 + 5 = \underline{15}$



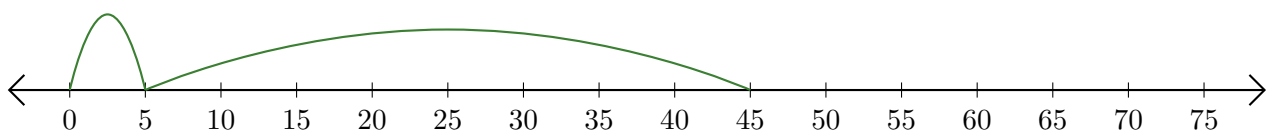
2.  $45 + 30 = \underline{75}$



3.  $15 + 45 = \underline{60}$



4.  $5 + 40 = \underline{45}$



5.  $70 + 5 = \underline{75}$

