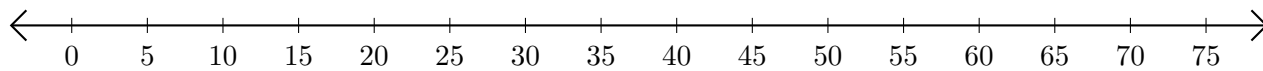


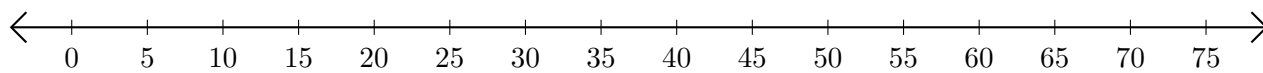
Addition de Nombres sur une Droite Graduée (D)

Utilisez la droite graduée pour calculer chaque somme.

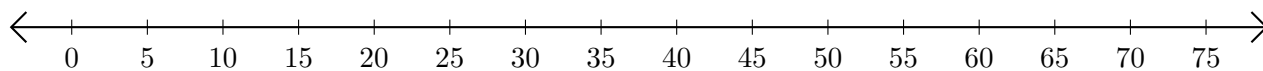
1. $10 + 60 = \underline{\quad}$



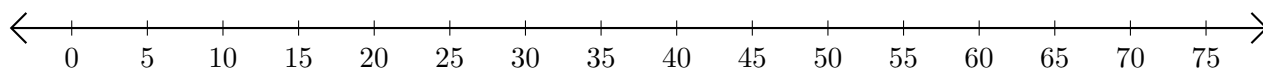
2. $55 + 15 = \underline{\quad}$



3. $60 + 10 = \underline{\quad}$



4. $30 + 10 = \underline{\quad}$



5. $15 + 10 = \underline{\quad}$

