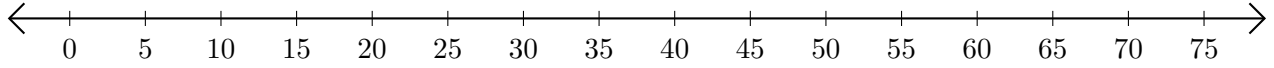


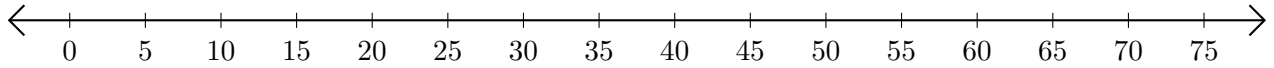
Addition de Nombres sur une Droite Graduée (C)

Utilisez la droite graduée pour calculer chaque somme.

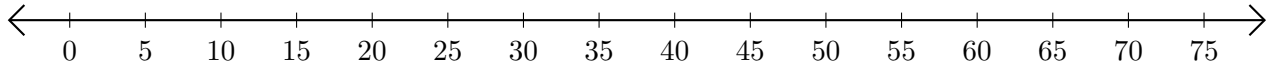
1. $10 + 45 = \underline{\quad}$



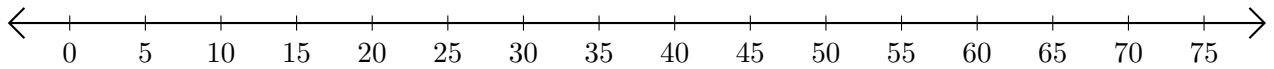
2. $35 + 5 = \underline{\quad}$



3. $60 + 15 = \underline{\quad}$



4. $20 + 20 = \underline{\quad}$



5. $5 + 60 = \underline{\quad}$

