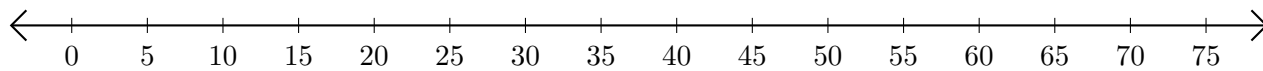


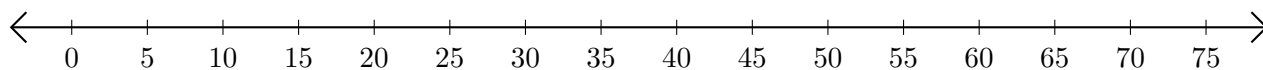
Addition de Nombres sur une Droite Graduée (B)

Utilisez la droite graduée pour calculer chaque somme.

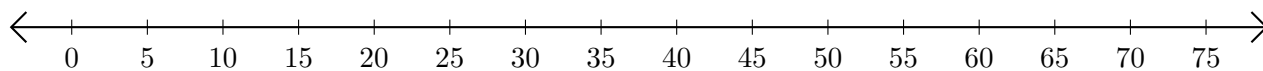
1. $50 + 5 = \underline{\quad}$



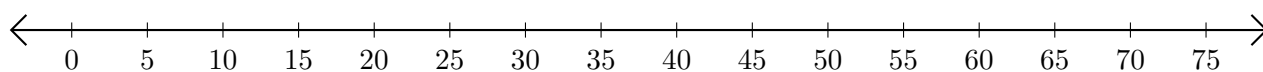
2. $65 + 5 = \underline{\quad}$



3. $20 + 40 = \underline{\quad}$



4. $45 + 25 = \underline{\quad}$



5. $5 + 50 = \underline{\quad}$

