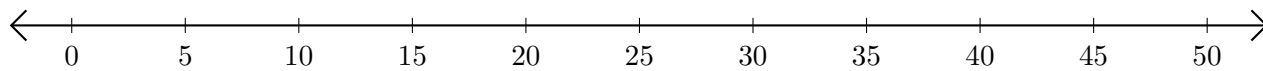


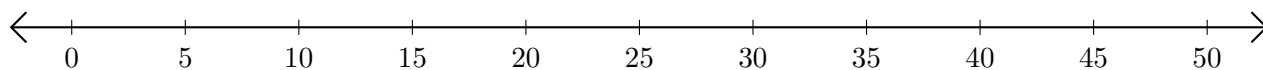
Addition de Nombres sur une Droite Graduée (J)

Utilisez la droite graduée pour calculer chaque somme.

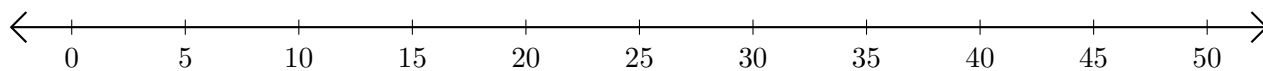
1. $30 + 10 = \underline{\quad}$



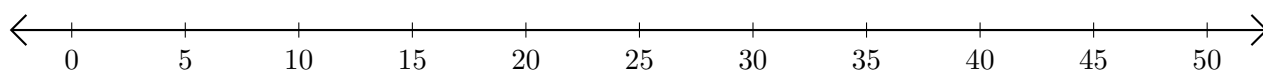
2. $40 + 10 = \underline{\quad}$



3. $5 + 35 = \underline{\quad}$



4. $25 + 10 = \underline{\quad}$



5. $45 + 5 = \underline{\quad}$

