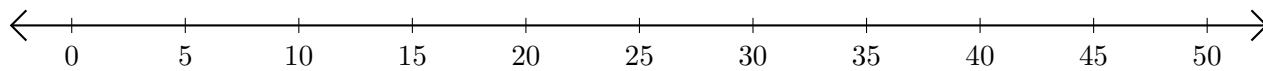


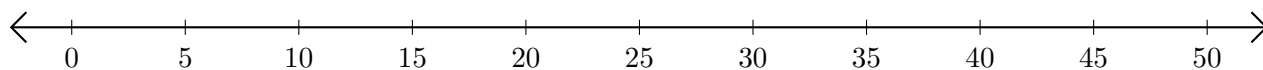
Addition de Nombres sur une Droite Graduée (J)

Utilisez la droite graduée pour calculer chaque somme.

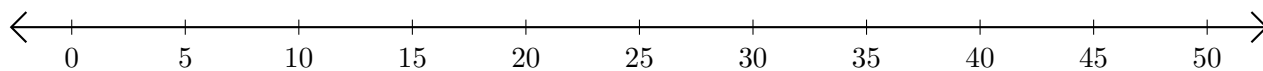
1. $30 + 10 = \underline{\quad}$



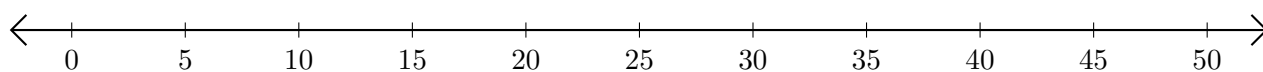
2. $40 + 10 = \underline{\quad}$



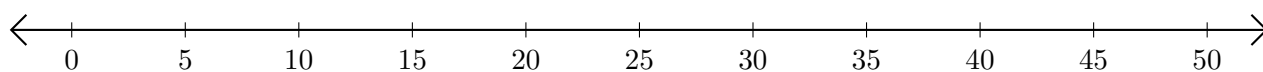
3. $5 + 35 = \underline{\quad}$



4. $25 + 10 = \underline{\quad}$



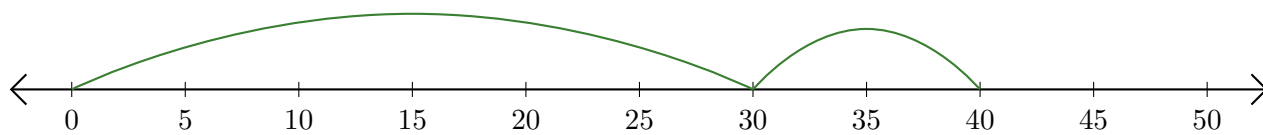
5. $45 + 5 = \underline{\quad}$



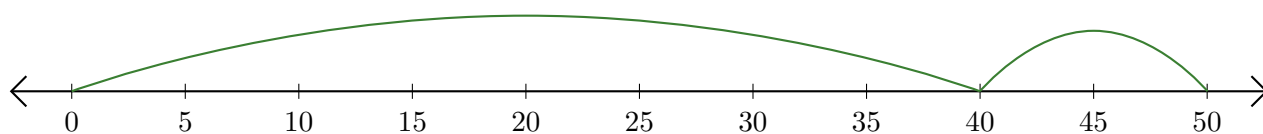
Addition de Nombres sur une Droite Graduée (J) Réponses

Utilisez la droite graduée pour calculer chaque somme.

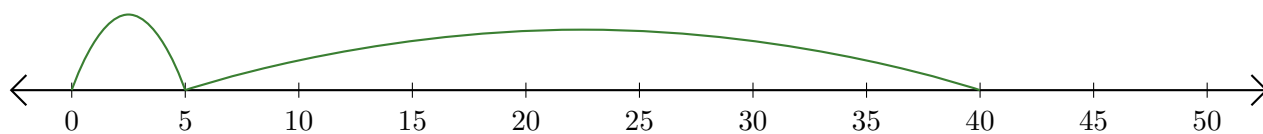
1. $30 + 10 = \underline{40}$



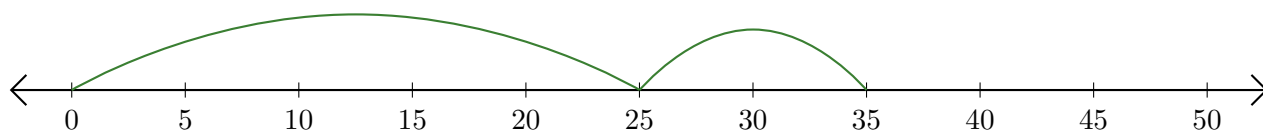
2. $40 + 10 = \underline{50}$



3. $5 + 35 = \underline{40}$



4. $25 + 10 = \underline{35}$



5. $45 + 5 = \underline{50}$

