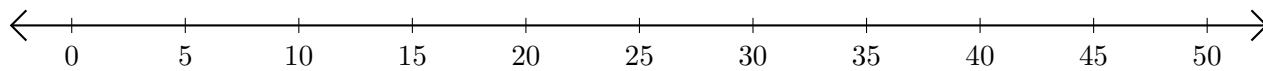


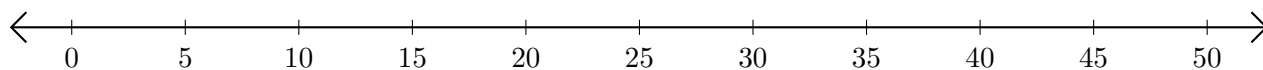
Addition de Nombres sur une Droite Graduée (E)

Utilisez la droite graduée pour calculer chaque somme.

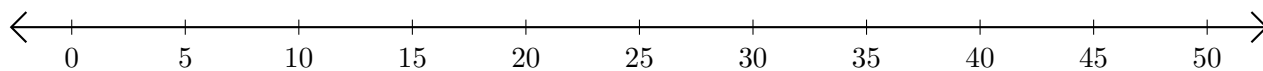
1. $15 + 15 = \underline{\quad}$



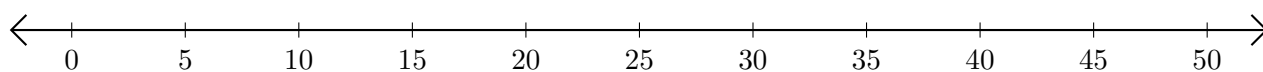
2. $5 + 45 = \underline{\quad}$



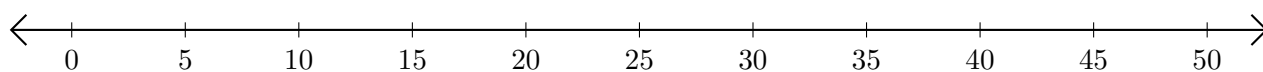
3. $35 + 5 = \underline{\quad}$



4. $25 + 25 = \underline{\quad}$



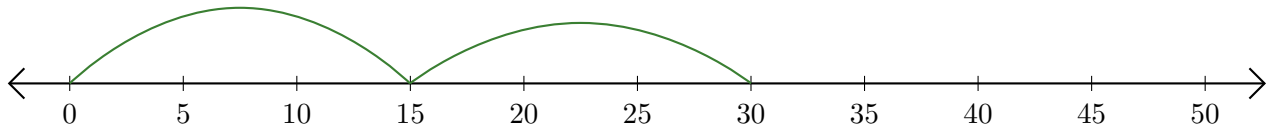
5. $45 + 5 = \underline{\quad}$



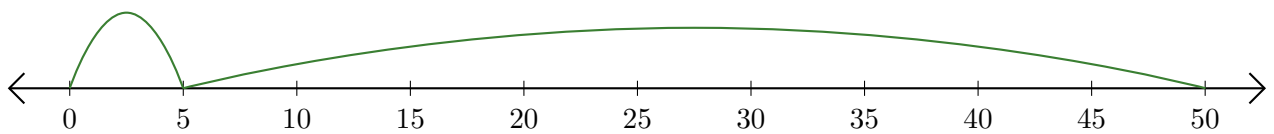
Addition de Nombres sur une Droite Graduée (E) Réponses

Utilisez la droite graduée pour calculer chaque somme.

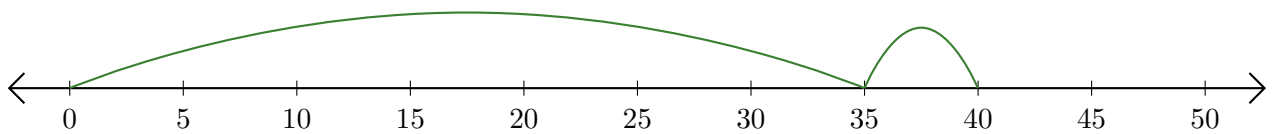
1. $15 + 15 = \underline{30}$



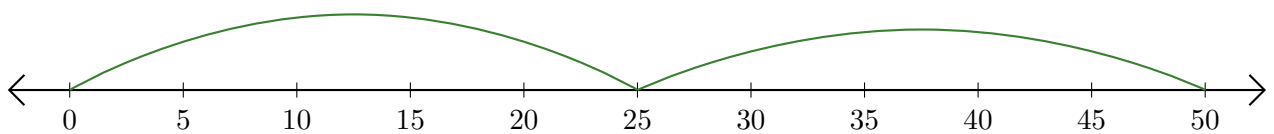
2. $5 + 45 = \underline{50}$



3. $35 + 5 = \underline{40}$



4. $25 + 25 = \underline{50}$



5. $45 + 5 = \underline{50}$

