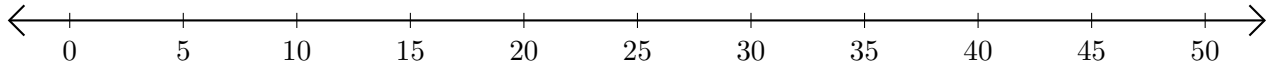


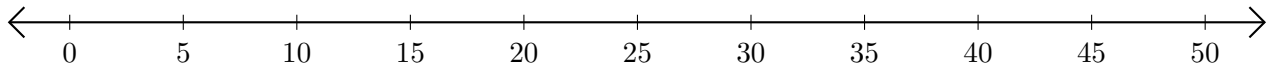
Addition de Nombres sur une Droite Graduée (C)

Utilisez la droite graduée pour calculer chaque somme.

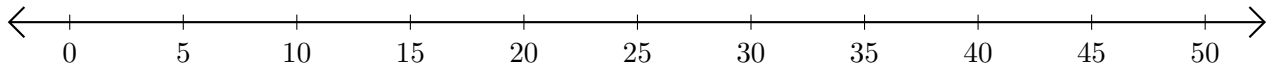
1. $30 + 5 = \underline{\quad}$



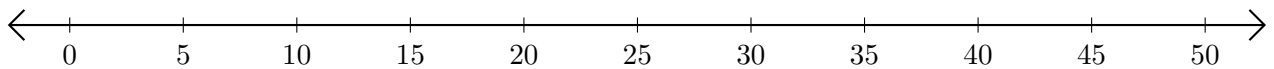
2. $35 + 5 = \underline{\quad}$



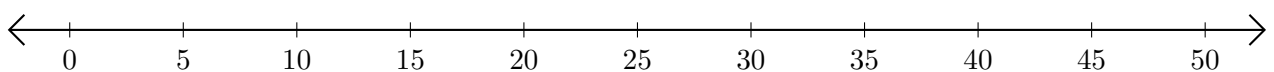
3. $10 + 10 = \underline{\quad}$



4. $15 + 15 = \underline{\quad}$



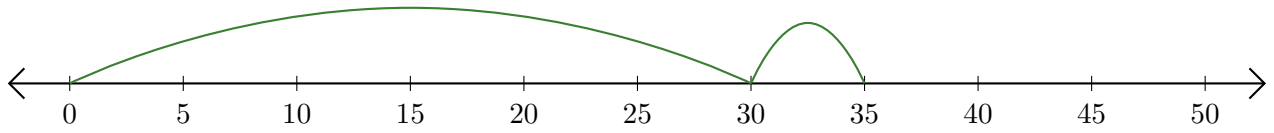
5. $5 + 45 = \underline{\quad}$



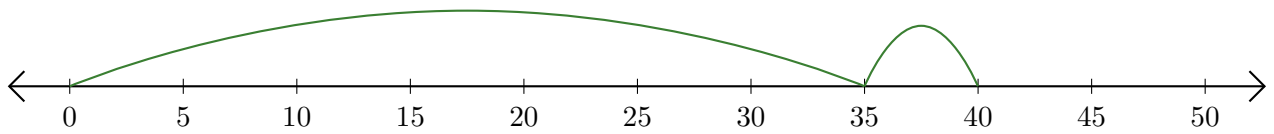
Addition de Nombres sur une Droite Graduée (C) Réponses

Utilisez la droite graduée pour calculer chaque somme.

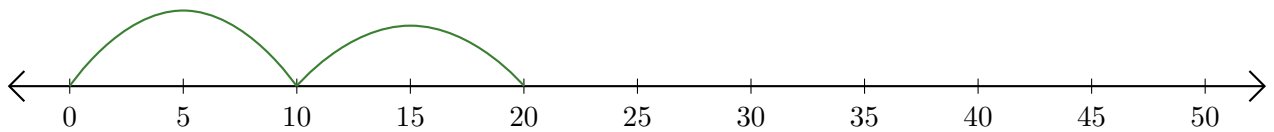
1. $30 + 5 = \underline{35}$



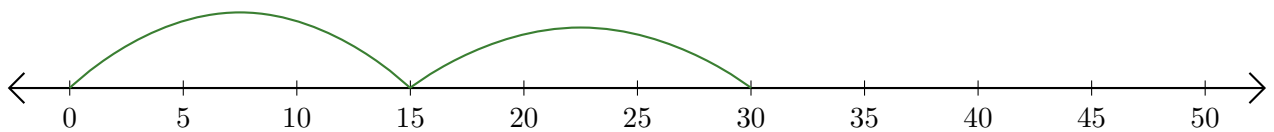
2. $35 + 5 = \underline{40}$



3. $10 + 10 = \underline{20}$



4. $15 + 15 = \underline{30}$



5. $5 + 45 = \underline{50}$

