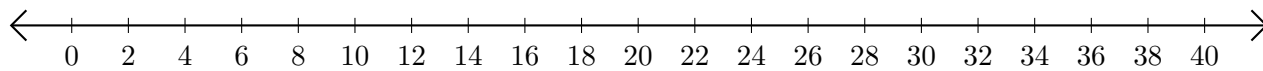


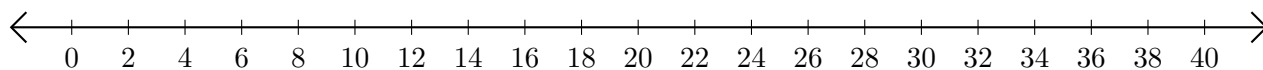
Addition de Nombres sur une Droite Graduée (F)

Utilisez la droite graduée pour calculer chaque somme.

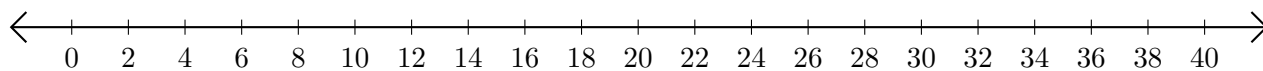
1. $6 + 34 = \underline{\quad}$



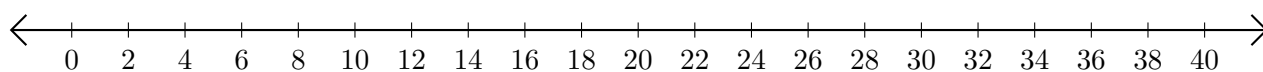
2. $10 + 10 = \underline{\quad}$



3. $2 + 28 = \underline{\quad}$



4. $24 + 4 = \underline{\quad}$



5. $26 + 14 = \underline{\quad}$

