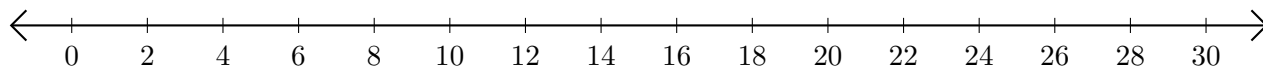


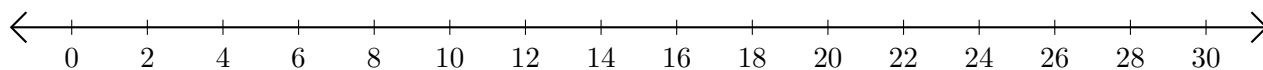
# Addition de Nombres sur une Droite Graduée (H)

Utilisez la droite graduée pour calculer chaque somme.

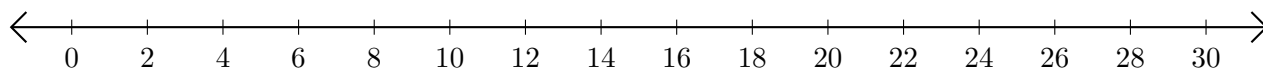
1.  $4 + 4 = \underline{\quad}$



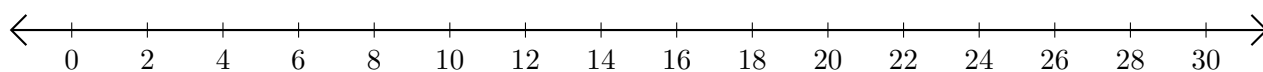
2.  $12 + 8 = \underline{\quad}$



3.  $20 + 8 = \underline{\quad}$



4.  $24 + 6 = \underline{\quad}$



5.  $16 + 10 = \underline{\quad}$

