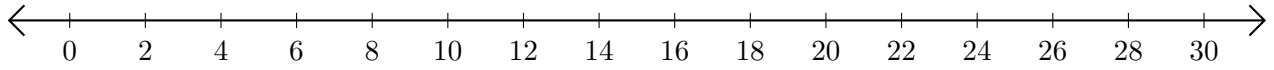


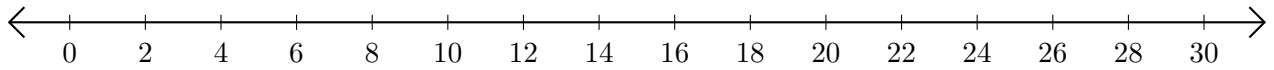
Addition de Nombres sur une Droite Graduée (G)

Utilisez la droite graduée pour calculer chaque somme.

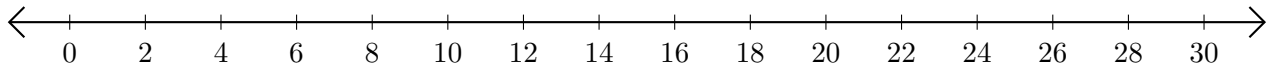
1. $18 + 10 = \underline{\quad}$



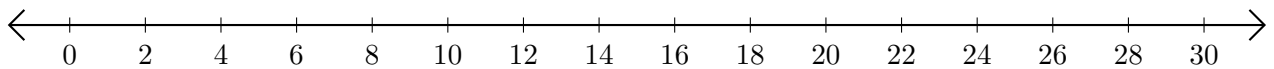
2. $14 + 12 = \underline{\quad}$



3. $22 + 6 = \underline{\quad}$



4. $12 + 8 = \underline{\quad}$



5. $16 + 2 = \underline{\quad}$

