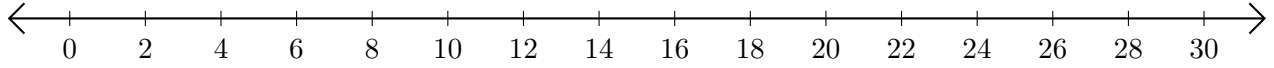


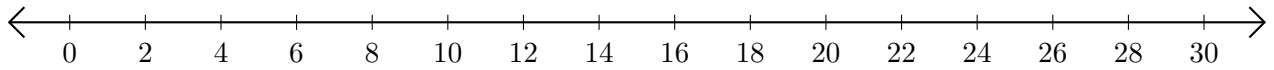
Addition de Nombres sur une Droite Graduée (C)

Utilisez la droite graduée pour calculer chaque somme.

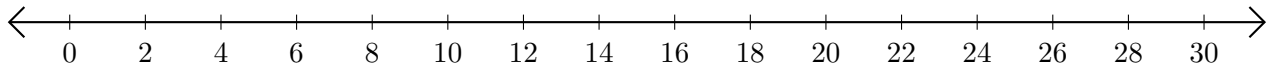
1. $20 + 6 = \underline{\quad}$



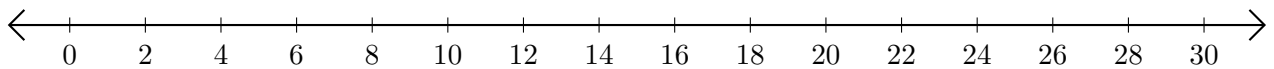
2. $24 + 4 = \underline{\quad}$



3. $2 + 14 = \underline{\quad}$



4. $26 + 2 = \underline{\quad}$



5. $12 + 12 = \underline{\quad}$

