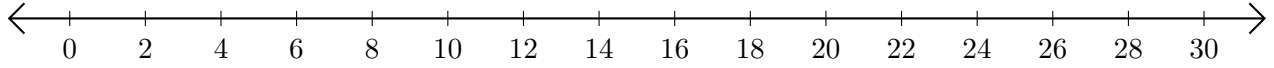


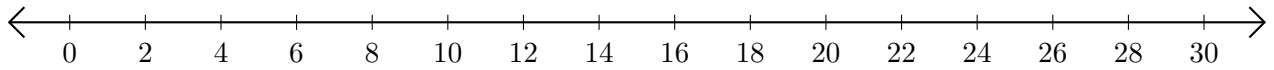
# Addition de Nombres sur une Droite Graduée (C)

Utilisez la droite graduée pour calculer chaque somme.

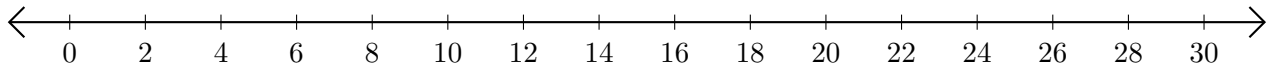
1.  $20 + 6 = \underline{\quad}$



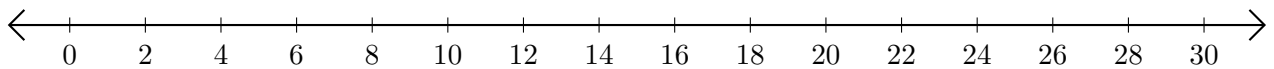
2.  $24 + 4 = \underline{\quad}$



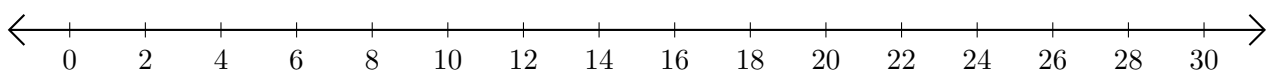
3.  $2 + 14 = \underline{\quad}$



4.  $26 + 2 = \underline{\quad}$



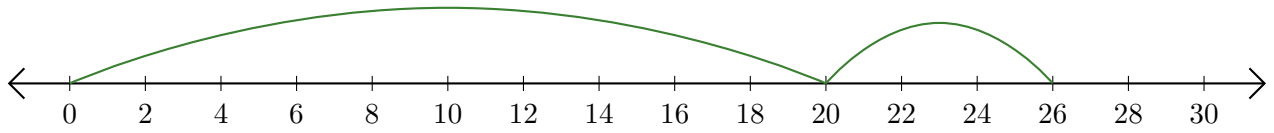
5.  $12 + 12 = \underline{\quad}$



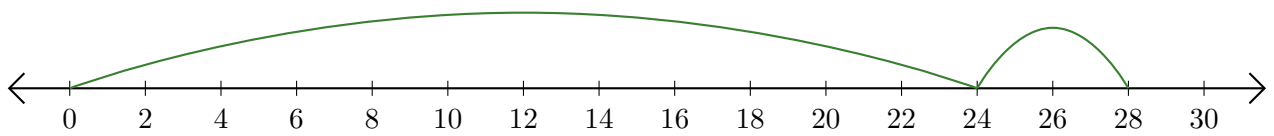
# Addition de Nombres sur une Droite Graduée (C) Réponses

Utilisez la droite graduée pour calculer chaque somme.

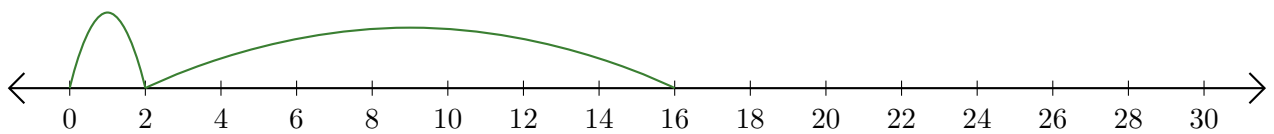
1.  $20 + 6 = \underline{26}$



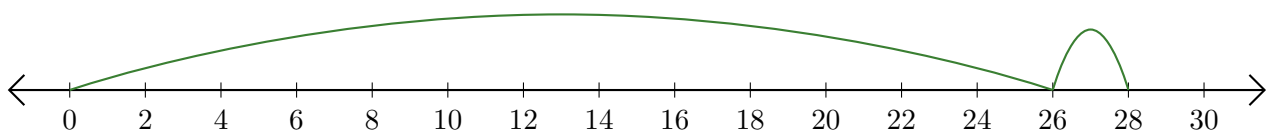
2.  $24 + 4 = \underline{28}$



3.  $2 + 14 = \underline{16}$



4.  $26 + 2 = \underline{28}$



5.  $12 + 12 = \underline{24}$

