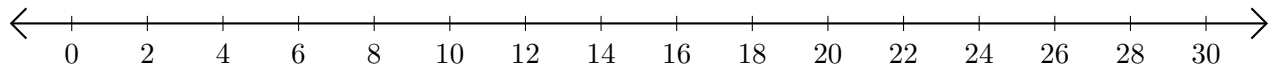


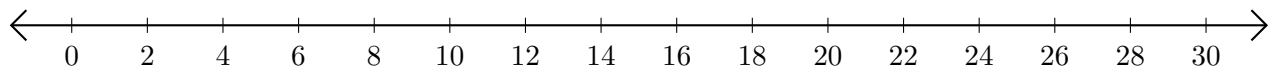
Addition de Nombres sur une Droite Graduée (A)

Utilisez la droite graduée pour calculer chaque somme.

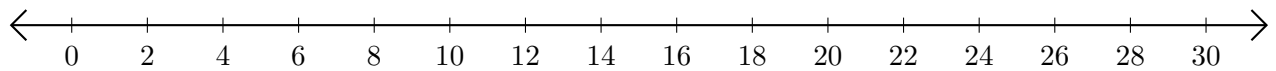
1. $20 + 2 = \underline{\quad}$



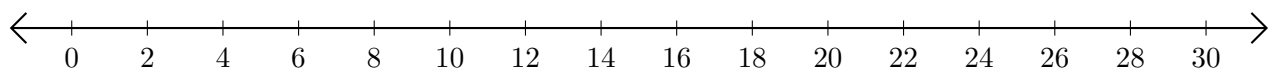
2. $18 + 12 = \underline{\quad}$



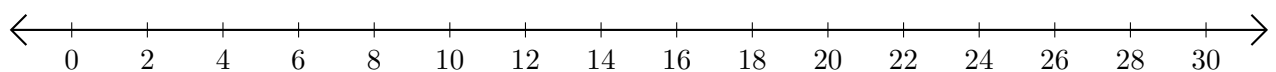
3. $24 + 2 = \underline{\quad}$



4. $28 + 2 = \underline{\quad}$



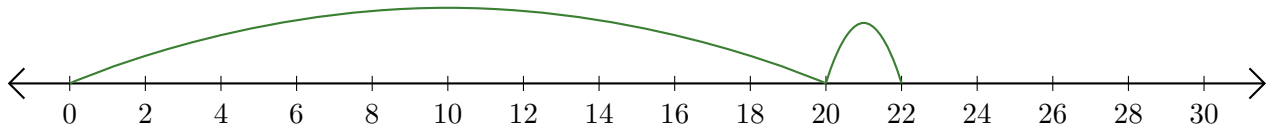
5. $12 + 10 = \underline{\quad}$



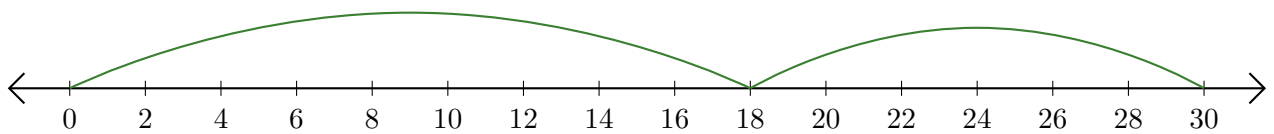
Addition de Nombres sur une Droite Graduée (A) Réponses

Utilisez la droite graduée pour calculer chaque somme.

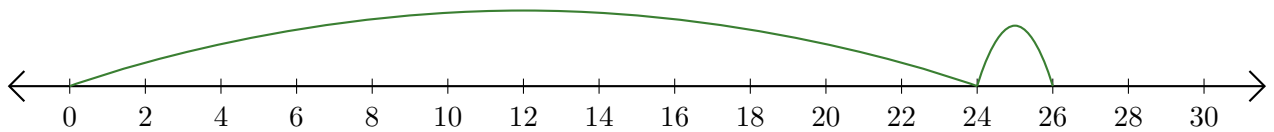
1. $20 + 2 = \underline{22}$



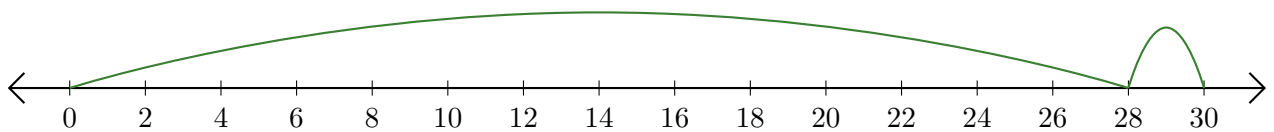
2. $18 + 12 = \underline{30}$



3. $24 + 2 = \underline{26}$



4. $28 + 2 = \underline{30}$



5. $12 + 10 = \underline{22}$

