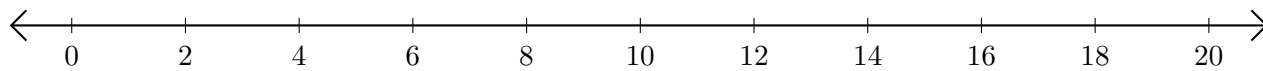


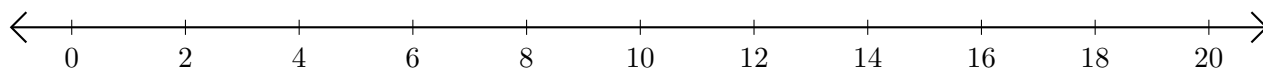
Addition de Nombres sur une Droite Graduée (J)

Utilisez la droite graduée pour calculer chaque somme.

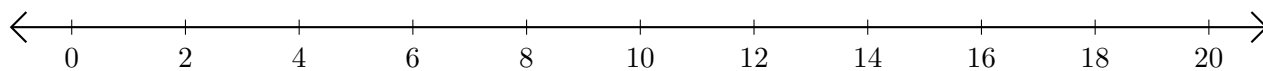
1. $4 + 14 = \underline{\quad}$



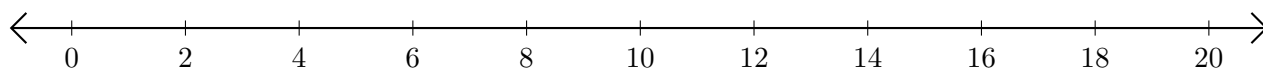
2. $10 + 4 = \underline{\quad}$



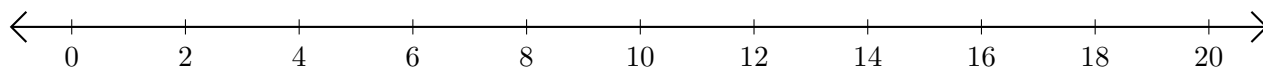
3. $14 + 6 = \underline{\quad}$



4. $2 + 8 = \underline{\quad}$



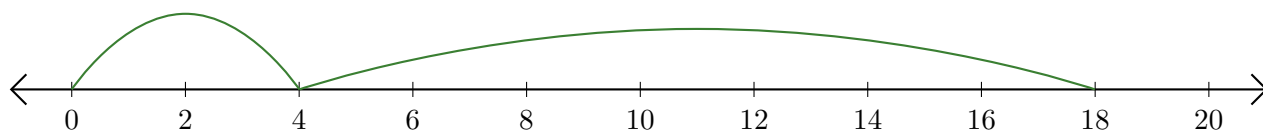
5. $18 + 2 = \underline{\quad}$



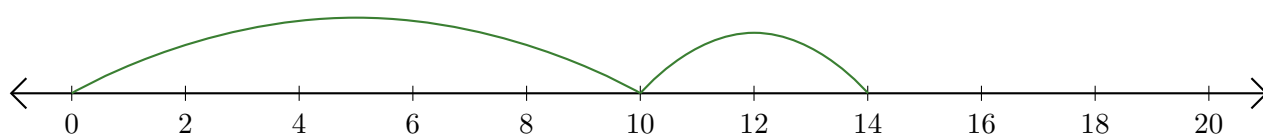
Addition de Nombres sur une Droite Graduée (J) Réponses

Utilisez la droite graduée pour calculer chaque somme.

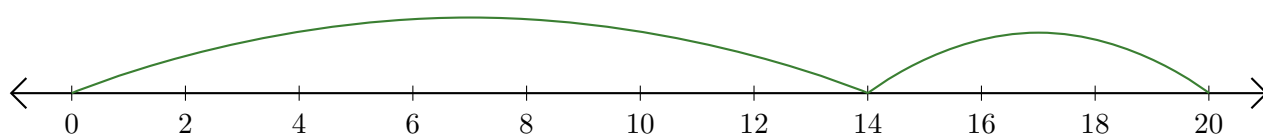
1. $4 + 14 = \underline{18}$



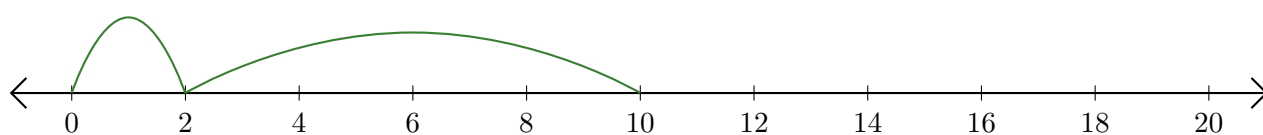
2. $10 + 4 = \underline{14}$



3. $14 + 6 = \underline{20}$



4. $2 + 8 = \underline{10}$



5. $18 + 2 = \underline{20}$

