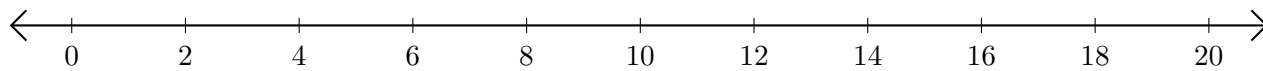


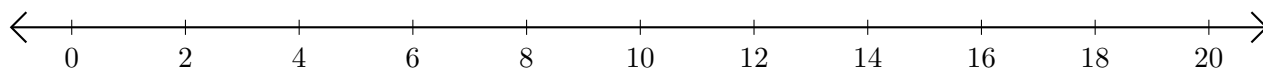
# Addition de Nombres sur une Droite Graduée (E)

Utilisez la droite graduée pour calculer chaque somme.

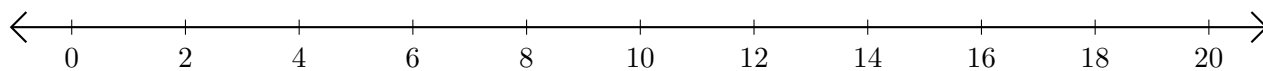
1.  $8 + 12 = \underline{\quad}$



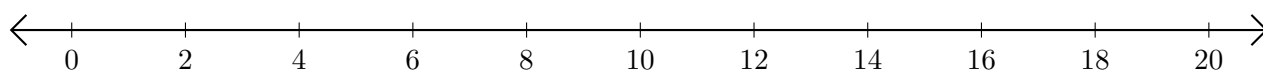
2.  $10 + 2 = \underline{\quad}$



3.  $4 + 10 = \underline{\quad}$



4.  $18 + 2 = \underline{\quad}$



5.  $6 + 12 = \underline{\quad}$

