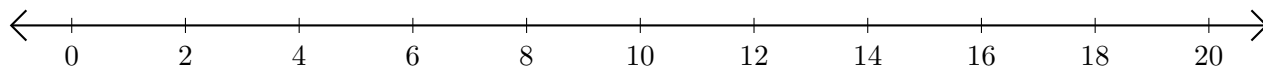


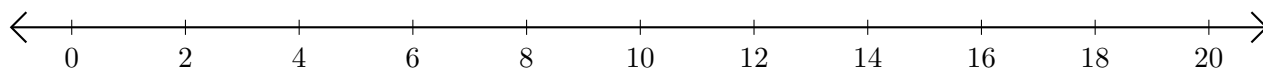
Addition de Nombres sur une Droite Graduée (E)

Utilisez la droite graduée pour calculer chaque somme.

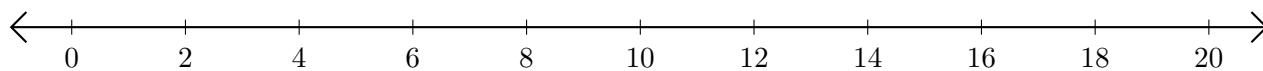
1. $8 + 12 = \underline{\quad}$



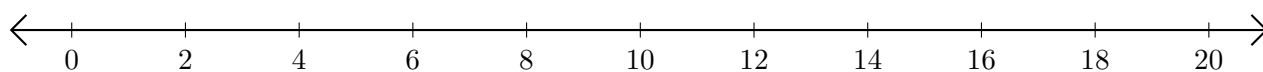
2. $10 + 2 = \underline{\quad}$



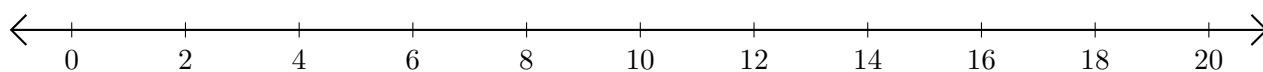
3. $4 + 10 = \underline{\quad}$



4. $18 + 2 = \underline{\quad}$



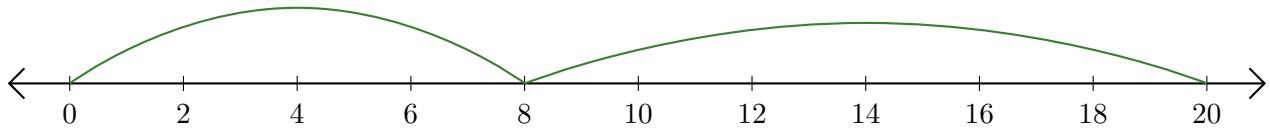
5. $6 + 12 = \underline{\quad}$



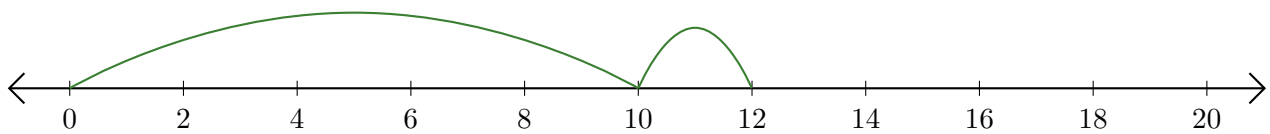
Addition de Nombres sur une Droite Graduée (E) Réponses

Utilisez la droite graduée pour calculer chaque somme.

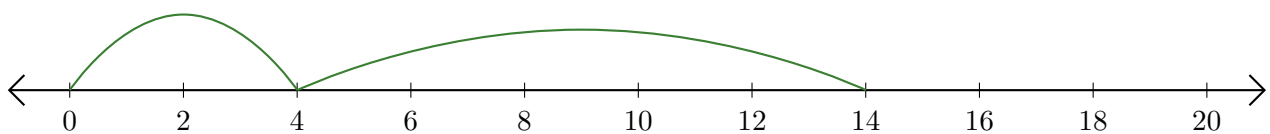
1. $8 + 12 = \underline{20}$



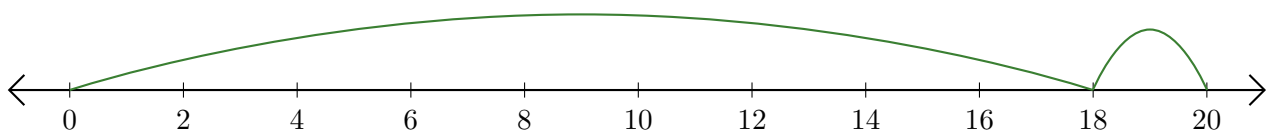
2. $10 + 2 = \underline{12}$



3. $4 + 10 = \underline{14}$



4. $18 + 2 = \underline{20}$



5. $6 + 12 = \underline{18}$

