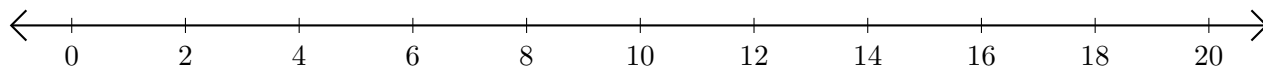


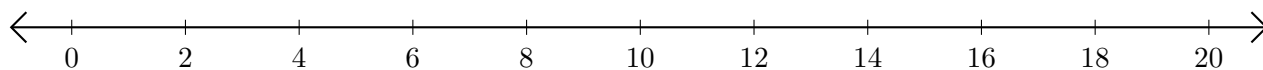
# Addition de Nombres sur une Droite Graduée (C)

Utilisez la droite graduée pour calculer chaque somme.

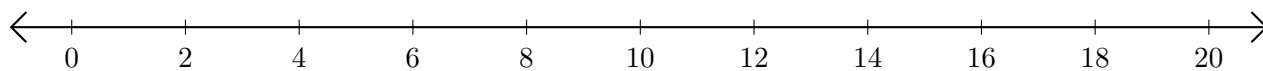
1.  $2 + 18 = \underline{\quad}$



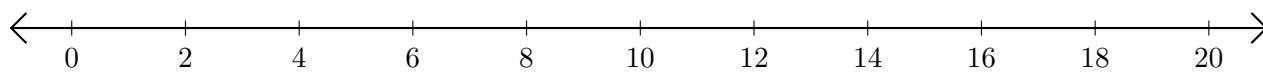
2.  $18 + 2 = \underline{\quad}$



3.  $16 + 4 = \underline{\quad}$



4.  $14 + 6 = \underline{\quad}$



5.  $6 + 12 = \underline{\quad}$

