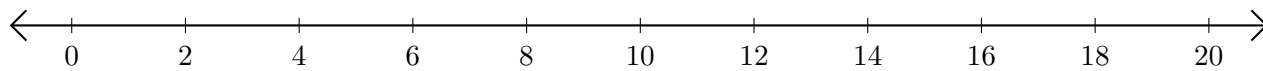


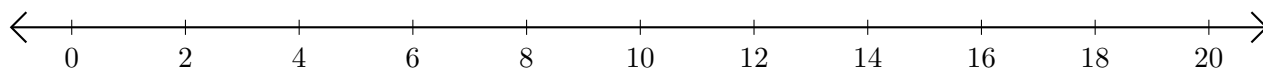
Addition de Nombres sur une Droite Graduée (C)

Utilisez la droite graduée pour calculer chaque somme.

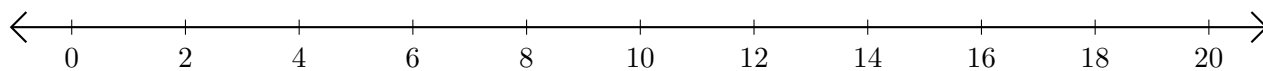
1. $2 + 18 = \underline{\quad}$



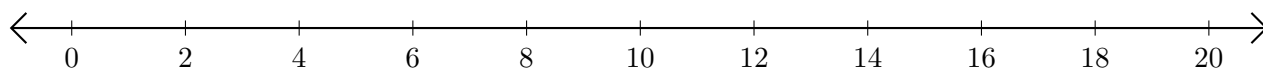
2. $18 + 2 = \underline{\quad}$



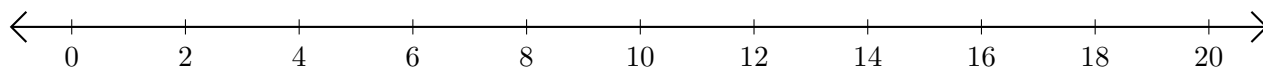
3. $16 + 4 = \underline{\quad}$



4. $14 + 6 = \underline{\quad}$



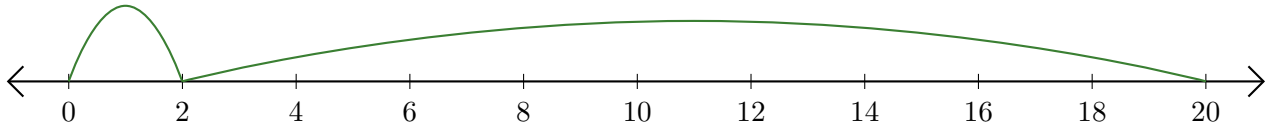
5. $6 + 12 = \underline{\quad}$



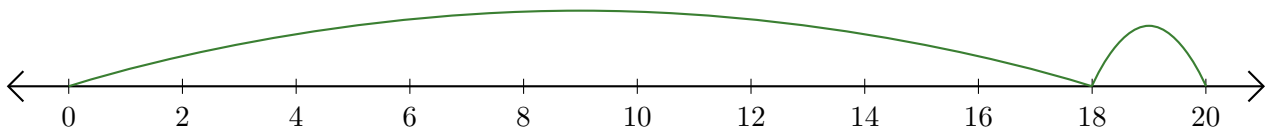
Addition de Nombres sur une Droite Graduée (C) Réponses

Utilisez la droite graduée pour calculer chaque somme.

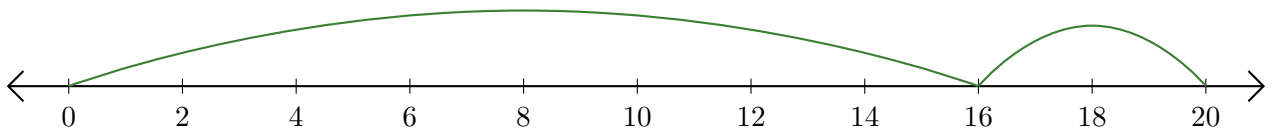
1. $2 + 18 = \underline{20}$



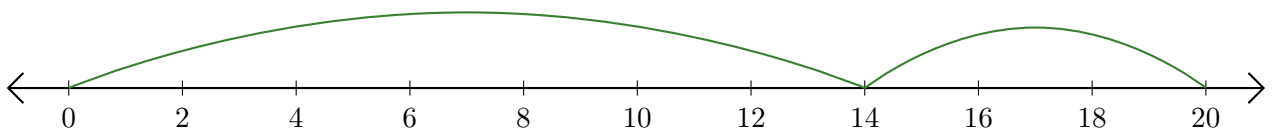
2. $18 + 2 = \underline{20}$



3. $16 + 4 = \underline{20}$



4. $14 + 6 = \underline{20}$



5. $6 + 12 = \underline{18}$

