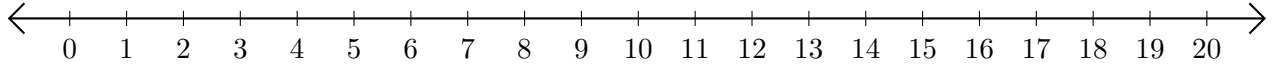


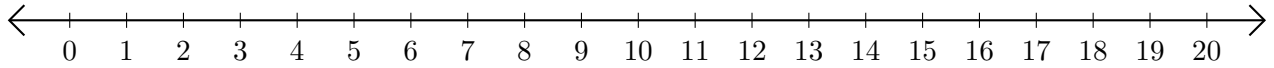
Addition de Nombres sur une Droite Graduée (I)

Utilisez la droite graduée pour calculer chaque somme.

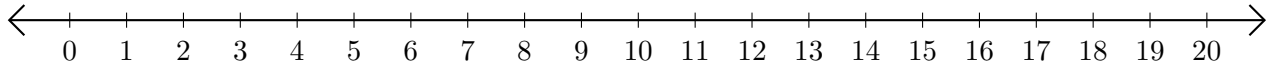
1. $5 + 13 = \underline{\quad}$



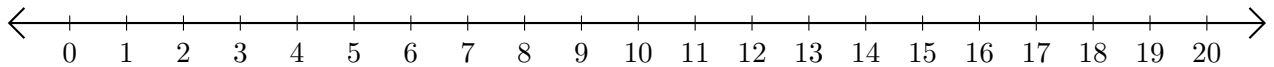
2. $4 + 10 = \underline{\quad}$



3. $11 + 7 = \underline{\quad}$



4. $15 + 4 = \underline{\quad}$



5. $12 + 6 = \underline{\quad}$

