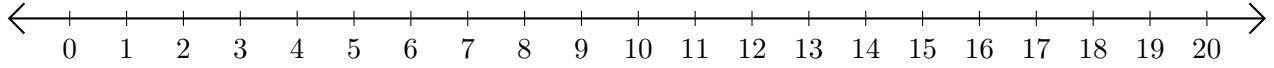


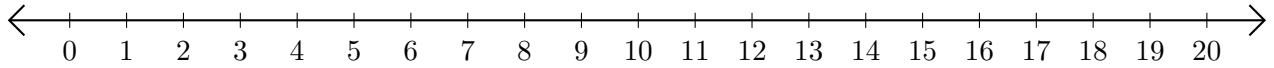
Addition de Nombres sur une Droite Graduée (H)

Utilisez la droite graduée pour calculer chaque somme.

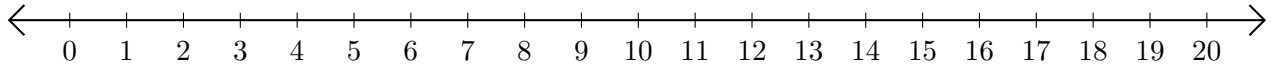
1. $1 + 14 = \underline{\quad}$



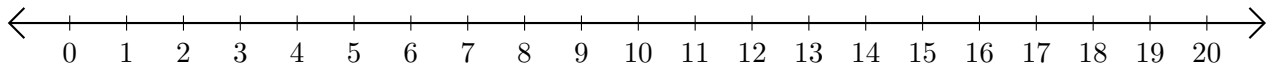
2. $13 + 7 = \underline{\quad}$



3. $17 + 3 = \underline{\quad}$



4. $6 + 10 = \underline{\quad}$



5. $11 + 8 = \underline{\quad}$

