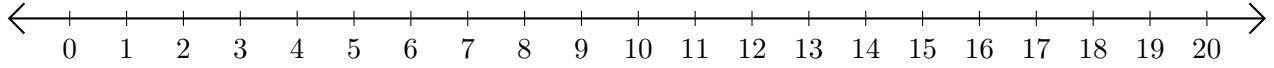


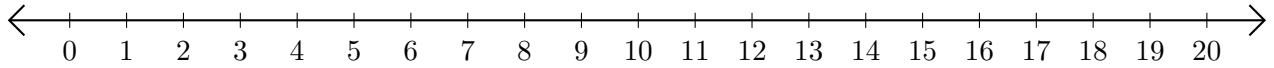
# Addition de Nombres sur une Droite Graduée (H)

Utilisez la droite graduée pour calculer chaque somme.

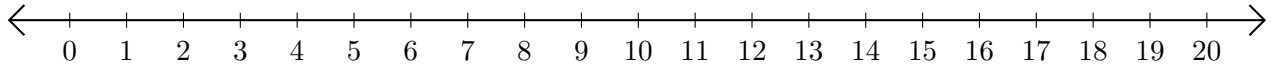
1.  $1 + 14 = \underline{\quad}$



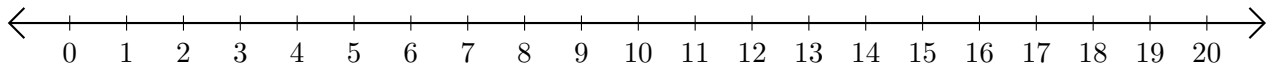
2.  $13 + 7 = \underline{\quad}$



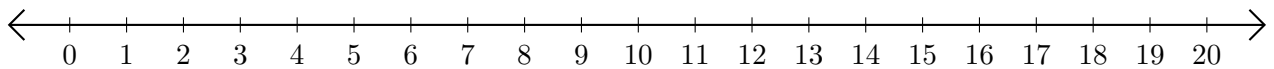
3.  $17 + 3 = \underline{\quad}$



4.  $6 + 10 = \underline{\quad}$



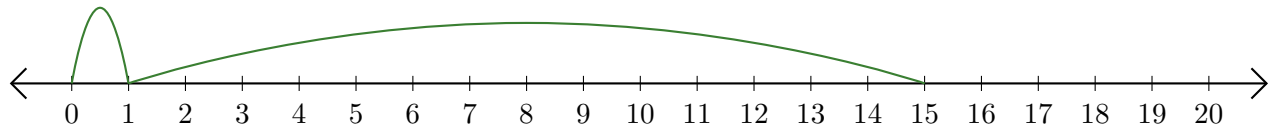
5.  $11 + 8 = \underline{\quad}$



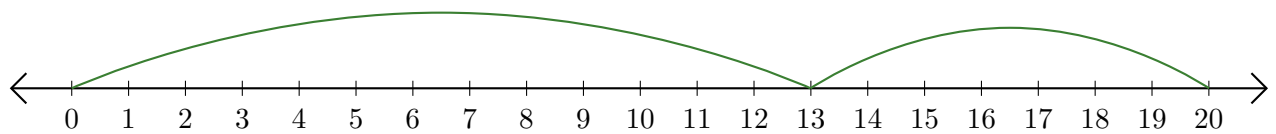
# Addition de Nombres sur une Droite Graduée (H) Réponses

Utilisez la droite graduée pour calculer chaque somme.

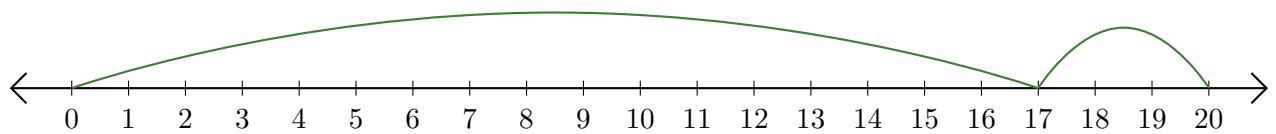
1.  $1 + 14 = \underline{15}$



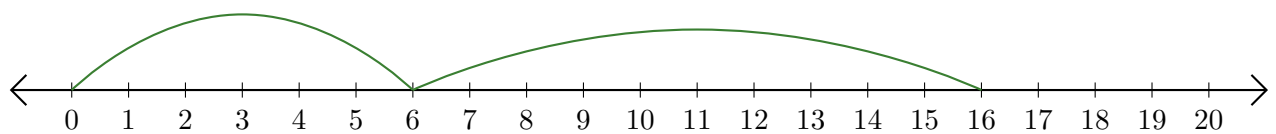
2.  $13 + 7 = \underline{20}$



3.  $17 + 3 = \underline{20}$



4.  $6 + 10 = \underline{16}$



5.  $11 + 8 = \underline{19}$

