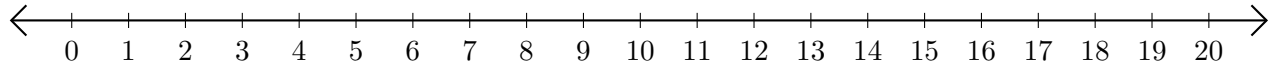


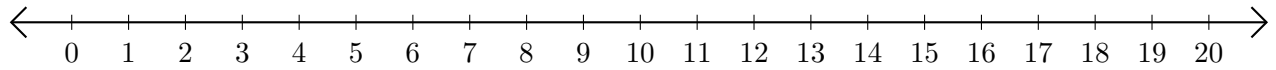
Addition de Nombres sur une Droite Graduée (D)

Utilisez la droite graduée pour calculer chaque somme.

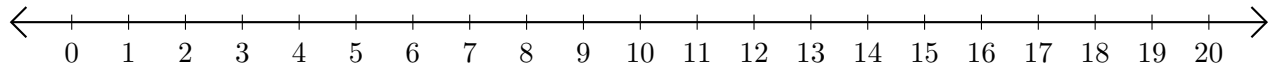
1. $11 + 4 = \underline{\quad}$



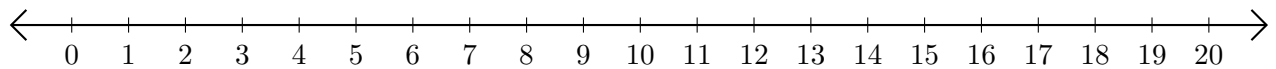
2. $18 + 1 = \underline{\quad}$



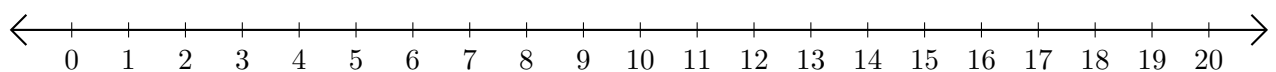
3. $17 + 2 = \underline{\quad}$



4. $9 + 3 = \underline{\quad}$



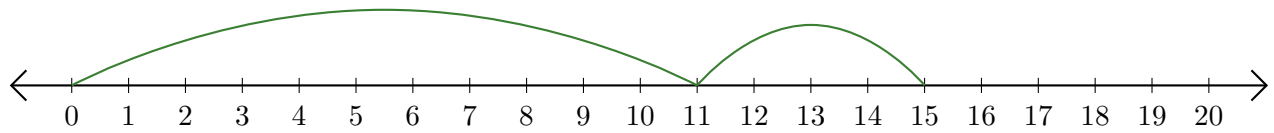
5. $6 + 10 = \underline{\quad}$



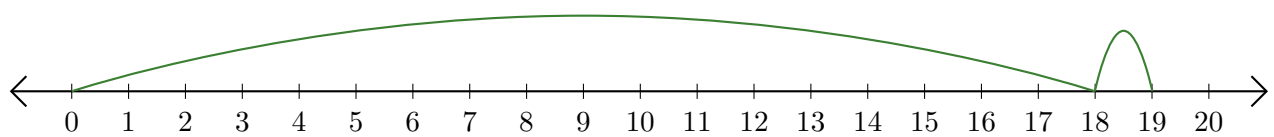
Addition de Nombres sur une Droite Graduée (D) Réponses

Utilisez la droite graduée pour calculer chaque somme.

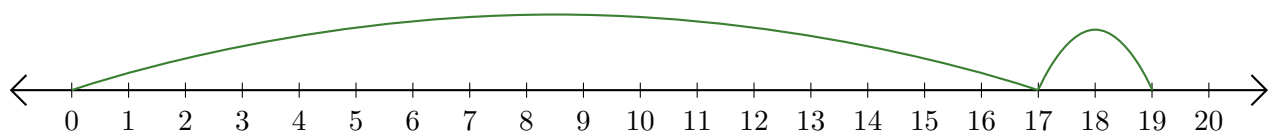
1. $11 + 4 = \underline{15}$



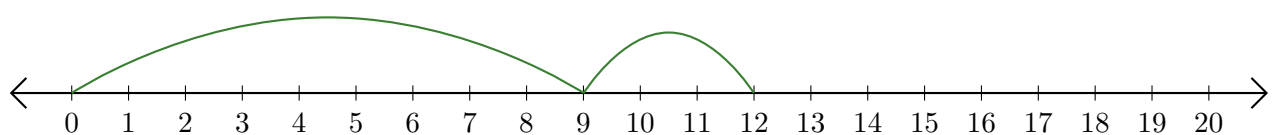
2. $18 + 1 = \underline{19}$



3. $17 + 2 = \underline{19}$



4. $9 + 3 = \underline{12}$



5. $6 + 10 = \underline{16}$

