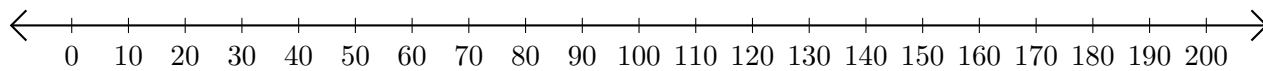


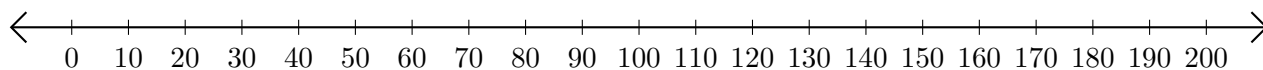
Addition de Nombres sur une Droite Graduée (F)

Utilisez la droite graduée pour calculer chaque somme.

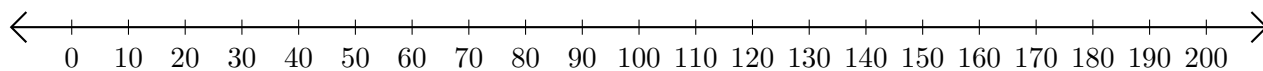
1. $160 + 20 = \underline{\hspace{2cm}}$



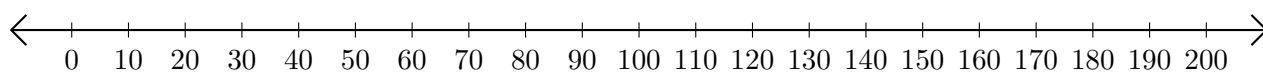
2. $110 + 90 = \underline{\hspace{2cm}}$



3. $20 + 110 = \underline{\hspace{2cm}}$



4. $90 + 100 = \underline{\hspace{2cm}}$



5. $180 + 20 = \underline{\hspace{2cm}}$

