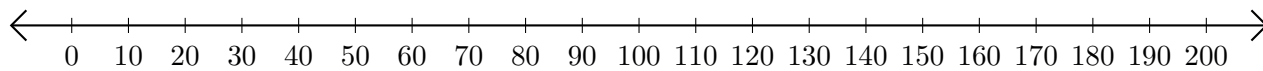


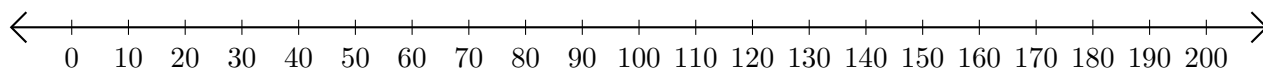
Addition de Nombres sur une Droite Graduée (E)

Utilisez la droite graduée pour calculer chaque somme.

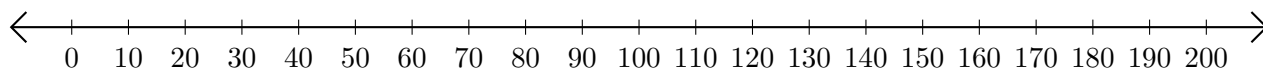
1. $50 + 130 = \underline{\hspace{2cm}}$



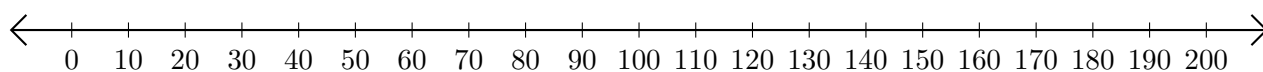
2. $160 + 10 = \underline{\hspace{2cm}}$



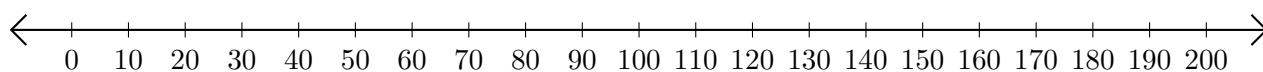
3. $90 + 50 = \underline{\hspace{2cm}}$



4. $170 + 10 = \underline{\hspace{2cm}}$



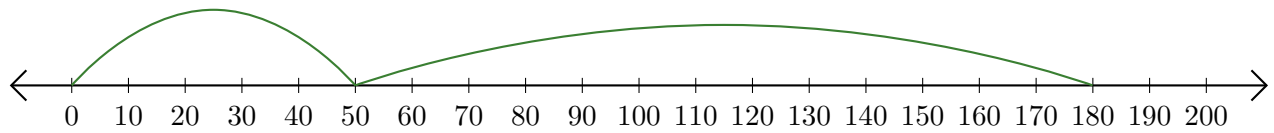
5. $30 + 100 = \underline{\hspace{2cm}}$



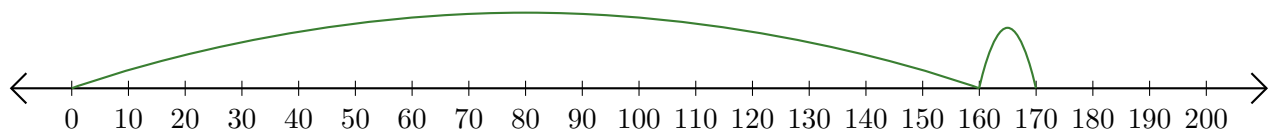
Addition de Nombres sur une Droite Graduée (E) Réponses

Utilisez la droite graduée pour calculer chaque somme.

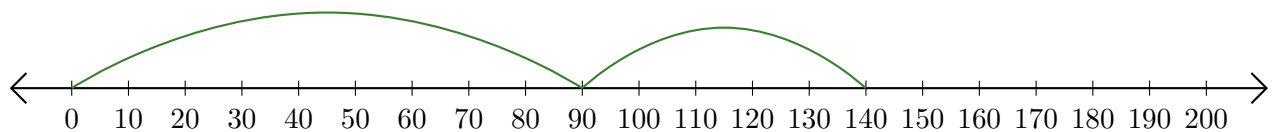
1. $50 + 130 = \underline{180}$



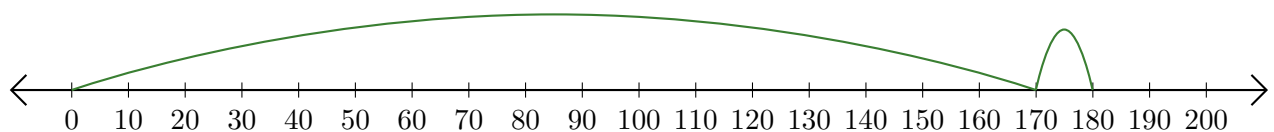
2. $160 + 10 = \underline{170}$



3. $90 + 50 = \underline{140}$



4. $170 + 10 = \underline{180}$



5. $30 + 100 = \underline{130}$

