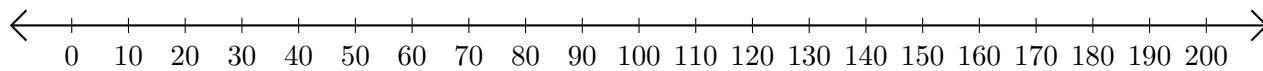


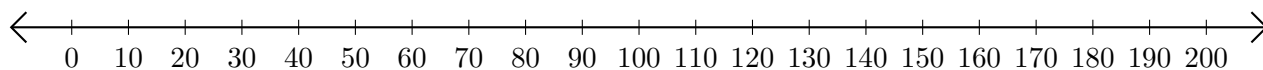
Addition de Nombres sur une Droite Graduée (D)

Utilisez la droite graduée pour calculer chaque somme.

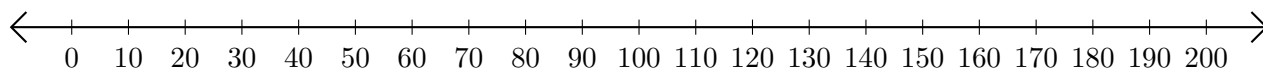
1. $170 + 10 = \underline{\hspace{2cm}}$



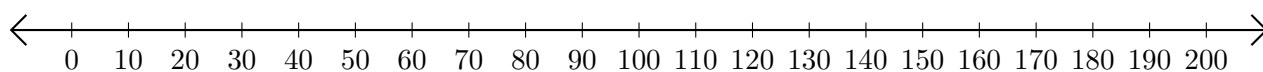
2. $50 + 80 = \underline{\hspace{2cm}}$



3. $60 + 10 = \underline{\hspace{2cm}}$



4. $180 + 10 = \underline{\hspace{2cm}}$



5. $70 + 110 = \underline{\hspace{2cm}}$

