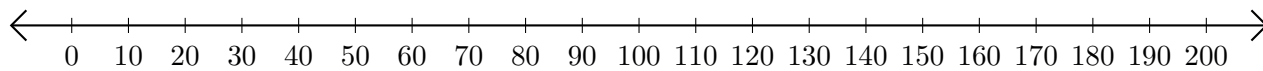


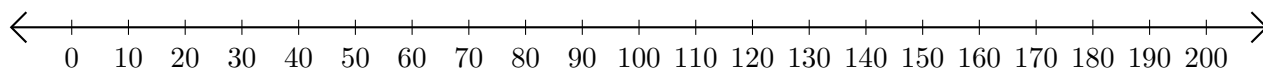
Addition de Nombres sur une Droite Graduée (A)

Utilisez la droite graduée pour calculer chaque somme.

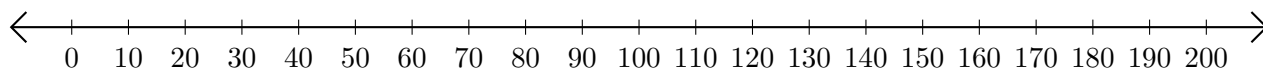
1. $70 + 80 = \underline{\hspace{2cm}}$



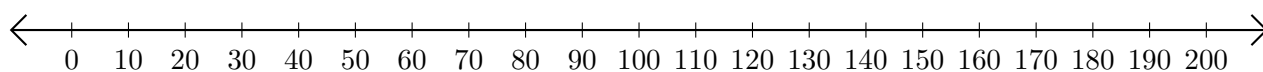
2. $60 + 90 = \underline{\hspace{2cm}}$



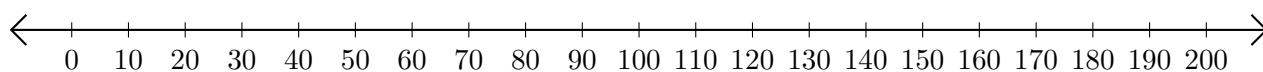
3. $50 + 120 = \underline{\hspace{2cm}}$



4. $80 + 30 = \underline{\hspace{2cm}}$



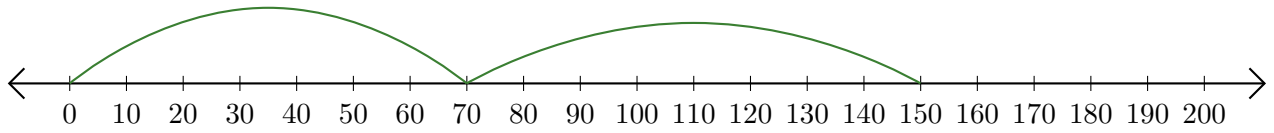
5. $100 + 50 = \underline{\hspace{2cm}}$



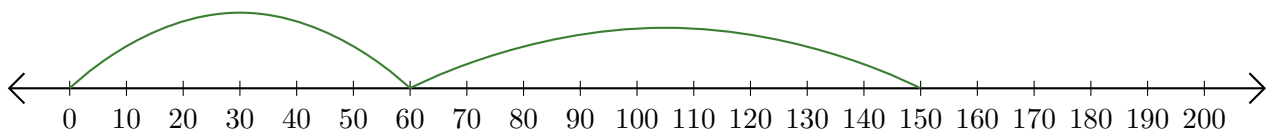
Addition de Nombres sur une Droite Graduée (A) Réponses

Utilisez la droite graduée pour calculer chaque somme.

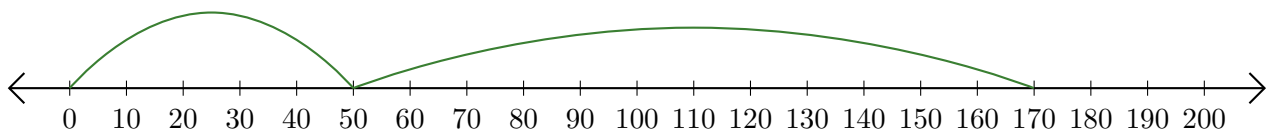
1. $70 + 80 = \underline{150}$



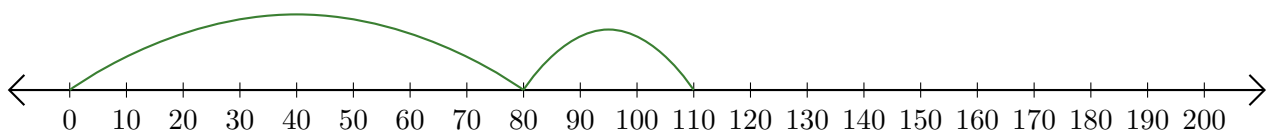
2. $60 + 90 = \underline{150}$



3. $50 + 120 = \underline{170}$



4. $80 + 30 = \underline{110}$



5. $100 + 50 = \underline{150}$

