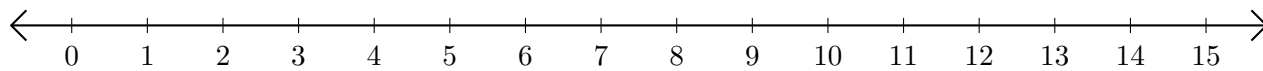


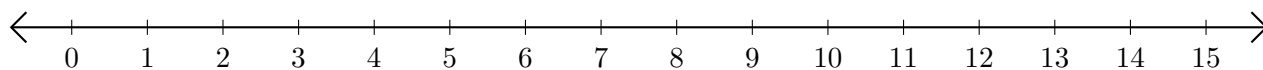
Addition de Nombres sur une Droite Graduée (J)

Utilisez la droite graduée pour calculer chaque somme.

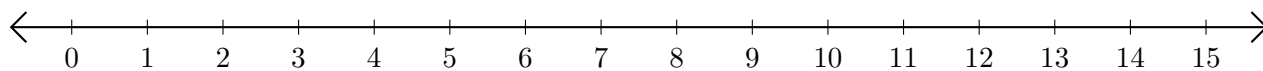
1. $2 + 4 = \underline{\quad}$



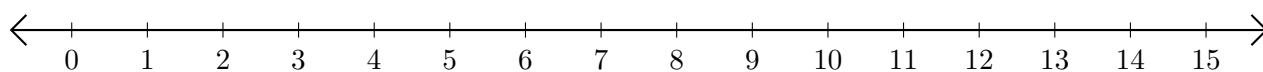
2. $12 + 1 = \underline{\quad}$



3. $14 + 1 = \underline{\quad}$



4. $7 + 3 = \underline{\quad}$



5. $4 + 2 = \underline{\quad}$

