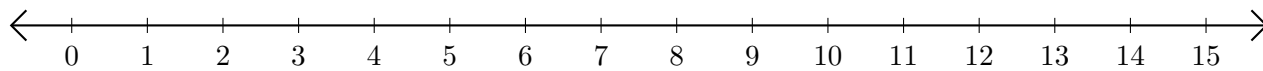


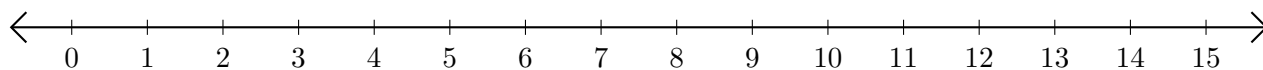
# Addition de Nombres sur une Droite Graduée (J)

Utilisez la droite graduée pour calculer chaque somme.

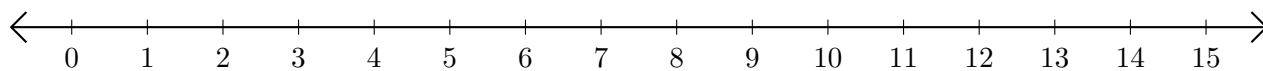
1.  $2 + 4 = \underline{\quad}$



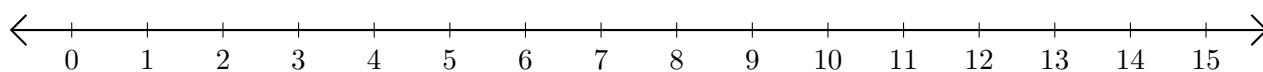
2.  $12 + 1 = \underline{\quad}$



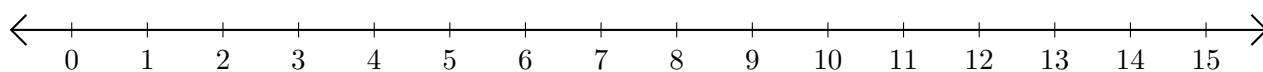
3.  $14 + 1 = \underline{\quad}$



4.  $7 + 3 = \underline{\quad}$



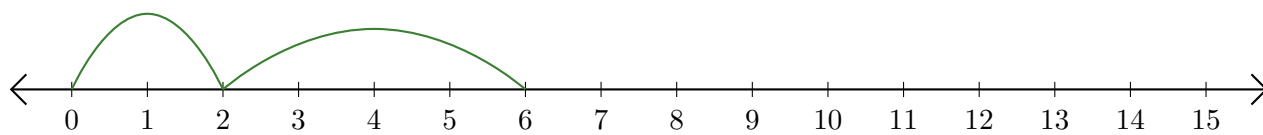
5.  $4 + 2 = \underline{\quad}$



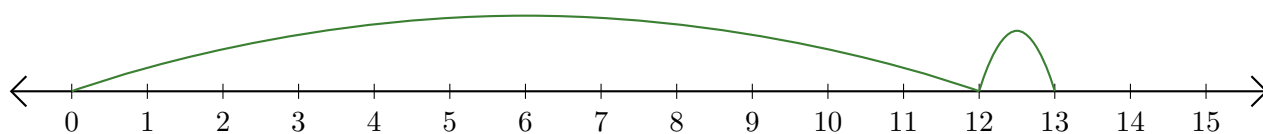
# Addition de Nombres sur une Droite Graduée (J) Réponses

Utilisez la droite graduée pour calculer chaque somme.

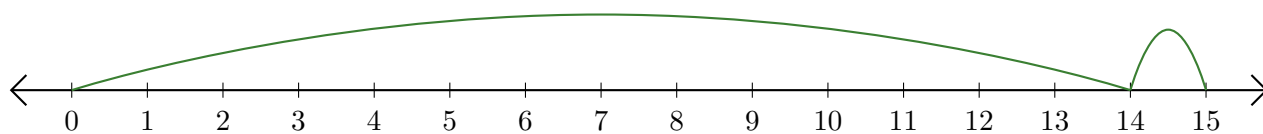
1.  $2 + 4 = \underline{6}$



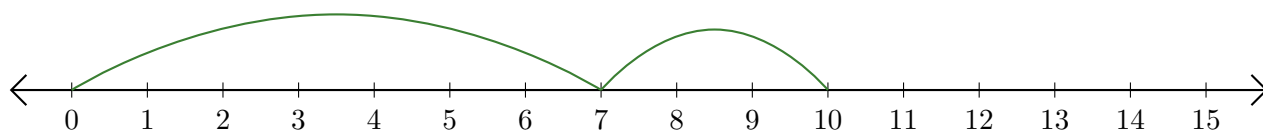
2.  $12 + 1 = \underline{13}$



3.  $14 + 1 = \underline{15}$



4.  $7 + 3 = \underline{10}$



5.  $4 + 2 = \underline{6}$

