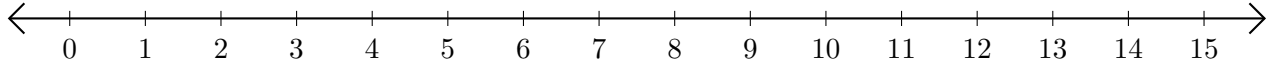


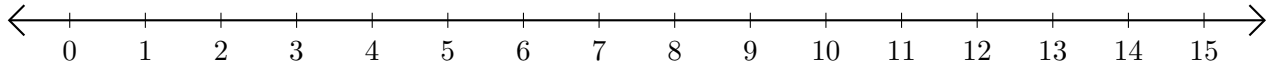
Addition de Nombres sur une Droite Graduée (I)

Utilisez la droite graduée pour calculer chaque somme.

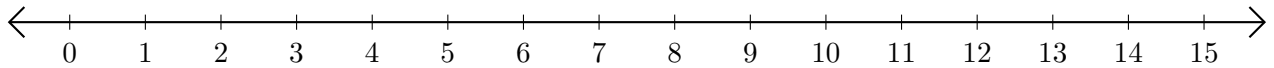
1. $2 + 5 = \underline{\quad}$



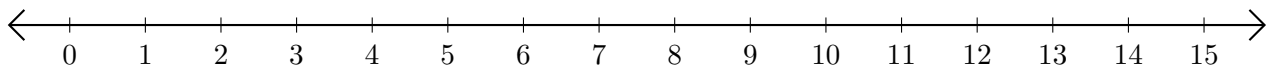
2. $7 + 8 = \underline{\quad}$



3. $6 + 8 = \underline{\quad}$



4. $8 + 7 = \underline{\quad}$



5. $13 + 2 = \underline{\quad}$

