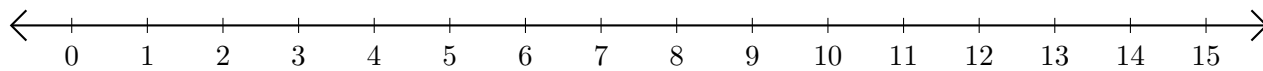


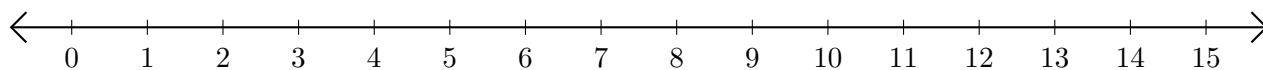
# Addition de Nombres sur une Droite Graduée (A)

Utilisez la droite graduée pour calculer chaque somme.

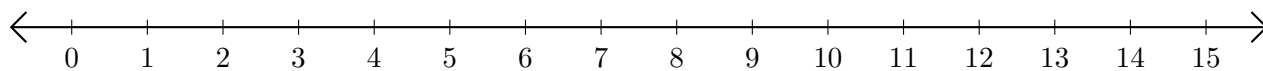
1.  $12 + 3 = \underline{\quad}$



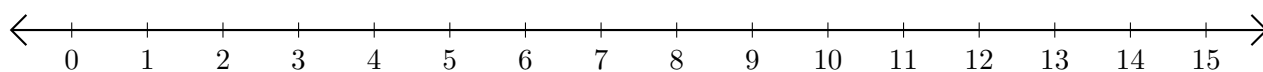
2.  $5 + 1 = \underline{\quad}$



3.  $9 + 4 = \underline{\quad}$



4.  $10 + 1 = \underline{\quad}$



5.  $4 + 9 = \underline{\quad}$

