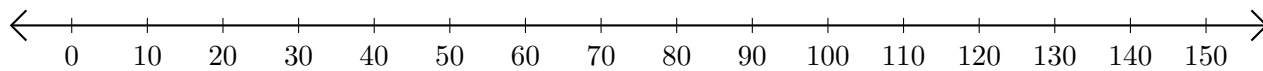


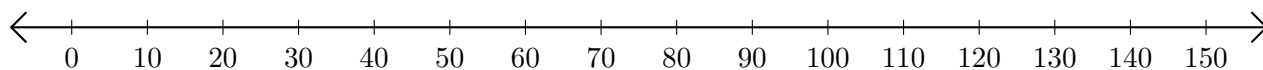
Addition de Nombres sur une Droite Graduée (A)

Utilisez la droite graduée pour calculer chaque somme.

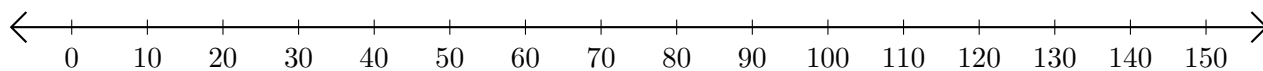
1. $120 + 30 = \underline{\hspace{2cm}}$



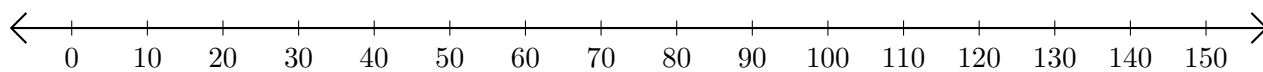
2. $100 + 10 = \underline{\hspace{2cm}}$



3. $30 + 70 = \underline{\hspace{2cm}}$



4. $60 + 20 = \underline{\hspace{2cm}}$



5. $140 + 10 = \underline{\hspace{2cm}}$

