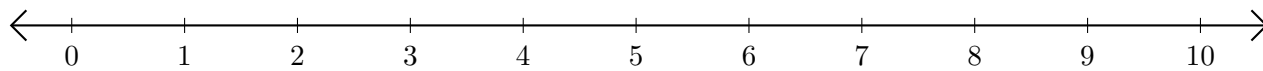


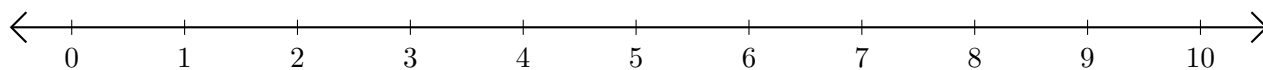
Addition de Nombres sur une Droite Graduée (H)

Utilisez la droite graduée pour calculer chaque somme.

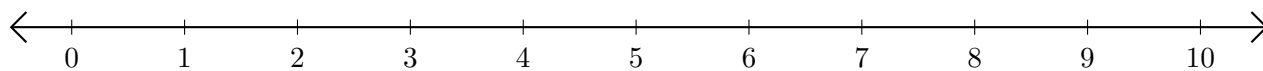
1. $8 + 2 = \underline{\quad}$



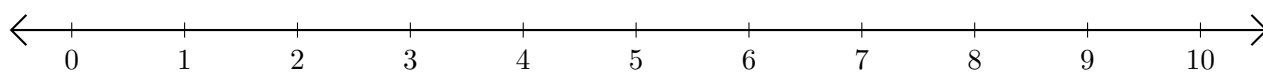
2. $9 + 1 = \underline{\quad}$



3. $7 + 2 = \underline{\quad}$



4. $1 + 6 = \underline{\quad}$



5. $6 + 2 = \underline{\quad}$

