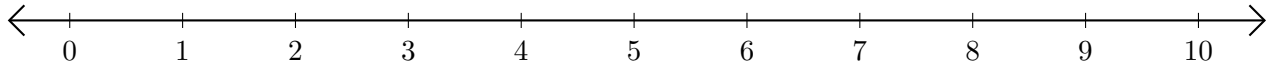


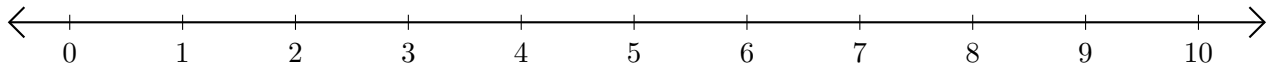
Addition de Nombres sur une Droite Graduée (G)

Utilisez la droite graduée pour calculer chaque somme.

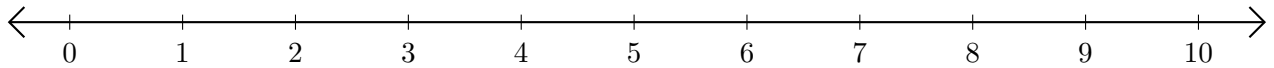
1. $5 + 4 = \underline{\quad}$



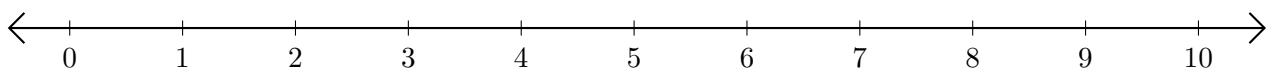
2. $8 + 2 = \underline{\quad}$



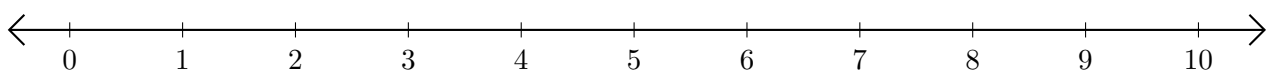
3. $2 + 4 = \underline{\quad}$



4. $6 + 2 = \underline{\quad}$



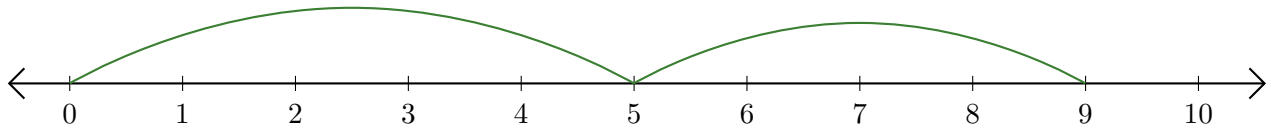
5. $9 + 1 = \underline{\quad}$



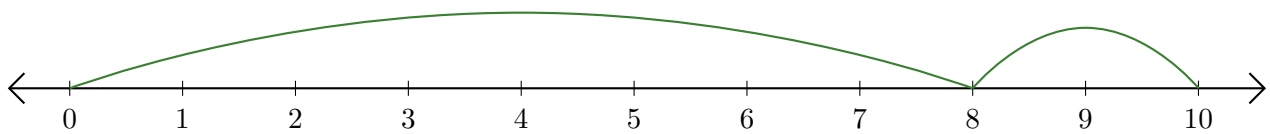
Addition de Nombres sur une Droite Graduée (G) Réponses

Utilisez la droite graduée pour calculer chaque somme.

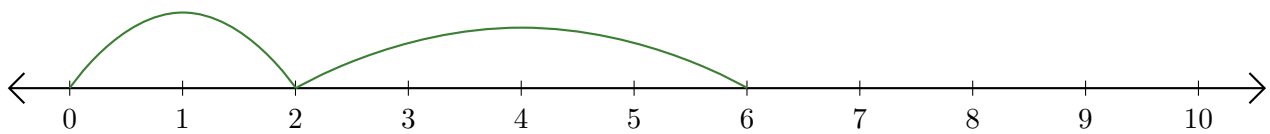
1. $5 + 4 = \underline{9}$



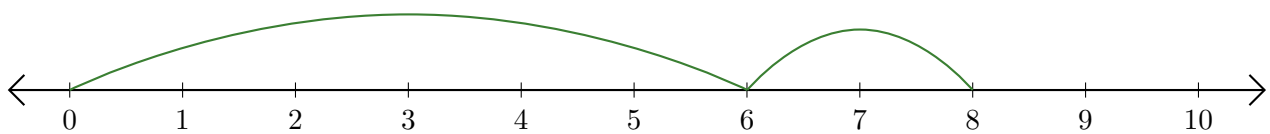
2. $8 + 2 = \underline{10}$



3. $2 + 4 = \underline{6}$



4. $6 + 2 = \underline{8}$



5. $9 + 1 = \underline{10}$

