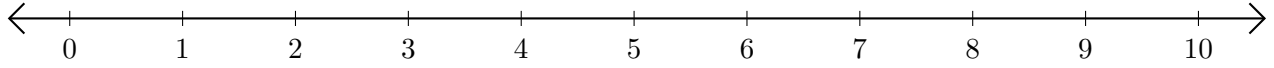


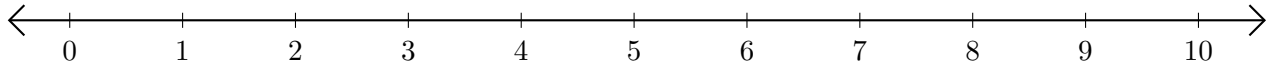
# Addition de Nombres sur une Droite Graduée (E)

Utilisez la droite graduée pour calculer chaque somme.

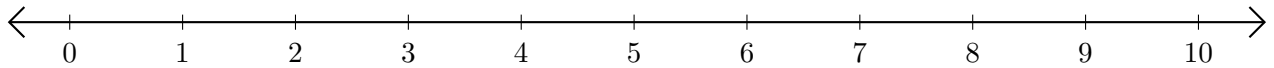
1.  $4 + 6 = \underline{\quad}$



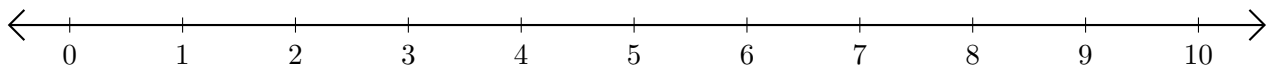
2.  $1 + 6 = \underline{\quad}$



3.  $7 + 2 = \underline{\quad}$



4.  $8 + 1 = \underline{\quad}$



5.  $5 + 3 = \underline{\quad}$

