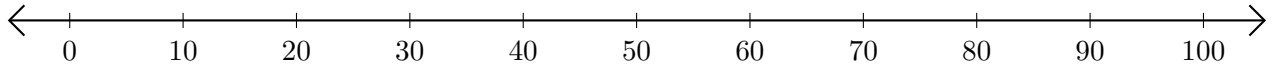


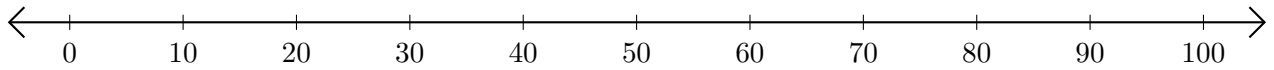
Addition de Nombres sur une Droite Graduée (G)

Utilisez la droite graduée pour calculer chaque somme.

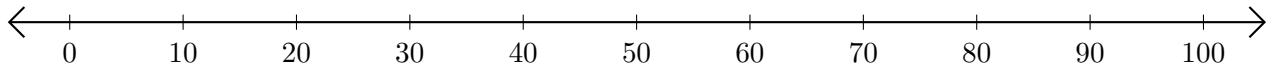
1. $30 + 10 = \underline{\quad}$



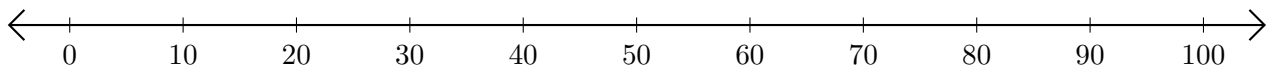
2. $50 + 20 = \underline{\quad}$



3. $90 + 10 = \underline{\quad}$



4. $10 + 80 = \underline{\quad}$



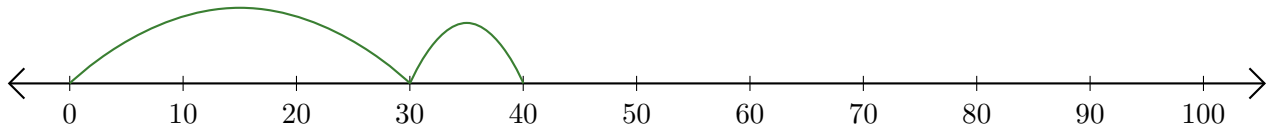
5. $20 + 80 = \underline{\quad}$



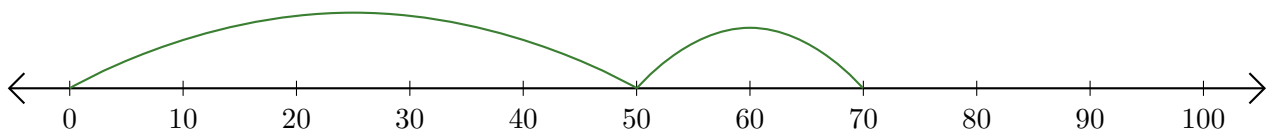
Addition de Nombres sur une Droite Graduée (G) Réponses

Utilisez la droite graduée pour calculer chaque somme.

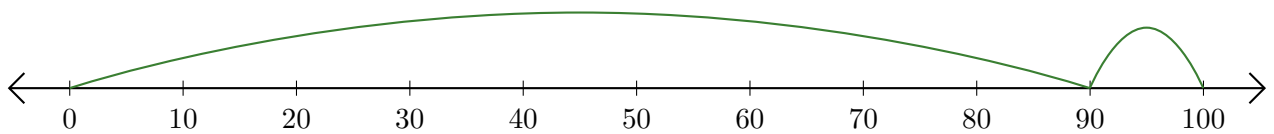
1. $30 + 10 = \underline{40}$



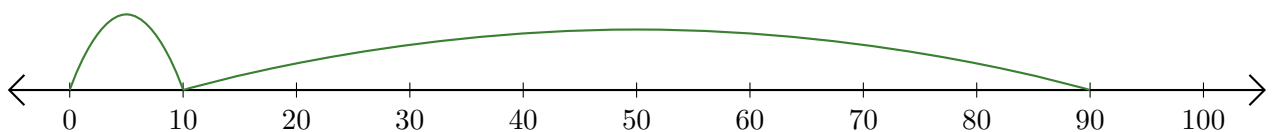
2. $50 + 20 = \underline{70}$



3. $90 + 10 = \underline{100}$



4. $10 + 80 = \underline{90}$



5. $20 + 80 = \underline{100}$

