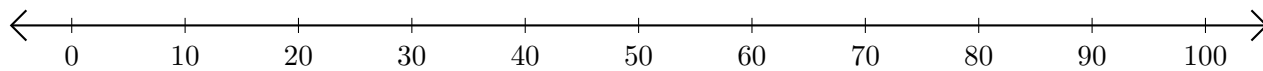


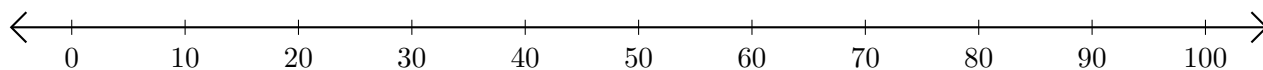
# Addition de Nombres sur une Droite Graduée (E)

Utilisez la droite graduée pour calculer chaque somme.

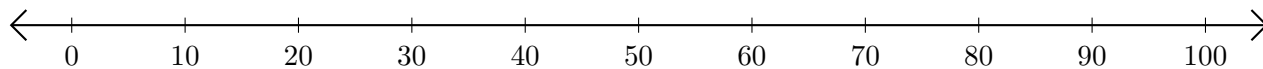
1.  $50 + 30 = \underline{\quad}$



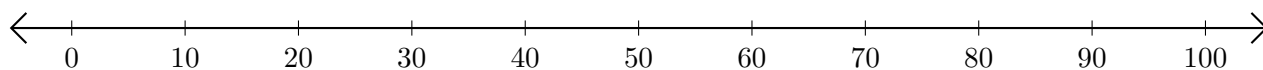
2.  $40 + 20 = \underline{\quad}$



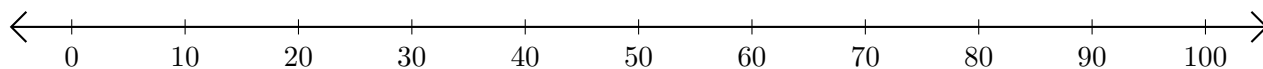
3.  $20 + 60 = \underline{\quad}$



4.  $90 + 10 = \underline{\quad}$



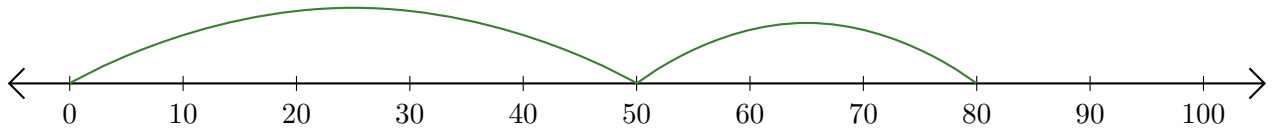
5.  $80 + 10 = \underline{\quad}$



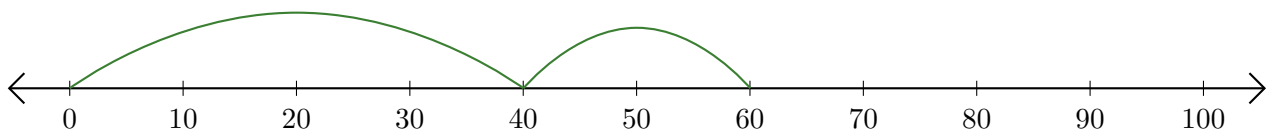
# Addition de Nombres sur une Droite Graduée (E) Réponses

Utilisez la droite graduée pour calculer chaque somme.

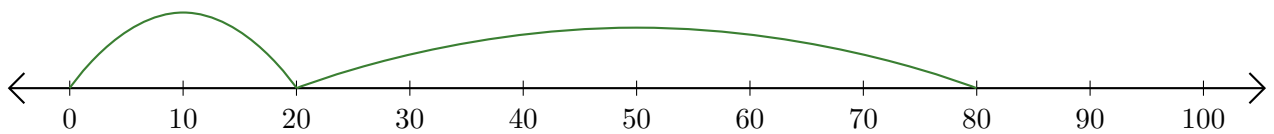
1.  $50 + 30 = \underline{80}$



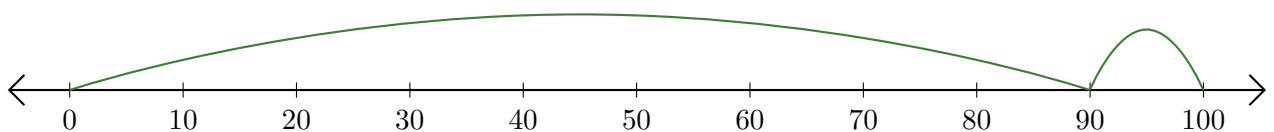
2.  $40 + 20 = \underline{60}$



3.  $20 + 60 = \underline{80}$



4.  $90 + 10 = \underline{100}$



5.  $80 + 10 = \underline{90}$

